

# REASONING

03:00 PM



## देखना ना भूले

TARGET



CHSL

CGL

MTS



# SSC

#MISSIONSELECTION  
CHSL 2019

PART -2

Mahendra's

GET COMPLETE ST SOLUTION WITH- VIDEO BOX



FINE TUNE YOUR T

Subscribe  
NOW

BOOST YOUR PREPARATIONS WITH MAHENDRAS: STUDY MATERIAL, E-MICA, E-NEWS, BAGS & MUCH MORE. VISIT NOW: m





*Capture Your Selection*



 *Mahendra's*

**MEGA**  
**OFFER**

**19<sup>th</sup> MAY** 2019 TO **31<sup>st</sup> MAY** 2019

BANK, SSC, RAILWAY & STATE LEVEL EXAMS


TEST START FROM @ **50 PAISE**

 *Mahendra's*

GET COMPLETE ST SOLUTION WITH- **VIDEO BOX**



FINE TUNE YOUR T

Subscribe  
NOW 

BOOST YOUR PREPARATIONS WITH MAHENDRAS: STUDY MATERIAL, E-MICA, E-NEWS, BAGS & MUCH MORE. VISIT NOW: [mahendras.com](http://mahendras.com)





 **Mahendra's**

GET COMPLETE ST SOLUTION WITH- **VIDEO BOX**



FINE TUNE YOUR T<sup>h</sup>

Subscribe  
NOW 

BOOST YOUR PREPARATIONS WITH MAHENDRAS: STUDY MATERIAL, E-MICA, E-NEWS, BAGS & MUCH MORE. VISIT NOW: [www.mahendras.com](http://www.mahendras.com)



How many pairs of letters are there in the word **MINORITY** which have as many letters between them as they have in alphabetical series ?

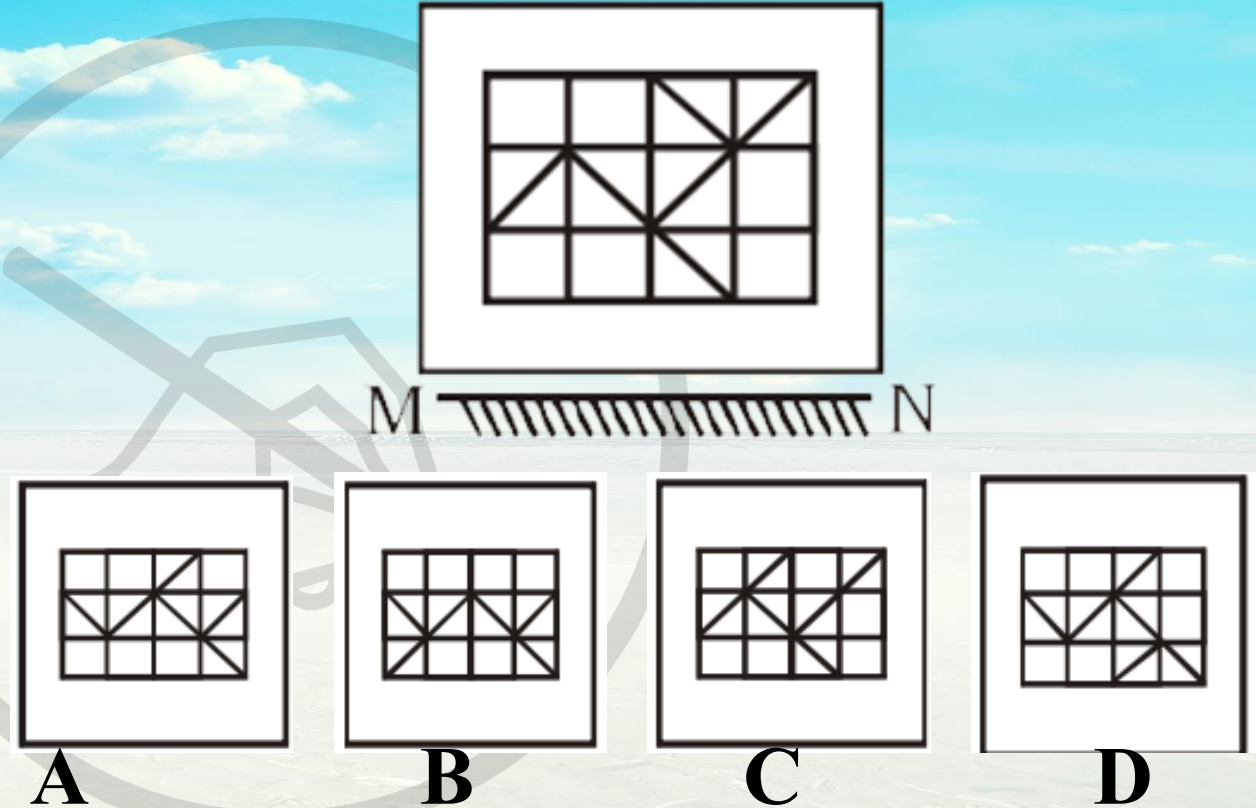


- A. None
- B. One
- C. Two
- D. Three



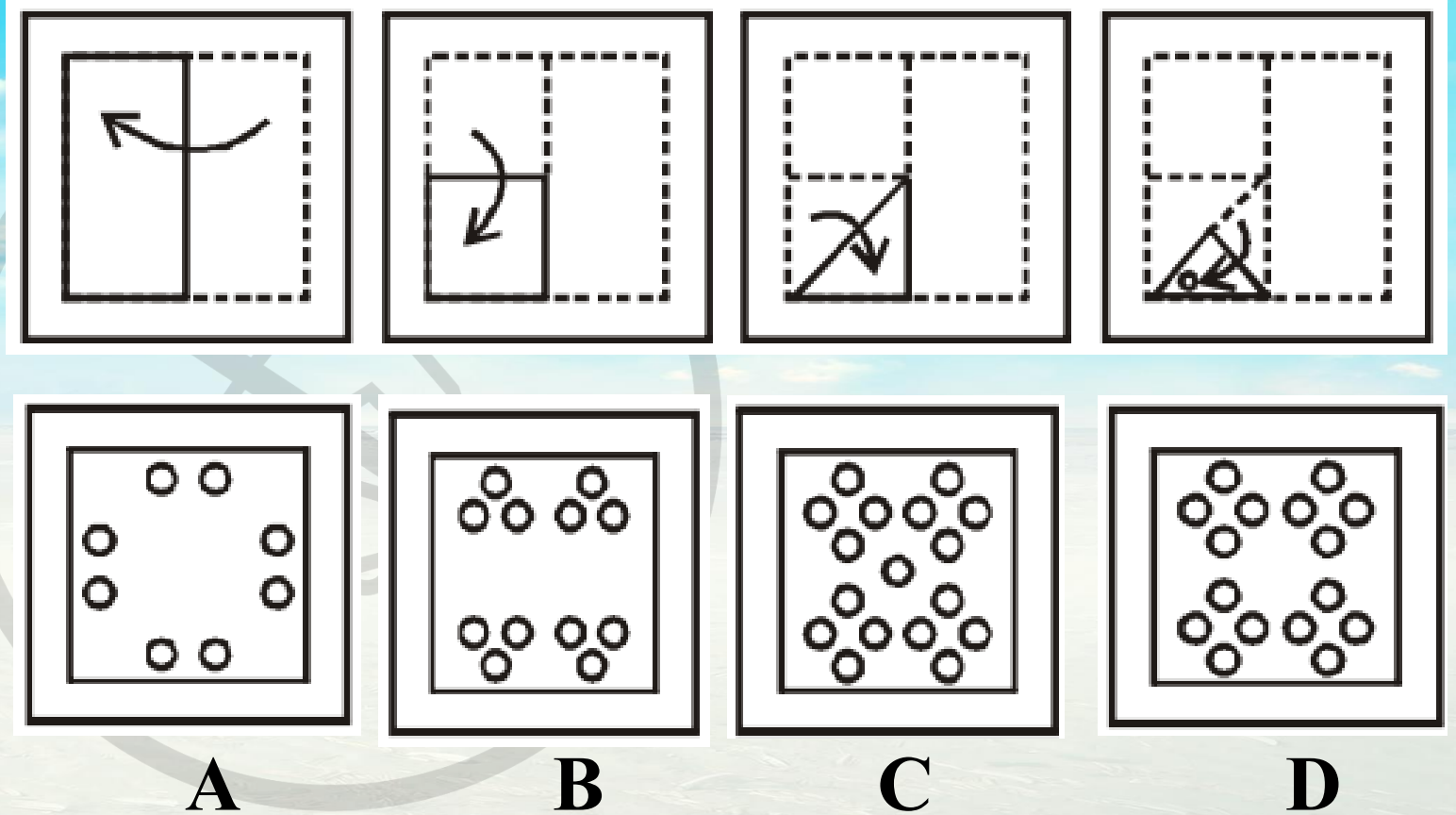


If a mirror is placed on the line MN, then which of the following answer figures will be the correct reflection of the question figure ?





A piece of paper is folded and cut as shown below in the question figures.  
From the given answer figures, indicate how it will appear when opened ?







Laxmi is elder than Meenu, Leela is elder than Meenu but younger than Laxmi.  
Lata is younger than both Meenu but Hari and Hari is younger than Meenu.  
Who is the youngest ? लक्ष्मी मीनू से बड़ी है, लीला मीनू से बड़ी है लेकिन लक्ष्मी से छोटी है।  
लता दोनों मीनू और हरि से छोटी है लेकिन हरि मीनू से छोटा है। सबसे छोटा कौन है?



- A. Laxmi
- B. Meenu
- C. Leela
- D. Lata



Pointing to a lady Ram said. She is the daughter of the only sister of my father. How is lady related to Ram ? एक महिला की ओर इशारा करते हुए राम ने कहा , “वह मेरे पिता की इकलौती बहन की बेटी है ।” महिला राम से कैसे संबंधित है?

A. Mother

B. Aunt

C. Sister

D. Cousin Sister



 **Mahendra's**

GET COMPLETE ST SOLUTION WITH- **VIDEO BOX**



FINE TUNE YOUR T

Subscribe  
NOW 

BOOST YOUR PREPARATIONS WITH MAHENDRAS: STUDY MATERIAL, E-MICA, E-NEWS, BAGS & MUCH MORE. VISIT NOW: [www.mahendras.com](http://www.mahendras.com)





If Sheela celebrated her marriage anniversary on Wednesday, 6th January 1965, when will she celebrate her marriage anniversary on the same day ? अगर शीला ने बुधवार 6 जनवरी 1965 को अपनी शादी की सालगिरह मनाई, तो वह उसी दिन अपनी शादी की सालगिरह कब मनाएंगी?

- A. 6th January 1972
- B. 6th January 1974
- C. 6th January 1970
- D. 6th January 1971



 **Mahendra's**

GET COMPLETE ST SOLUTION WITH- **VIDEO BOX**



FINE TUNE YOUR T

Subscribe  
NOW 

BOOST YOUR PREPARATIONS WITH MAHENDRAS: STUDY MATERIAL, E-MICA, E-NEWS, BAGS & MUCH MORE. VISIT NOW: [www.mahendras.com](http://www.mahendras.com)



If every alternate letter, starting from B is deleted from the following alphabets, which of the following will be the tenth letter from the right end ?

**ABCDEFGHIJKLMNOPQRSTUVWXYZ**

A. D

B. H

C. E

D. G



 **Mahendra's**

GET COMPLETE ST SOLUTION WITH- **VIDEO BOX**



FINE TUNE YOUR T<sup>h</sup>

Subscribe  
NOW 

BOOST YOUR PREPARATIONS WITH MAHENDRAS: STUDY MATERIAL, E-MICA, E-NEWS, BAGS & MUCH MORE. VISIT NOW: [www.mahendras.com](http://www.mahendras.com)





Anita and Geeta are experts in dancing and music. Seeta and Geeta are experts in music and painting. Anita and Neeta are experts in debate and dancing. Neeta and Seeta are experts in painting and debate. Which girl's are not expert(s) in painting ?/अनीता और गीता नृत्य और संगीत में विशेषज्ञ हैं। सीता और गीता संगीत और चित्रकला के विशेषज्ञ हैं। अनीता और नीता बहस और नृत्य में विशेषज्ञ हैं। नीता और सीता पेंटिंग और डिबेट में विशेषज्ञ हैं। पेंटिंग में कौन सी लड़की विशेषज्ञ नहीं हैं?

A. Seeta only

B. Anita and Geeta

C. Neeta only

D. Anita only



 Mahendra's

GET COMPLETE ST SOLUTION WITH- **VIDEO BOX**



FINE TUNE YOUR T<sup>l</sup>

Subscribe  
NOW 

BOOST YOUR PREPARATIONS WITH MAHENDRAS: STUDY MATERIAL, E-MICA, E-NEWS, BAGS & MUCH MORE. VISIT NOW: [www.mahendras.com](http://www.mahendras.com)



In an imaginary operation of mathematics, '+' means **multiply**, '××' means **subtract**, '÷÷' means **add** and '-' means **divide**. In this operation of mathematics all other rules are same as in present system. Which of these is the answer to the following ?

$$175 - 25 \div \div 5 + 20 \times \times 3 + 10$$

A. 160

B. 2370

C. 77

D. 240







What time between 3 and 4 O' clock, the angle of the hands will be one third of a right angle ?/ 3 - 4 घड़ी के बीच का समय, हाथों का कोण एक समकोण का एक तिहाई होगा?

A. 3 hours  $10\frac{10}{11}$  minutes

B. 3 hours  $16\frac{4}{11}$  minutes

C. 3 hours  $21\frac{9}{11}$  minutes

D. Either A or C



 **Mahendra's**

GET COMPLETE ST SOLUTION WITH- **VIDEO BOX**



FINE TUNE YOUR T

Subscribe  
NOW 

BOOST YOUR PREPARATIONS WITH MAHENDRAS: STUDY MATERIAL, E-MICA, E-NEWS, BAGS & MUCH MORE. VISIT NOW: [www.mahendras.com](http://www.mahendras.com)



**Which day falls on 16 March, 1989 ?**

**16 मार्च 1989 को कौन सा दिन पड़ता है?**



**A. Thursday**

**B. Friday**

**C. Saturday**

**D. Sunday**

**Mahendra's**

**GET COMPLETE ST SOLUTION WITH- VIDEO BOX**



**FINE TUNE YOUR T**

**Subscribe NOW**

**BOOST YOUR PREPARATIONS WITH MAHENDRAS: STUDY MATERIAL, E-MICA, E-NEWS, BAGS & MUCH MORE. VISIT NOW: n**





# Which of the following diagrams represents the relationships between Book, Page, Paragraph




A



B



C



D

 **Mahendra's**

GET COMPLETE ST SOLUTION WITH- **VIDEO BOX**



FINE TUNE YOUR T

**Subscribe**  
NOW 

BOOST YOUR PREPARATIONS WITH MAHENDRAS: STUDY MATERIAL, E-MICA, E-NEWS, BAGS & MUCH MORE. VISIT NOW: [mahendras.com](http://mahendras.com)



**Statement:** All Cat is mouse

**कथन:** सभी बिल्लियाँ चूहे है।

**Conclusion:** I. Some cats are dogs

**निष्कर्ष:** I. कुछ बिल्लियाँ कुत्ते हैं।

All mouses are dogs

सभी चूहे कुत्ते हैं।

II. No cat is dog.

II कोई बिल्ली कुत्ता नहीं है।

**A. Only Conclusion I follows**

**B. Both conclusion I and II follow**

**C. Neither Conclusion I nor II follows**

**D. Only Conclusion I or either I or II follows**



**Mahendra's**

**GET COMPLETE ST SOLUTION WITH- VIDEO BOX**



FINE TUNE YOUR T


**Subscribe NOW**

BOOST YOUR PREPARATIONS WITH MAHENDRAS: STUDY MATERIAL, E-MICA, E-NEWS, BAGS & MUCH MORE. VISIT NOW: n





If a mirror is placed on the line AB, then which of the answer figures is the right image of the given figure ?





USE  
PROMO CODE  
**RCOMBOM7DEXR**  
TO GET **5%**  
ADDITIONAL  
OFF

COMBO  
VIDEO  
GURU

USE  
PROMO CODE  
**BOOSTRB143F7**  
TO GET **5%**  
ADDITIONAL  
OFF

SINGLE  
VIDEO  
GURU

 **Mahendra's**

GET COMPLETE ST SOLUTION WITH- **VIDEO BOX**



FINE TUNE YOUR TV

Subscribe  
NOW 

BOOST YOUR PREPARATIONS WITH MAHENDRAS: STUDY MATERIAL, E-MICA, E-NEWS, BAGS & MUCH MORE. VISIT NOW: [www.mahendras.com](http://www.mahendras.com)





**LIKE**

**COMMENT**

**SHARE**

**SUBSCRIBE**