



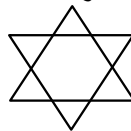


## REASONING (SSC CHSL CLASS 19 APRIL 2019)

1. Select the related word/letters/number from the given alternatives  
Editor/ संपादक : Newspaper / समाचार पत्र :: ? : ?  
a) Farmer/ किसान : Sell/ बेचो    b) Wall/दीवार : Mason/मेसन  
c) Chef / शेफ : Knife/चाकू    d) Poet / कवि : Poem/कविता
2. Select the related word/letters/number from the given alternatives  
52 : 57 :: 46 : ?  
a) 53  
b) 49  
c) 55  
d) 51
3. Select the related word/letters/number from the given alternatives  
CEG : IKM :: FHJ : ?  
a) LNP  
b) KMO  
c) LNO  
d) KMN
4. Select the odd word pair from the given alternatives.  
निम्नलिखित में से भिन्न ज्ञात करें  
a) Sister/ बहन – Female/ स्त्री  
b) Male/पुरुष – Father/पिता  
c) Brother/भाई – Male/पुरुष  
d) Grandmother/ दादी – Female/स्त्री
5. Select the odd word pair from the given alternatives.  
निम्नलिखित में से भिन्न ज्ञात करें  
a) PNLJ  
b) USQO  
c) MKIG  
d) QNKH
6. Select the related odd one from the given alternatives  
निम्न में से भिन्न ज्ञात करे  
a) 14 – 28  
b) 16 – 32  
c) 18 – 36  
d) 12 – 34
7. Select the missing number from the given series.  
13, 16, 20, 23, 27, ?  
a) 30  
b) 29  
c) 31  
d) 33
8. Select the missing number from the given series.  
BM, FQ, JU, ?, RC  
a) MX  
b) MZ  
c) NY  
d) OY
9. Which two signs should be interchanged to correct the equation?  
 $1.5 + 8 \times 9 - 16 \div 2 = 4$   
a) + and x  
b) + and ÷  
c) - and +  
d) ÷ and -
10. In a certain code language, 'x' represents '+', '÷' represents 'x', '-' represents '÷' and '+' represents '-'. Find out the answer to the following question.

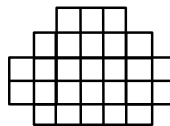
$$8 \times 10 \div 20 - 5 + 14 = ?$$

- a) 34
  - b) 27
  - c) 45
  - d) 9
11. If  $7\alpha 6 = 84$ ,  $8\alpha 7 = 112$  and  $8\alpha 4 = 64$  then find the value of  $6\alpha 5 = ?$   
यदि  $7\alpha 6 = 84$ ,  $8\alpha 7 = 112$  और  $8\alpha 4 = 64$  तो  $6\alpha 5 = ?$   
a) 50  
b) 30  
c) 10  
d) 60
  12. Arrange the given words in the sequence in which they occur in the dictionary.  
1. Vicinity 2. Victory 3. Vanity 4. Vapour 5. Variety  
a) 34512  
b) 12345  
c) 54231  
d) 42315
  13. Out of the following Venn Diagrams which one represents the relationship between the following: Earth, Moon, Planets ?  
A  B   
C  D   
a) B  
b) D  
c) C  
d) A
  14. In a certain code language, "TURTLE" is written as "RRNRRIA". How is "LOYALS" written in that code language?  
एक निश्चित कुट भाषा में, "TURTLE" के रूप में लिखा है "RRNRRIA" तो "LOYALS" को उस कुट भाषा में कैसे लिखा जायेगा ?  
a) ULJOPY  
b) JLUYIO  
c) YOKLJV  
d) VJLOIP
  15. Find the number of triangles ?  
त्रिभुजों की संख्या ज्ञात करे ?



- a) 7
- b) 8
- c) 6
- d) 9

16. Find the number of squares?  
वर्गों की संख्या ज्ञात करे



- a) 51
- b) 50
- c) 62
- d) 55

