



SSC SPECIAL CLASS

SSC

में हर बार पूछे जाने वाले

TOP 20 सवाल



LECTURE 07

REASONING 1:00 PM

Mahendra's

ENSURE YOUR SUCCESS WITH- VIDEO GURU



A COMPLETE VIDEO CLASS
FOR YOUR PREPARATION

Subscribe
BUTTON

BOOST YOUR PREPARATIONS WITH MAHENDRAS: STUDY MATERIAL, E-MICA, E-NEWS, BAGS & MUCH MORE. VISIT NOW: myshop.mahendras.com

CRACK

IBPS PO/CLERK PRE 2019

Start Preparing With



Buy From -


myshop.mahendras.org

Toll Free - 1800 103 5225

LIVE CLASS

IBPS PO

PRE 2019



LIBRARY VALIDITY 1 YEAR

Selling Price

~~₹4000~~

₹1999

CLASS TIMING

- 8:00 AM - Reasoning
- 9:00 AM - English
- 10:00 AM - Maths

Selling Price

~~₹3000~~

₹1499


CLASS TIMING

- 01:00 PM - English
- 02:00 PM - Maths
- 03:00 PM - Reasoning

LIVE CLASS

IBPS CLERK

PRE 2019



LIBRARY VALIDITY 1 YEAR

Batch Start Date - 15 July 2019

Live Streaming Classes

THE AMAZING

Exam Ticket

VALIDITY - 1 MONTH

₹999

Only For You

Daily Fresh Live Stream Access

Save 100%

Buy Both Above Cards

₹999/- Only.

Validity 1 Month



ENSURE YOUR SUCCESS WITH- **VIDEO GURU**



A COMPLETE VIDEO CLASS
FOR YOUR PREPARATION

Subscribe
BUTTON

BOOST YOUR PREPARATIONS WITH MAHENDRAS: STUDY MATERIAL, E-MICA, E-NEWS, BAGS & MUCH MORE. VISIT NOW: myshop.mahendras.org

Select the related word/letter/ number from the given alternatives.

दिए गये विकल्पों में से संबंधित शब्द/अक्षर/संख्या चुनिए।

SHOULD: HSUODL:: WATSON : ?

A. ZDSTNO

B. DWASDF

C. AWSTON

D. AWSTNO

 **Mahendra's**

ENSURE YOUR SUCCESS WITH- VIDEO GURU



A COMPLETE VIDEO CLASS
FOR YOUR PREPARATION

Subscribe
BUTTON 

BOOST YOUR PREPARATIONS WITH MAHENDRAS: STUDY MATERIAL, E-MICA, E-NEWS, BAGS & MUCH MORE. VISIT NOW: myshop.mahendras.c

Select the related word/letter/ number from the given alternatives.

दिए गये विकल्पों में से संबंधित शब्द/अक्षर/संख्या चुनिए।

Angola: Luanda :: Belgium : ?/ अंगोला: लुआंडा:: बेल्जियम: ?

A. Canberra/ कैनबरा

B. Thimphu/ थिंपू

C. Brussels/ब्रुसेल्स

D. Ottawa/ ओटावा

Select the related word/letter/ number from the given alternatives.

दिए गये विकल्पों में से संबंधित शब्द/अक्षर/संख्या चुनिए।

10 : 500 :: ?

A. 9 : 343

B. 5 : 75

C. 8 : 256

D. 7 : 343

 Mahendra's

ENSURE YOUR SUCCESS WITH- **VIDEO GURU**



A COMPLETE VIDEO CLASS
FOR YOUR PREPARATION

 **Subscribe**
BUTTON

BOOST YOUR PREPARATIONS WITH MAHENDRAS: **STUDY MATERIAL, E-MICA, E-NEWS, BAGS & MUCH MORE.** VISIT NOW: myshop.mahendras.c

Select the related word/letter/ number from the given alternatives.

दिए गये विकल्पों में से संबंधित शब्द/अक्षर/संख्या चुनिए।

Waitress : Restaurant :: ?/ परिवेषिका: रेस्तरा :: ?

A. Doctor : Nurse/डॉक्टर: नर्स

B. Driver : Truck/चालक: ट्रक

C. Teacher : School/अध्यापक: स्कूल

D. Actor : Role/ अभिनेता: भूमिका

A and B start together from a certain point in the opposite direction on motorcycles. The speed of A is 60 km per hour and the speed of B is 44 km per hour. What will be the distance between them after 15 minutes?

A और B मोटर-साइकिल पर एक निश्चित स्थान से विपरीत दिशा में एक साथ यात्रा शुरू करते हैं। A की गति 60 किमी. प्रति घंटा है तथा B की गति 44 किमी. प्रति घंटा है। 15 मिनट के पश्चात् दोनों के मध्य कितनी दूरी होगी?

A. 20 km/किमी.

B. 24 km/किमी.

C. 26 km/किमी.

D. 30 km/किमी.

 Mahendra's

ENSURE YOUR SUCCESS WITH- **VIDEO GURU**



A COMPLETE VIDEO CLASS
FOR YOUR PREPARATION

 Subscribe
BUTTON

BOOST YOUR PREPARATIONS WITH MAHENDRAS: STUDY MATERIAL, E-MICA, E-NEWS, BAGS & MUCH MORE. VISIT NOW: myshop.mahendras.com

From the given alternative words, select the word which cannot be formed using the letters of the given word.

निम्नलिखित विकल्पों में से वह शब्द चुनिए जो दिए गए शब्द के अक्षरों का प्रयोग करके नहीं बनाया जा सकता:

JIODIGITALLIFESTYLE

A. ODISA

B. GAIL

C. JOLLY

D. LONG

 Mahendra's

ENSURE YOUR SUCCESS WITH- **VIDEO GURU**



A COMPLETE VIDEO CLASS
FOR YOUR PREPARATION

Subscribe
BUTTON 

BOOST YOUR PREPARATIONS WITH MAHENDRAS: STUDY MATERIAL, E-MICA, E-NEWS, BAGS & MUCH MORE. VISIT NOW: myshop.mahendras.com

A group of alphabets are given with each being assigned a number. These have to be unscrambled into a meaningful word and correct order of letters may be indicated from the given responses.

कुछ अक्षरों का समूह दिया गया है जिनमें से प्रत्येक अक्षर का एक अंक निर्धारित किया गया है। इन अक्षरों को इस प्रकार व्यवस्थित करें कि उससे एक अर्थपूर्ण शब्द बन जाय और उनके अंकों के सही क्रम को दिए गए विकल्पों में से दर्शायें।

T F H R E A

5 4 3 2 1 0

A. 315402

B. 025314

C. 405321


D. 405312

 Mahendra's

ENSURE YOUR SUCCESS WITH- **VIDEO GURU**



A COMPLETE VIDEO CLASS
FOR YOUR PREPARATION

Subscribe
BUTTON 

BOOST YOUR PREPARATIONS WITH MAHENDRAS: STUDY MATERIAL, E-MICA, E-NEWS, BAGS & MUCH MORE. VISIT NOW: myshop.mahendras.c

If 1 candle in box number 1 is placed in box number 2, then box-2 has twice the number of candles that box 1 has. If 1 candle from box -2 is placed in box-1, then box -2 and box -1 have the same number of candles. How many candles were there in box-1 and box -2?

यदि बॉक्स -1 में रखी 1 मोमबत्ती बॉक्स-2 में रखी जाए, तो बॉक्स-2 में बॉक्स-1 से दुगुनी मोमबत्ती होगी। यदि बॉक्स -2 से 1 मोमबत्ती बॉक्स -1 में रखी जाए, तो बॉक्स -2 और बॉक्स -1 में बराबर-बराबर मोमबत्तियाँ होगी। बॉक्स -1 और बॉक्स-2 में कितनी मोमबत्तियाँ थीं?

A. 1, 2

B. 7, 5

C. 5, 7

D. 4, 6

Which of the following interchange of signs would make the equation correct?

कौन सी चिन्हों की अदला-बदली समीकरण को सही बनाएगी?

$$6 \times 4 + 2 = 16$$

A. + and/और \times , 2 & 4

B. + and/और \times , 2 & 6

C. + and/और \times , 3 & 4

D. + and/और \times , 4 & 6

In each of the following question a series is given, with one term missing. Choose the correct alternative from the given ones that will complete the series.

निम्नलिखित प्रत्येक प्रश्न में एक अनुक्रम दिया है, जिसमें एक पद लुप्त है। दिए गए विकल्पों में से वह सही विकल्प चुनिए जो अनुक्रम को पूरा करेगा ?

56, 28, 28, 42, 84 ?

A. 104

B. 168

C. 212

D. 210

 Mahendra's

ENSURE YOUR SUCCESS WITH- **VIDEO GURU**



A COMPLETE VIDEO CLASS
FOR YOUR PREPARATION

 **Subscribe**
BUTTON

BOOST YOUR PREPARATIONS WITH MAHENDRAS: **STUDY MATERIAL, E-MICA, E-NEWS, BAGS & MUCH MORE.** VISIT NOW: myshop.mahendras.c

In each of the following question a series is given, with one term missing. Choose the correct alternative from the given ones that will complete the series.

निम्नलिखित प्रत्येक प्रश्न में एक अनुक्रम दिया है, जिसमें एक पद लुप्त है। दिए गए विकल्पों में से वह सही विकल्प चुनिए जो अनुक्रम को पूरा करेगा ?

164, 163, 164, 156, 160, ?

A. 151

B. 133

C. 132

D. 149

 Mahendra's

ENSURE YOUR SUCCESS WITH- **VIDEO GURU**



A COMPLETE VIDEO CLASS
FOR YOUR PREPARATION

 Subscribe
BUTTON

BOOST YOUR PREPARATIONS WITH MAHENDRAS: STUDY MATERIAL, E-MICA, E-NEWS, BAGS & MUCH MORE. VISIT NOW: myshop.mahendras.c

Find the odd word/letters/number from the given alternatives.

इस प्रश्न में दिए गए विकल्पों में से विषम संख्या/ अक्षर/संख्या चुनिए ।

A. 1976

B. 1772

C. 1344

D. 1862

 **Mahendra's**

ENSURE YOUR SUCCESS WITH- **VIDEO GURU**



A COMPLETE VIDEO CLASS
FOR YOUR PREPARATION

Subscribe
BUTTON 

BOOST YOUR PREPARATIONS WITH MAHENDRAS: **STUDY MATERIAL, E-MICA, E-NEWS, BAGS & MUCH MORE.** VISIT NOW: myshop.mahendras.c

Which of the following combination is not correct?

निम्नलिखित में से कौन सा समूह सही नहीं है?

A. 23 February/फरवरी 1993 = Monday/सोमवार

B. 23 February/फरवरी 1990 = Friday/शुक्रवार

C. 23 February/फरवरी 1991 = Saturday/शनिवार

D. 23 February/फरवरी 1992 = Sunday/रविवार

 Mahendra's

ENSURE YOUR SUCCESS WITH- **VIDEO GURU**



A COMPLETE VIDEO CLASS
FOR YOUR PREPARATION

 Subscribe
BUTTON

DO NOT MISS YOUR PREPARATIONS WITH MAHENDRAS: **STUDY MATERIAL, E-MICA, E-NEWS, BAGS & MUCH MORE.** VISIT NOW: myshop.mahendras.com

Which of the following combination is not correct?

निम्नलिखित में से कौन सा समूह सही नहीं है?

A. 4hour/घंटे : 20minute/मिनट= 10°

B. 2hour/घंटे : 10minute/मिनट= 5°

C. 8hour/घंटे : 40minute/मिनट= 20°

D. 6hour/घंटे : 30minute/मिनट= 30°

 Mahendra's

ENSURE YOUR SUCCESS WITH- **VIDEO GURU**



A COMPLETE VIDEO CLASS
FOR YOUR PREPARATION

Subscribe
BUTTON 

BOOST YOUR PREPARATIONS WITH MAHENDRAS: STUDY MATERIAL, E-MICA, E-NEWS, BAGS & MUCH MORE. VISIT NOW: myshop.mahendras.c

If '@' means subtraction; '-' means division, '\$' means addition and '%' means multiplication, then find the value of:

यदि '@' का मतलब घटाना हो, '-' का मतलब विभक्त करने से हो, '\$' का मतलब जोड़ने से हो और '%' का मतलब गुणा से हो तो

$$36 \$ 13 @ 7 \% 8 - 2 \$ 14 = ?$$

A. 36

B. 46

C. 35

D. 37

In a row position of Q is 17th from left corner and position of J is 22 from right corner after sometime when they interchange their position then position of Q became 28 from left corner then find out what is position of J from right corner after interchanging?

एक पंक्ति में Q का स्थान बाएं छोर से 17 है और J का स्थान दायें छोर से 22 है कुछ समय बाद ये आपस में अपना स्थान बदल लेते हैं तो Q का स्थान बाएं छोर से 28 हो जाता है तो बताइए कि इस पंक्ति में स्थान परिवर्तन के बाद J का स्थान दायें छोर से कितना होगा ?

A. 49

B. 33

C. 32

D. 34

Find the missing numbers from the given alternatives?

दिए गए विकल्पों में से लुप्त संख्या चुनिए?

8 5 14

12 6 18

10 7 ?

A. 16

B. 19

C. 21

D. 18

Find the missing numbers from the given alternatives?

दिए गए विकल्पों में से लुप्त संख्या चुनिए?



A. 552

B. 542

C. 529

D. 523

 Mahendra's

ENSURE YOUR SUCCESS WITH- **VIDEO GURU**




A COMPLETE VIDEO CLASS
FOR YOUR PREPARATION

Subscribe
BUTTON 

BOOST YOUR PREPARATIONS WITH MAHENDRAS: STUDY MATERIAL, E-MICA, E-NEWS, BAGS & MUCH MORE. VISIT NOW: myshop.mahendras.com

What is the number of straight lines in the following figure.

निम्न आकृति में सीधी रेखाओं की संख्या कितनी है?



A. 11

B. 14

C. 16

D. 17



TARGET

SBI CLERK MAINS EXAM !!

Start Preparing With  *Mahendra's*

CLASS TIMING

10:30 AM TO 12:30 PM

Batch Start Date - 10 July 2019

₹999/-

LIVE CLASS

SBI

SBI CLERK MAINS 2019

CRASH COURSE



Buy From - myshop.mahendras.org

Toll Free - 1800 103 5225

Mahendra's

ENSURE YOUR SUCCESS WITH- VIDEO GURU



**A COMPLETE VIDEO CLASS
FOR YOUR PREPARATION**

**Subscribe
BUTTON**



BOOST YOUR PREPARATIONS WITH MAHENDRAS: STUDY MATERIAL, E-MICA, E-NEWS, BAGS & MUCH MORE. VISIT NOW: myshop.mahendras.org



A MILESTONE
in Making Your
Preparation
STRONGER

Buy From -
myshop.mahendras.org
Toll Free - 1800 103 5225

Bank, SSC & Railway
All Live Classes

In Just

One Ticket



Get Ticket To Your Success

₹999/- Only.

 Mahendra's

ENSURE YOUR SUCCESS WITH- **VIDEO GURU**



A COMPLETE VIDEO CLASS
FOR YOUR PREPARATION

Subscribe
BUTTON



BOOST YOUR PREPARATIONS WITH MAHENDRAS: STUDY MATERIAL, E-MICA, E-NEWS, BAGS & MUCH MORE. VISIT NOW: myshop.mahendras.org



Once Again



Highest Selection

In

SBI PO PRE 2019 Exam

JOIN  *Mahendra's*
To Crack SBI PO Mains !!

For Online Live Class

Visit - myshop.mahendras.org

For Admission In Branch

Visit Mahendras Nearest Branch

Call Us : 1800-103-5225 (9:00 AM To 6:00 PM)

 *Mahendra's*

ENSURE YOUR SUCCESS WITH- **VIDEO GURU**



A COMPLETE VIDEO CLASS
FOR YOUR PREPARATION

Subscribe
BUTTON



BOOST YOUR PREPARATIONS WITH MAHENDRAS: STUDY MATERIAL, E-MICA, E-NEWS, BAGS & MUCH MORE. VISIT NOW: myshop.mahendras.org