



SSC CPO / GD



अब वदी हमारी है

WATER & MIRROR IMAGE

प्रतिबिम्ब कैसा भी हो ANSWERS तुरंत आयेगे

REASONING 11:00 AM

LECTURE 13

 Mahendra's

LIKE US ON FACEBOOK



/Emahendras

JOIN MAHENDRAS !!! BEST CHOICE TO OPT FOR THE PREPARATION OF BANK, S

IMAGES

```
graph TD; IMAGES --> MIRROR; IMAGES --> WATER; MIRROR --> LEFT_RIGHT[LEFT to RIGHT]; WATER --> TOP_BOTTOM[TOP to BOTTOM];
```

MIRROR

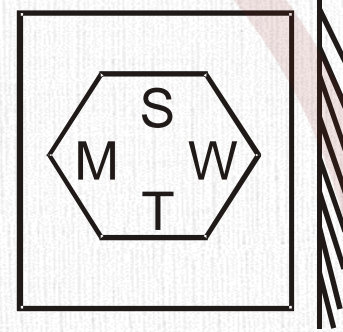
LEFT to RIGHT

WATER

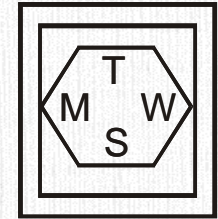
TOP to BOTTOM

Which of the following figure is the correct mirror image of the given figure?

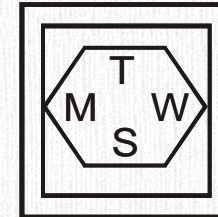
निम्न में से कौन सी प्रश्न आकृति की शीशे में आकृति होगी?



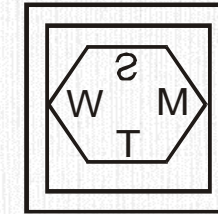
A.



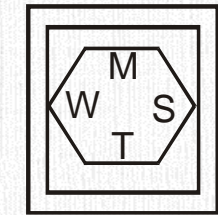
B.



C.




D.

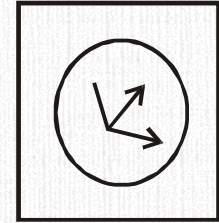


Which of the following figure is the correct Water image of the given figure?

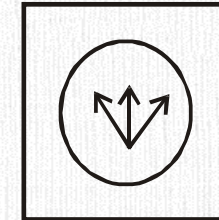
निम्न में से कौन सी प्रश्न आकृति की जल आकृति होगी?



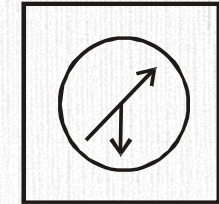
A.




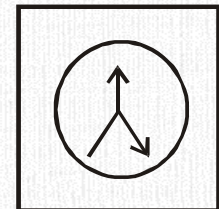
B.



C.



D.



Choose the alternative which is closely resembles the mirror image of the given combination.

FIXING

(1) GNIXIF

(2) FIXING

(3) GNIXIF

(4) GNIXIF



Choose the alternative which is closely resembles the mirror image of the given combination.


WHITE

(1) ELIHW WHITE

(2) ETIHW


(3) ETIHW

(4) ETIHW



Choose the alternative which is closely resembles the mirror image of the given combination.

EFFECTIVE



(1) EVITCEFFE

(3) EVITCEFFE

(2) EVITCEFFE

(4) EVITCEFFE

Choose the alternative which is closely resembles the mirror image of the given combination.


1965 INDOPAK

(1) KAPODI 1965

(2) 558 10DN IKAP

(3) KAPODI 1965

(4) KAPODI 558



Choose the alternative which is closely resembles the mirror image of the given combination.

ANS43Q12

(1) AN24EQ1

(3) 2NAEQ1

(2) 21QEQNA

(4) 1EQ4AN2



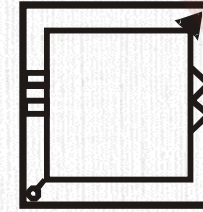
Choose the alternative which is closely resembles the water-image of the given combination.

bridge

- (1) pɿ!qðe → (2) pɿ!qðe
(3) pɿ!qðe (4) pɿ!pðe

Which of the following figure is the correct mirror image of the given figure?

निम्न में से कौन सी प्रश्न आकृति की दर्पण आकृति होगी?



A.


B.

C.

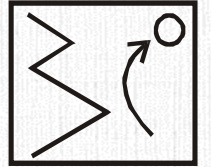
D.

Which of the following figure is the correct mirror image of the given figure?


निम्न में से कौन सी प्रश्न आकृति की दर्पण आकृति होगी?



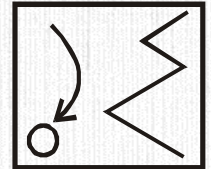
A.



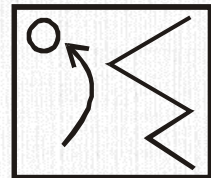
B.



C.

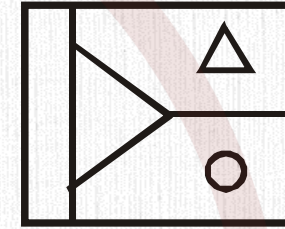


D.

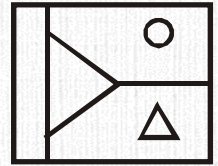


Which of the following is the correct water image of the given figure.

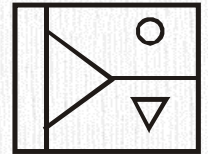
विकल्पों में दी गई कौन सी आकृति दी गई प्रश्न आकृति का सही जल प्रतिबिम्ब है?



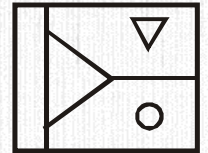
A.



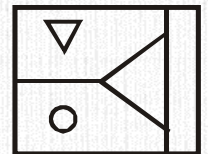
B.



C.



D.



Which of the following figure is the correct mirror image of the given word?

विकल्पों में दी गई कौन सी आकृति दी गई प्रश्न शब्द का सही दर्पण प्रतिबिम्ब है?

TERMINATE

A. **TERMINATE**

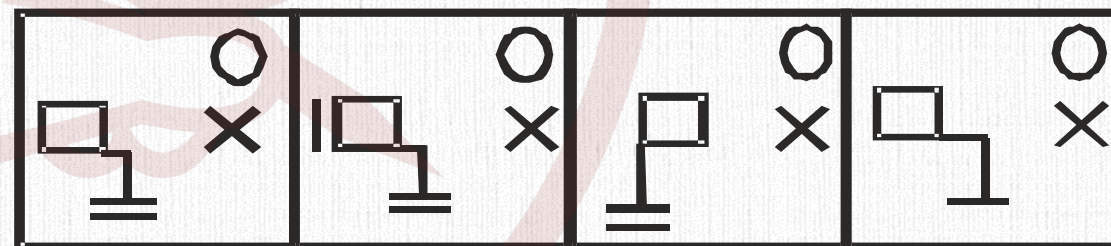
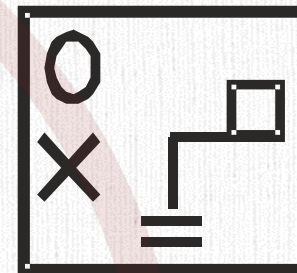
B. **TERMINATE**

 C. **TERMINATE**

D. **TERMINATE**

What will be the mirror image of the question figure.

प्रश्न आकृति की दर्पण सादृश्यता क्या होगी?



A.


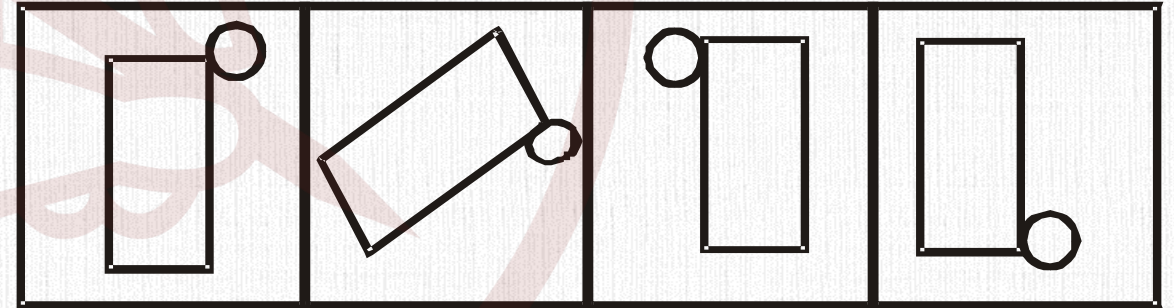
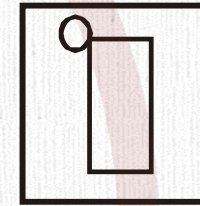
B.

C.

D.

What will be the mirror image of the question figure?

प्रश्न आकृति की दर्पण सादृश्यता क्या होगी?



A.

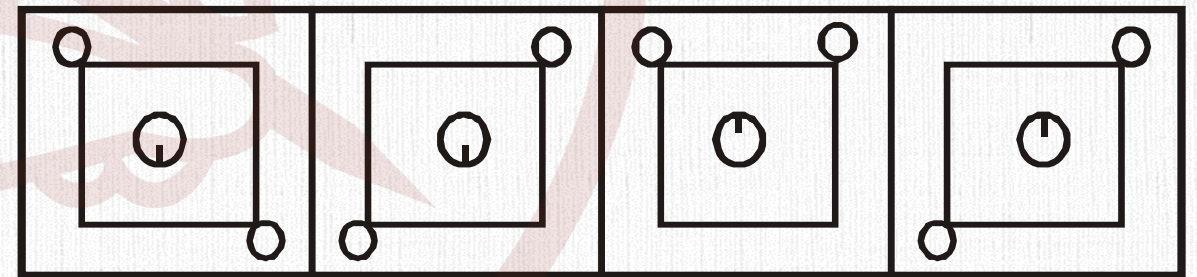
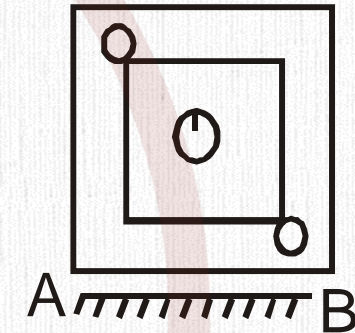
B.

C.

D.

What will be the water image of the question ?

निम्न में से कौन सी प्रश्न आकृति की जल में आकृति होगी?



A.

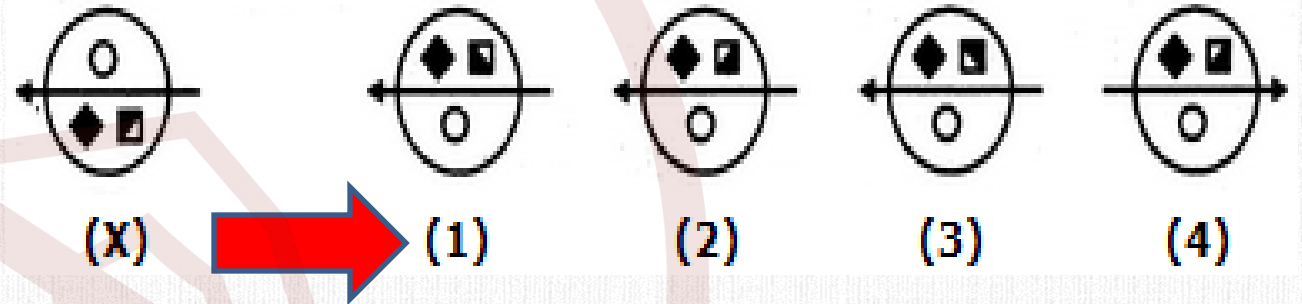


B.

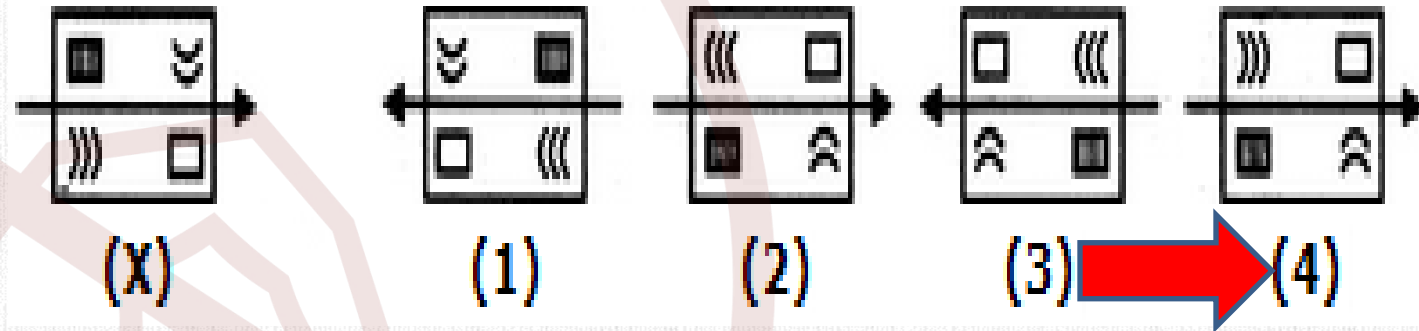
C.

D.

Choose the correct water image of the given figure (X) from amongst the four alternatives.



Choose the correct water image of the given figure (X) from amongst the four alternatives.




Comment


Share


Like

Subscribe
