



SSC SPECIAL CLASS

DICE / पाखा



सम्पूर्ण ज्ञान

PART-2

LECTURE 11

REASONING 3:00 PM



Mahendra's

ENSURE YOUR SUCCESS WITH- **VIDEO GURU**



A COMPLETE VIDEO CLASS
FOR YOUR PREPARATION

Subscribe
BUTTON

BOOST YOUR PREPARATIONS WITH MAHENDRAS: STUDY MATERIAL, E-MICA, E-NEWS, BAGS & MUCH MORE. VISIT NOW: myshop.mahendras.com

LIVE CLASS



CRACK HSSC EXAM

WITH  *Mahendra's* **LIVE BATCHES**

BATCH STARTS FROM - 1 AUG 2019

HSSC

COMPLETE COURSE



MATHS

COMPLETE COURSE

HINDI

COMPLETE COURSE



GK & GS

COMPLETE COURSE

REASONING

COMPLETE COURSE

BUY FROM

myshop.mahendras.org

BATCH STARTS FROM - 9 SEP 2019

ENGLISH

COMPLETE COURSE

 *Mahendra's*

ENSURE YOUR SUCCESS WITH- VIDEO GURU



A COMPLETE VIDEO CLASS
FOR YOUR PREPARATION

Subscribe
BUTTON

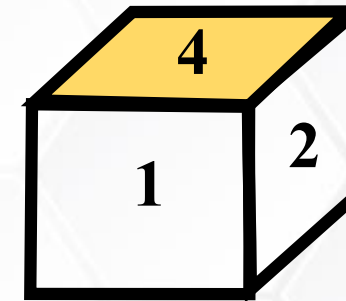
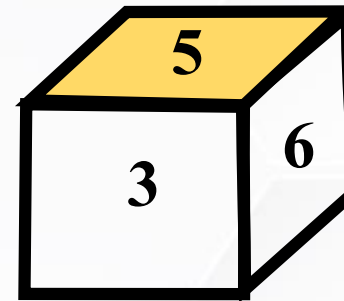
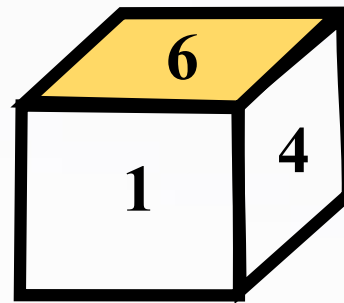


BOOST YOUR PREPARATIONS WITH MAHENDRAS: STUDY MATERIAL, E-MICA, E-NEWS, BAGS & MUCH MORE. VISIT NOW: myshop.mahendras.org



Three positions of a dice are given, find out which digit would be in front of 1 on that basis ?

एक पांसे की तीन स्थितियां दी गयी है उसके आधार पर यह पता कीजिए की अंक 1 के सामने कौन सा अंक आएगा ?



(A) 3

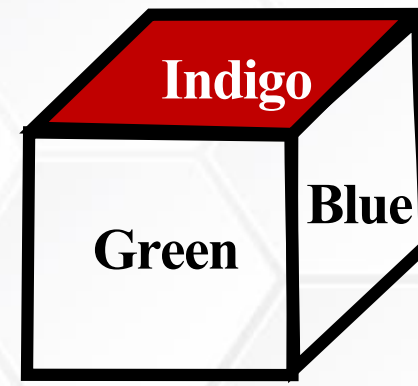
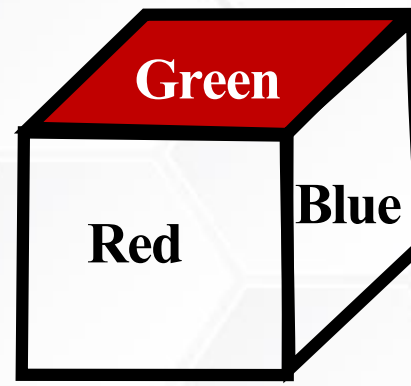
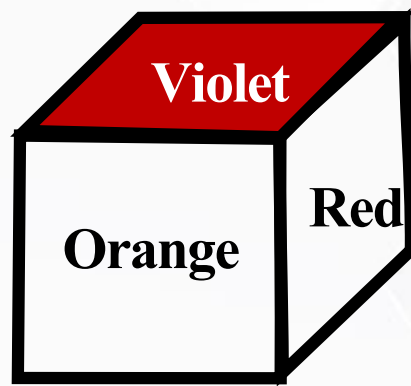
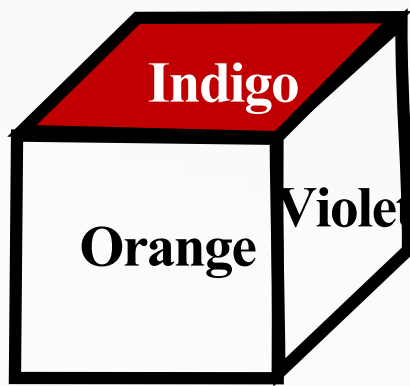
(B) 5

(C) 2

(D) 6



Which colour would be opposite to Green?

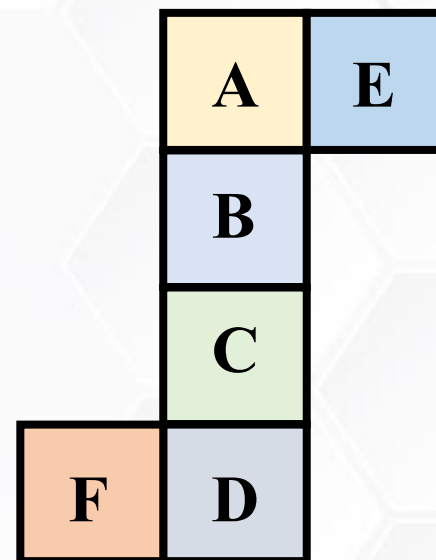


- (A) Indigo
- (B) Blue
- (C) Violet
- (D) Orange





Which face is opposite to B?



(A) C

(B) D

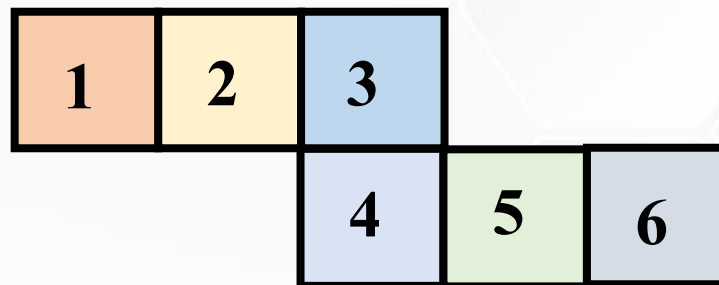
(C) E

(D) F





Which face is opposite to 2?



(A) 3

(B) 4


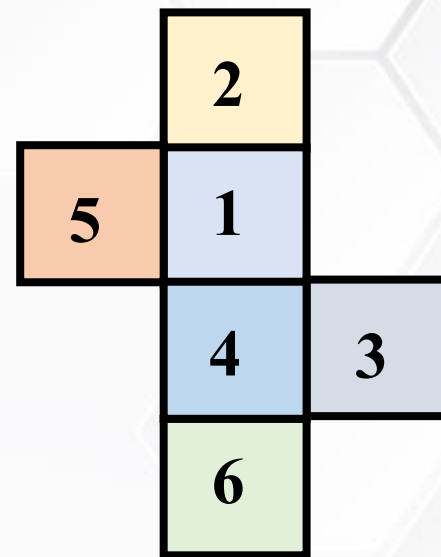
(C) 5

(D) 6

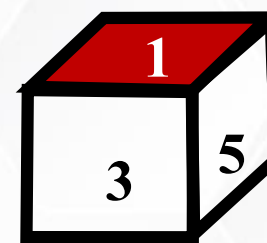




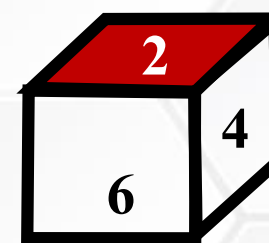
Select from the alternative, the box the can be formed by folding the sheet shown in figure (X).



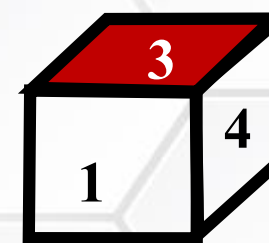
(A)



(B)



(C)

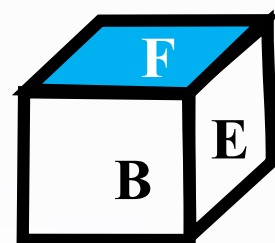
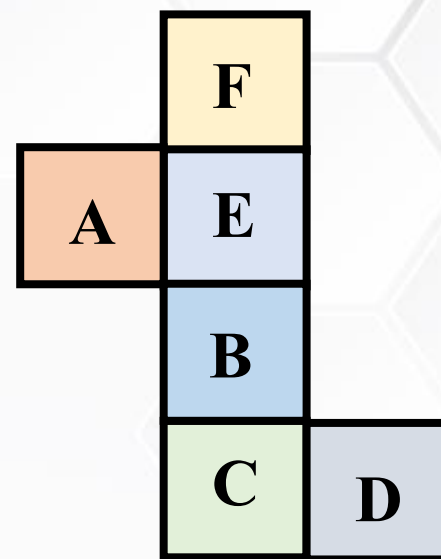


(D)

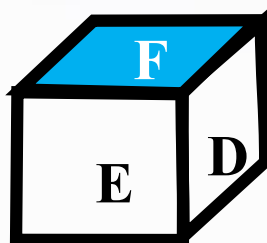




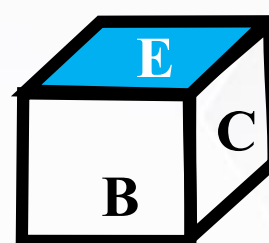
Choose the box that is similar to the box formed from the given sheet of paper (X).



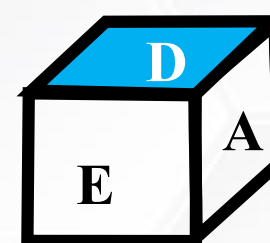
(A)



(B)



(C)



(D)

A. 1 only

B. 2 only


C. 1 and 3 only

D. 1, 2, 3 and 4 only





How many dots lie opposite to the face having three dots, when the given figure is folded to form a cube?



A. 2

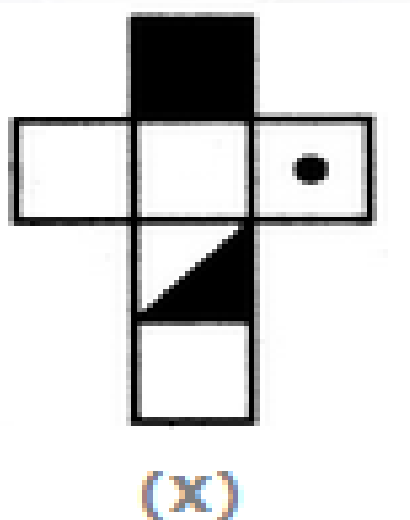
B. 4

C. 5

D. 6



Choose the box that is similar to the box formed from the given sheet of paper (X).



(1)



(2)



(3)



(4)

A. 1 and 3 only

B. 2, 3 and 4 only


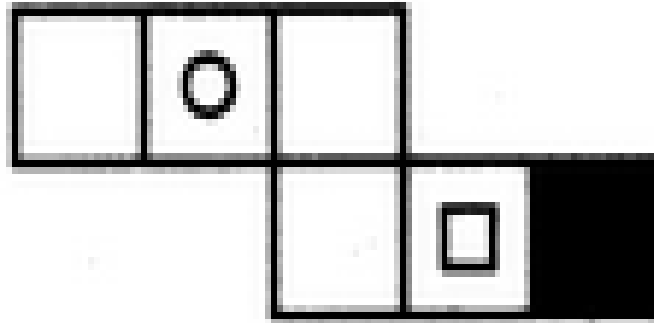
C. 2 only

D. 3 and 4 only

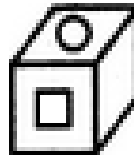





Choose the box that is similar to the box formed from the given sheet of paper (X).



(1)



(2)



(3)



(4)

A. 1 and 3 only


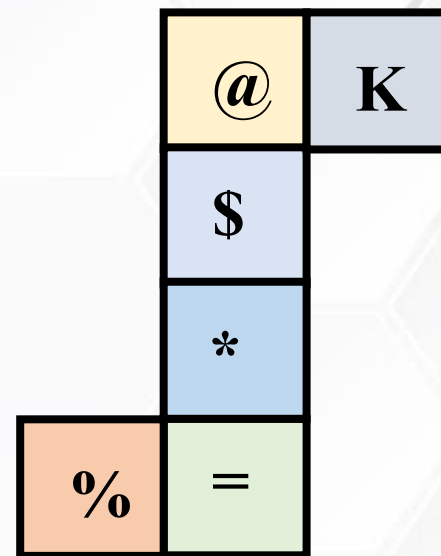
B. 2, 3 and 4 only

C. 2 only


D. 3 and 4 only



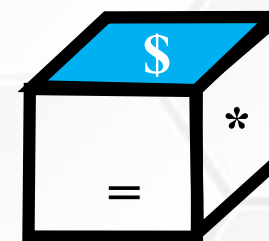
Select from the alternative dice that can be formed by folding the open dice show in figure?




(A)



(B)



(C)



(D)





A MILESTONE
in Making Your
Preparation
STRONGER

Buy From -
myshop.mahendras.org
Toll Free - 1800 103 5225

Bank, SSC & Railway
All Live Classes

In Just

One Ticket



Get Ticket To Your Success

₹999/- Only.

 **Mahendra's**

ENSURE YOUR SUCCESS WITH- **VIDEO GURU**



A COMPLETE VIDEO CLASS
FOR YOUR PREPARATION

Subscribe
BUTTON



BOOST YOUR PREPARATIONS WITH MAHENDRAS: STUDY MATERIAL, E-MICA, E-NEWS, BAGS & MUCH MORE. VISIT NOW: myshop.mahendras.org