



RAILWAY NTPC

REASONING

6:00 PM

T-20⁺

QUESTION SERIES

इन सवालो में मत उलझना वर्ना फेल हो जाओगे

DAY- 50

Mahendra's

ENSURE YOUR SUCCESS WITH- **VIDEO GURU**



A COMPLETE VIDEO CLASS
FOR YOUR PREPARATION

Subscribe
BUTTON



BOOST YOUR PREPARATIONS WITH MAHENDRAS: STUDY MATERIAL, E-MICA, E-NEWS, BAGS & MUCH MORE. VISIT NOW: myshop.mahendras.com

Mahendra's
Biggest
SALE

08
August 2019

10:00 AM to 10:00 PM

BUY FROM

myshop.mahendras.org

SSC CGL TIER 2

COMPLETE VIDEO COURSE

QUANT

MRP:-
~~₹ 3000~~ **₹ 777/-**

ENGLISH

MRP:-
~~₹ 3000~~ **₹ 777/-**

CRASH COURSE

MRP:-
~~₹ 5000~~ **₹ 1099/-**

Mahendra's

ENSURE YOUR SUCCESS WITH- VIDEO GURU










A COMPLETE VIDEO CLASS
FOR YOUR PREPARATION

Subscribe
BUTTON



BOOST YOUR PREPARATIONS WITH MAHENDRAS: STUDY MATERIAL, E-MICA, E-NEWS, BAGS & MUCH MORE. VISIT NOW: myshop.mahendras.org

How Was Your Attempts

Subject / Topic	Q.No.	Time Taken	Correct	Your Attempt	Percentage	Concepts & Solution
	1	0:21 min	✘	☹ Bogus	 76% Answered Correctly	View
	2	0:3 min	✘	☹ Bogus	 40% Answered Correctly	View
	3	0:3 min	✘	☹ Bogus	 38% Answered Correctly	View
	4	0:4 min	✘	☹ Bogus	 57% Answered Correctly	View
	5	0:3 min	✘	☹ Bogus	 49% Answered Correctly	View
	6	0:3 min	✘	☹ Bogus	 27% Answered Correctly	View
	7	0:0 min	⊘	⊘ (not visited)	 54% Answered Correctly	View

 Mahendra's

ENSURE YOUR SUCCESS WITH- **VIDEO GURU**



A COMPLETE VIDEO CLASS
FOR YOUR PREPARATION

 **Subscribe**
BUTTON

BOOST YOUR PREPARATIONS WITH MAHENDRAS: **STUDY MATERIAL, E-MICA, E-NEWS, BAGS & MUCH MORE.** VISIT NOW: myshop.mahendras.com

READY

दूसरों की आलोचना करना
और उनकी भावना को ठेस पहुँचाना
आसान है
लेकिन खुद को जानने में
पूरी ज़िन्दगी गुज़र जाती है

 Mahendra's

ENSURE YOUR SUCCESS WITH- **VIDEO GURU**



A COMPLETE VIDEO CLASS
FOR YOUR PREPARATION

Subscribe
BUTTON 

BOOST YOUR PREPARATIONS WITH MAHENDRAS: STUDY MATERIAL, E-MICA, E-NEWS, BAGS & MUCH MORE. VISIT NOW: myshop.mahendras.c

1

A series is given with one term missing. Select the correct alternative from the given ones that will complete the series. एक श्रृंखला दी गई है, जिसमें से एक पद लुप्त है। दिए गए विकल्पों में से वह सही विकल्प चुनिए, जो इस श्रृंखला को पूरा करेगा।

101, 170, 257, ?

(a) 399

(b) 400

(c) 362

(d) 402

 Mahendra's

ENSURE YOUR SUCCESS WITH- **VIDEO GURU**



A COMPLETE VIDEO CLASS
FOR YOUR PREPARATION

Subscribe
BUTTON 

BOOST YOUR PREPARATIONS WITH MAHENDRAS: **STUDY MATERIAL, E-MICA, E-NEWS, BAGS & MUCH MORE.** VISIT NOW: myshop.mahendras.c

2

Select the odd number from the given alternatives.

दिए गए विकल्पों में से विषम संख्या को चुनिये।



(a) 2147

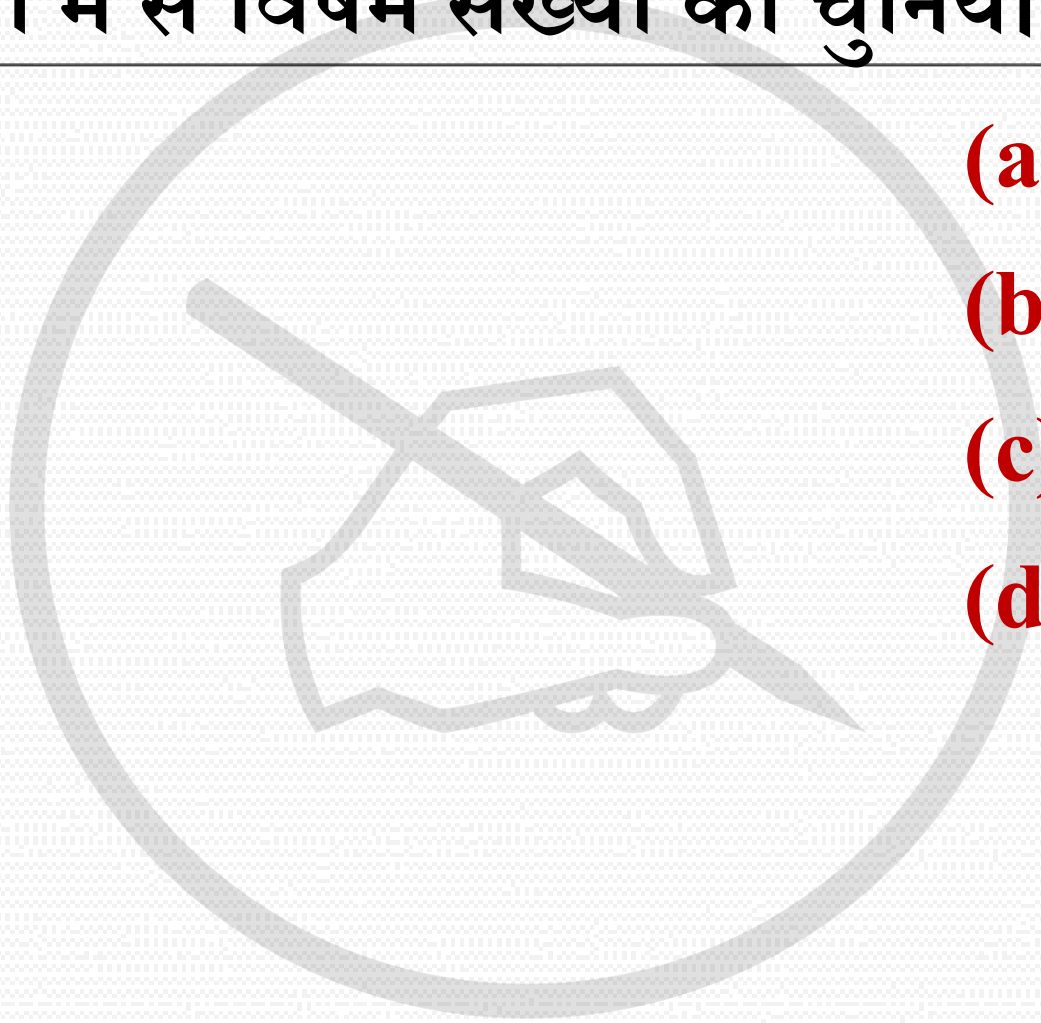
(b) 3155

(c) 4639

(d) 2084

2

Select the odd number from the given alternatives.
दिए गए विकल्पों में से विषम संख्या को चुनिये।



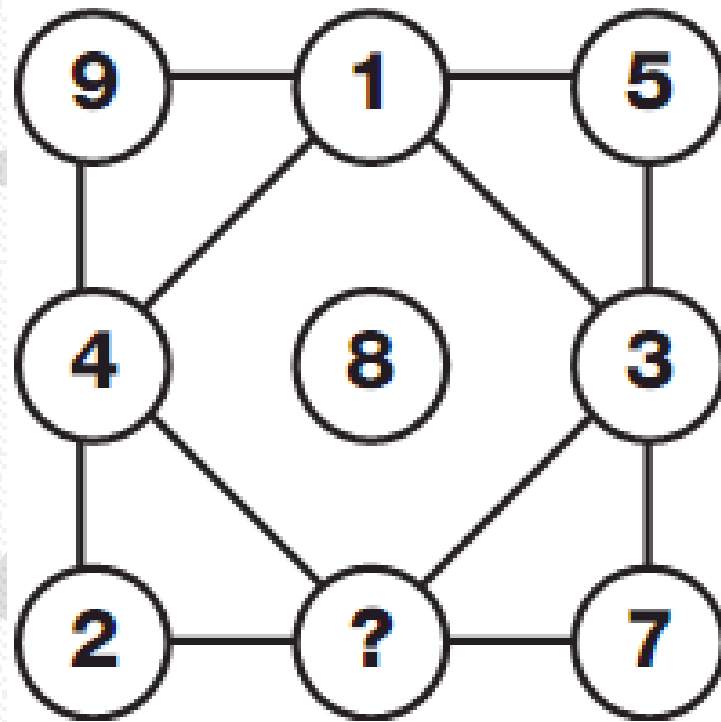
(a) (143, 64)

(b) (232, 49)

(c) (719, 289)

(d) (462, 169)

3



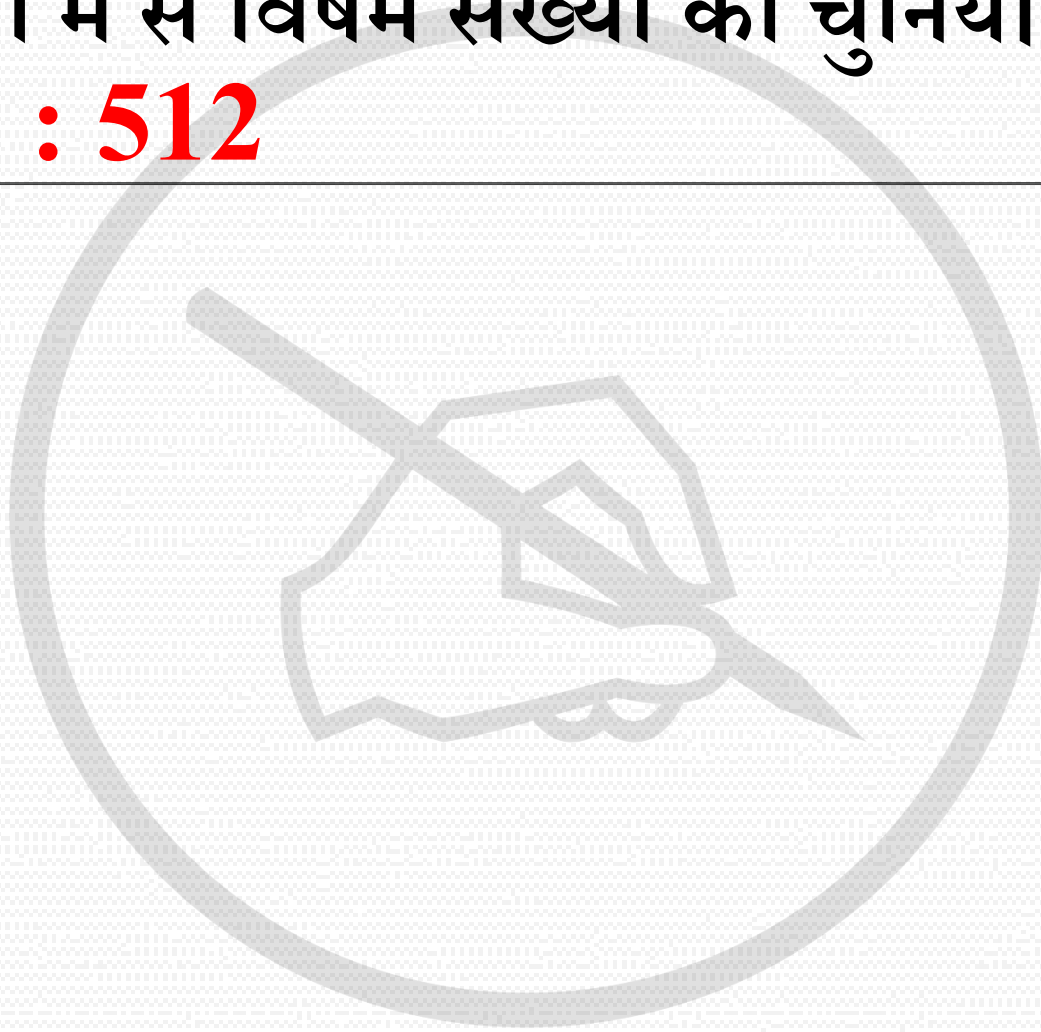
- (a) 7
- (b) 5
- (c) 6
- (d) 4

4

Select the odd number from the given alternatives.

दिए गए विकल्पों में से विषम संख्या को चुनिये।

64 : 64 :: ? : 512



(a) 256

(b) 144

(c) 64

(d) 81

5


Showing a man on the stage, Rita said, " He is the brother of the daughter of the wife of my husband. **How is the man on stage related to Rita?**

मंच पर एक व्यक्ति को दिखाते हुए, रीता ने कहा, "वह मेरे पति की पत्नी की बेटी का भाई है। **मंच पर मौजूद व्यक्ति रीता से कैसे संबंधित है?"**

- (a) SON /बेटा
- (b) HUSBAND /पति
- (c) COUSIN /कजिन
- (d) NEPHEW/ भांजा/ भतीजा

6

a b _ c a b b _ a b b _ a b _ c



- (a) aabc**
- (b) aaab**
- (c) accb**
- (d) bccb**

7

The best evidence of India's glorious past is the growing popularity of Ayurvedic medicines in the West. भारत के गौरवशाली अतीत का सबसे अच्छा प्रमाण पश्चिम में आयुर्वेदिक दवाओं की बढ़ती लोकप्रियता है।

Conclusions:

I Ayurvedic medicines are not popular in India.

आयुर्वेदिक दवाएं भारत में लोकप्रिय नहीं हैं।

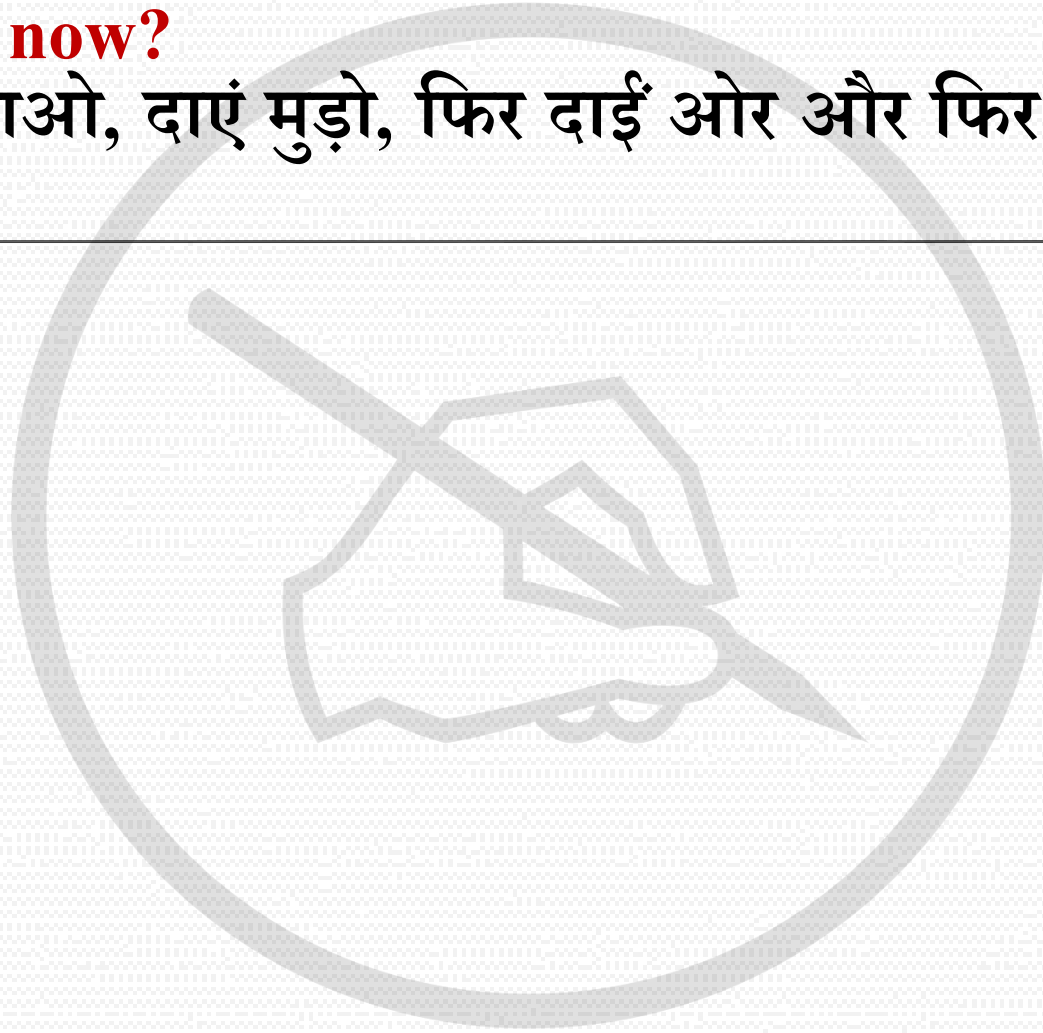
II Allopathic medicines are more popular in India.

एलोपैथिक दवाएं भारत में अधिक लोकप्रिय हैं।

8

You go North, turn right, then right again and then go to the left in **which direction are you now?**

तुम उत्तर की ओर जाओ, दाएं मुड़ो, फिर दाईं ओर और फिर बाईं ओर जाओ, अब तुम किस दिशा में हो?



(a) North

(b) South

(c) East

(d) West

 Mahendra's

ENSURE YOUR SUCCESS WITH- **VIDEO GURU**



A COMPLETE VIDEO CLASS
FOR YOUR PREPARATION

Subscribe
BUTTON 

BOOST YOUR PREPARATIONS WITH MAHENDRAS: **STUDY MATERIAL, E-MICA, E-NEWS, BAGS & MUCH MORE.** VISIT NOW: myshop.mahendras.c

9


If 12 (20) 16 and 21 (35) 28, then what is value of **A in 48 (80) A**?
यदि 12 (20) 16 और 21 (35) 28, तो **48 (80) A में A** का मान ज्ञात करें.

(a) 50

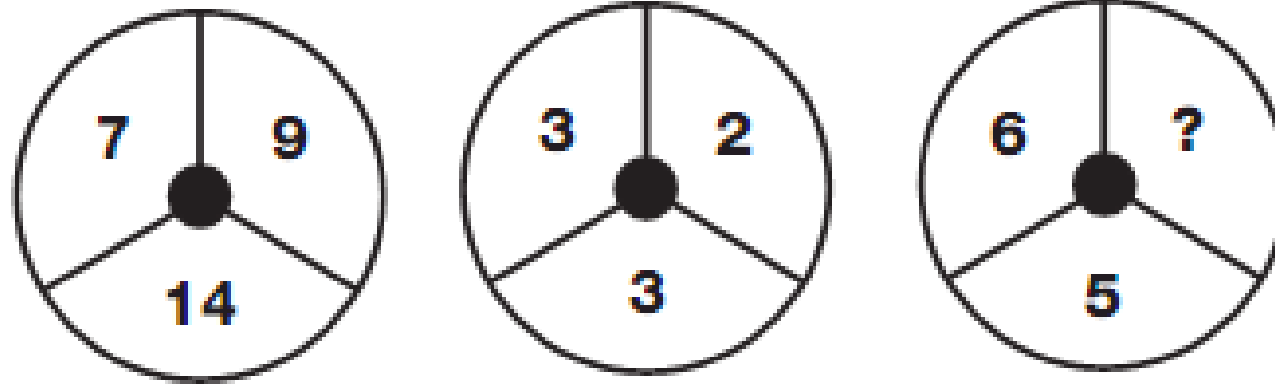
(b) 56

(c) 64

(d) 72



10



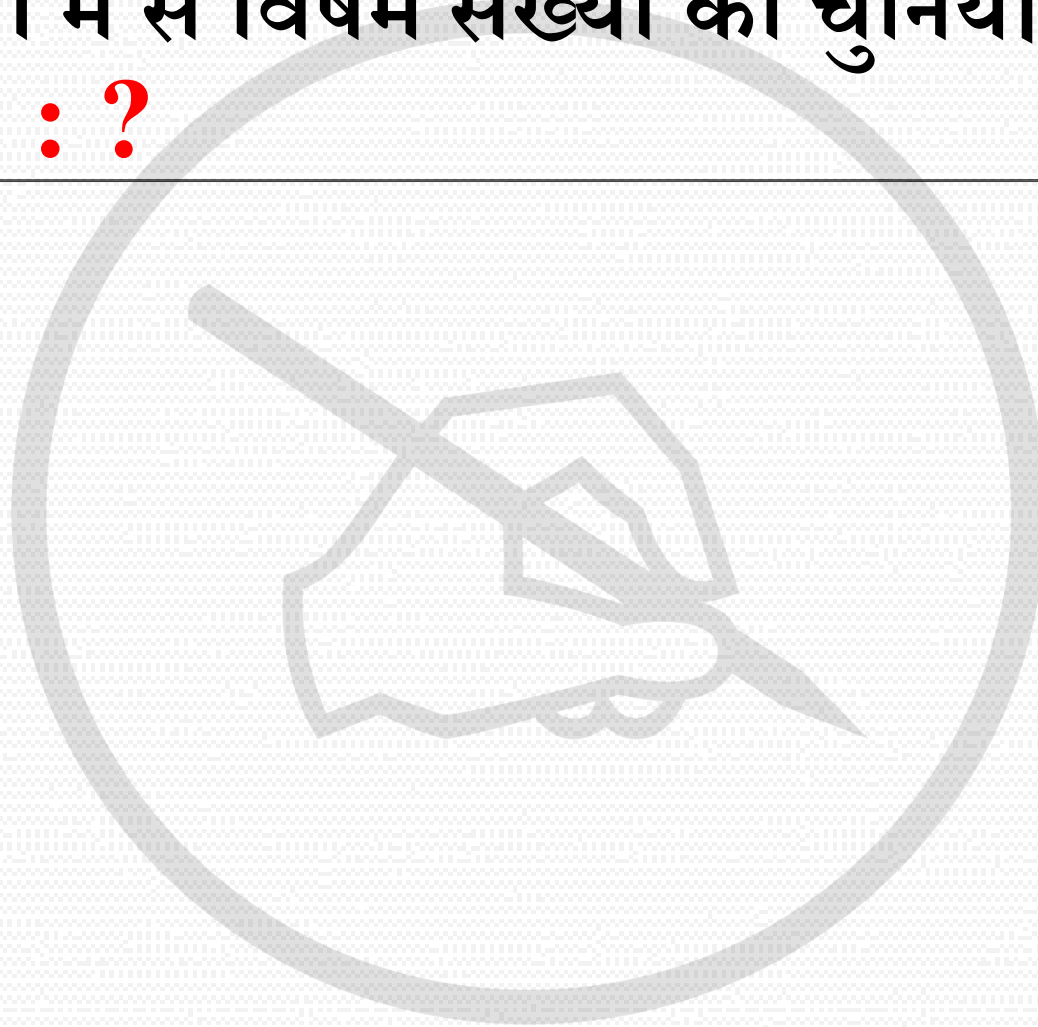
- (a) 1
- (b) 8
- (c) 9
- (d) 5

11

Select the odd number from the given alternatives.

दिए गए विकल्पों में से विषम संख्या को चुनिये।

6 : 223 :: 5 : ?



(a) 100

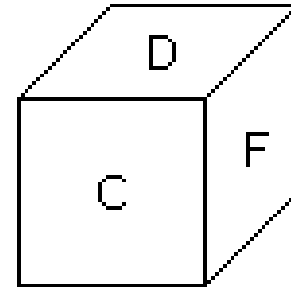
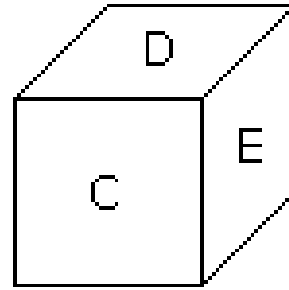
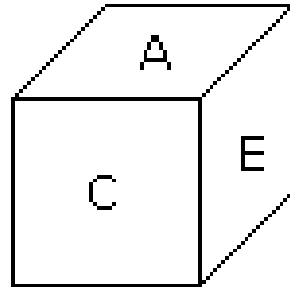
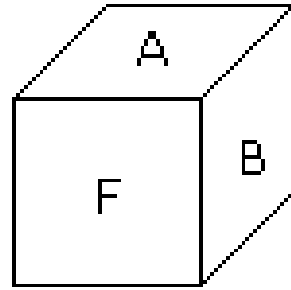
(b) 152

(c) 125

(d) 131

12

opposite to face with 'A'
A के विपरीत क्या आएगा ?



A. D


B. B

C. C

D. F

13

a b c _ b c _ a b c c _ a _ c c c c



- (a) accb**
- (b) abbc**
- (c) bcca**
- (d) acce**

(a)



(c)



(b)



(d)



15

At what time in minutes, between 2 o'clock and 3 o'clock, both the needles will **opposite to each other**? किस समय मिनटों में, 2 बजे से 3 बजे के बीच, दोनों सुइयाँ एक दूसरे के विपरीत होंगी?



A. 43 7/11min. past 2

B. 33 7/11min. past 2

C. 35 5/11min. past 2

D. 47 3/11min. past 2

 Mahendra's

ENSURE YOUR SUCCESS WITH- **VIDEO GURU**

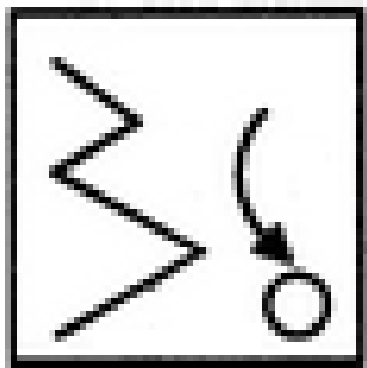


A COMPLETE VIDEO CLASS
FOR YOUR PREPARATION

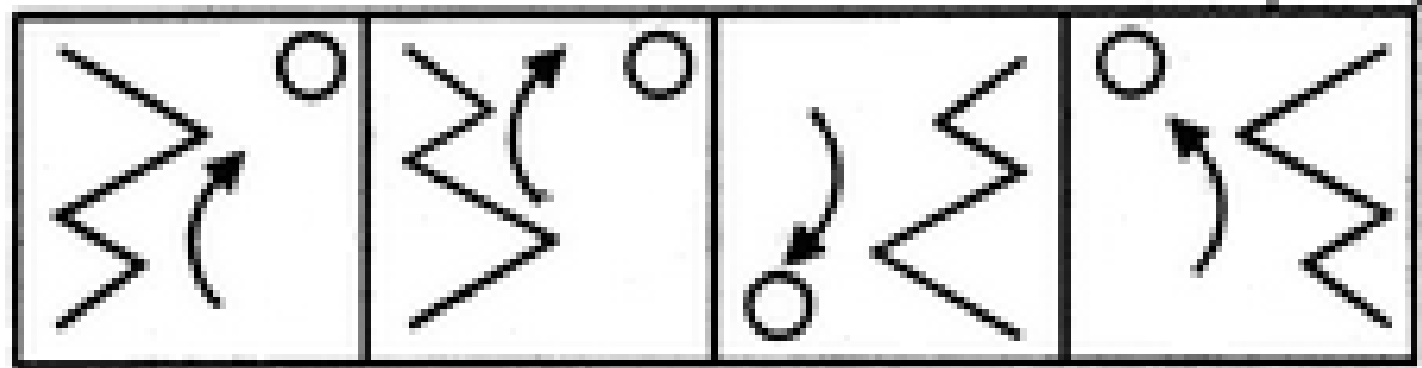
Subscribe
BUTTON 

BOOST YOUR PREPARATIONS WITH MAHENDRAS: **STUDY MATERIAL, E-MICA, E-NEWS, BAGS & MUCH MORE.** VISIT NOW: myshop.mahendras.c

16



MIRROR IMAGE

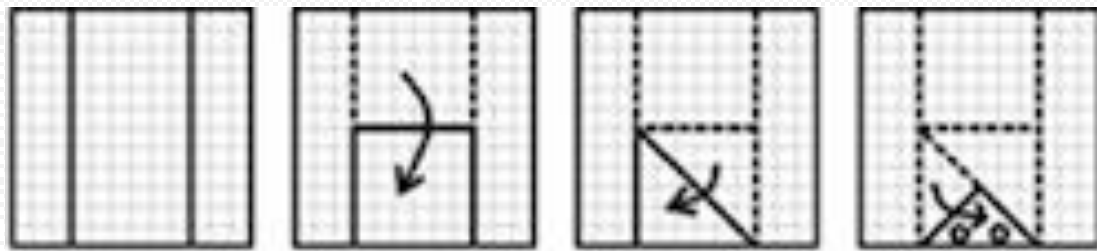


A


B

C


D




(a)




(b)



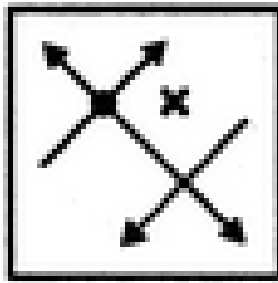
(c)




(d)



18



MIRROR IMAGE

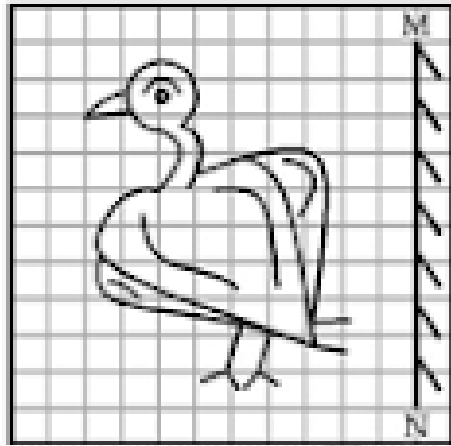


A


B

C


D




(a)




(b)




(c)



(d)





- (a)
- (b)
- (c)
- (d)