



# RAILWAY NTPC

## REASONING

# T-20<sup>+</sup> QUESTION SERIES

## सवालों की ऐसी ट्रिक्स जो NTPC पार लगाएंगी

### DAY-39

 **Mahendra's**

ENSURE YOUR SUCCESS WITH- **VIDEO GURU**



A COMPLETE VIDEO CLASS  
FOR YOUR PREPARATION

Subscribe  
BUTTON



BOOST YOUR PREPARATIONS WITH MAHENDRAS: STUDY MATERIAL, E-MICA, E-NEWS, BAGS & MUCH MORE. VISIT NOW: [myshop.mahendras.com](http://myshop.mahendras.com)



# CRACK


IBPS PO/CLERK PRE 2019

Start Preparing With  
 **Mahendra's**

Buy From -  
[myshop.mahendras.org](http://myshop.mahendras.org)  
Toll Free - 1800 103 5225

**LIVE CLASS**

**IBPS PO**  
**PRE 2019**



**LIBRARY VALIDITY 1 YEAR**

Selling Price  
~~₹4000~~

**₹1999**

**CLASS TIMING**

8:00 AM - Reasoning  
9:00 AM - English  
10:00 AM - Maths

Selling Price  
~~₹3000~~


**₹1499**

**CLASS TIMING**

01:00 PM - English  
02:00 PM - Maths  
03:00 PM - Reasoning

**LIVE CLASS**

**IBPS CLERK**  
**PRE 2019**



**LIBRARY VALIDITY 1 YEAR**

**Batch Start Date - 15 July 2019**

**Mahendra's**  
ALL EXAM  
IN ONE TICKET

THE AMAZING  
**Exam Ticket**  
VALIDITY - 1 MONTH

Daily Fresh Live Stream Access

**₹999**  
Only For You

Buy Both Above Cards

**₹999/-** Only.

**Validity 1 Month**

  
**Subscribe**  
BUTTON

**ENSURE YOUR SUCCESS WITH- VIDEO GURU**



A COMPLETE VIDEO CLASS  
FOR YOUR PREPARATION

BOOST YOUR PREPARATIONS WITH MAHENDRAS: STUDY MATERIAL, E-MICA, E-NEWS, BAGS & MUCH MORE. VISIT NOW: [myshop.mahendras.org](http://myshop.mahendras.org)





**A MILESTONE**  
in Making Your  
Preparation  
**STRONGER**

Buy From -  
[myshop.mahendras.org](http://myshop.mahendras.org)  
Toll Free - 1800 103 5225

Bank, SSC & Railway  
**All Live Classes**

In Just

**One Ticket**



Get Ticket To Your Success

**₹999/-** Only.

 **Mahendra's**

ENSURE YOUR SUCCESS WITH- **VIDEO GURU**



A COMPLETE VIDEO CLASS  
FOR YOUR PREPARATION

Subscribe  
BUTTON



BOOST YOUR PREPARATIONS WITH MAHENDRAS: STUDY MATERIAL, E-MICA, E-NEWS, BAGS & MUCH MORE. VISIT NOW: [myshop.mahendras.org](http://myshop.mahendras.org)



 Mahendra's

  
**Deal** OF  
**THE MONTH**

**20 JULY 2019**

**01:00 PM To 5:00 PM**

**Subject Wise**

**VIDEO GURU**

**MRP: - ₹ ~~2500~~**

**@499/-**  **Only**

**BUY FROM**

**myshop.mahendras.org**

 Mahendra's

**ENSURE YOUR SUCCESS WITH- VIDEO GURU**



A COMPLETE VIDEO CLASS  
FOR YOUR PREPARATION

**Subscribe**  
BUTTON



BOOST YOUR PREPARATIONS WITH MAHENDRAS: **STUDY MATERIAL, E-MICA, E-NEWS, BAGS & MUCH MORE.** VISIT NOW: [myshop.mahendras.org](http://myshop.mahendras.org)

1

Select the related number from the given alternatives.

दिए गए विकल्पों में से संबंधित संख्या का चयन करें।

**ZA5, Y4B, XC6, W3D, \_\_\_\_\_**

A. **E7V**

B. **V2E**

C. **VE5**

D. **VE7**

**2**

Select the related number from the given alternatives.

दिए गए विकल्पों में से संबंधित संख्या का चयन करें।

**14 : 182 :: 13 : ?**

(a) 169

(b) 153

(c) 156

(d) 166



3

Select the related number from the given alternatives.

दिए गए विकल्पों में से संबंधित संख्या का चयन करें।

**8 : 16 : 32 :: 10 : 20 : 40 :: : 3 : 6 : 9 :: ?**

(a) 18 : 27 : 54

(b) 5 : 10 : 17

(c) 6 : 24 : 56

(d) 15 : 30 : 45

4

Select the related number from the given alternatives.  
दिए गए विकल्पों में से संबंधित संख्या का चयन करें।

1.  $64 - 576$

2.  $17 - 343$

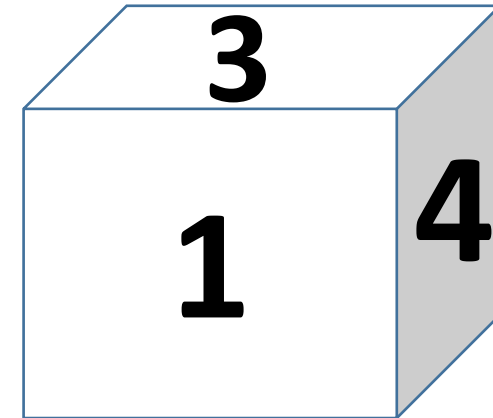
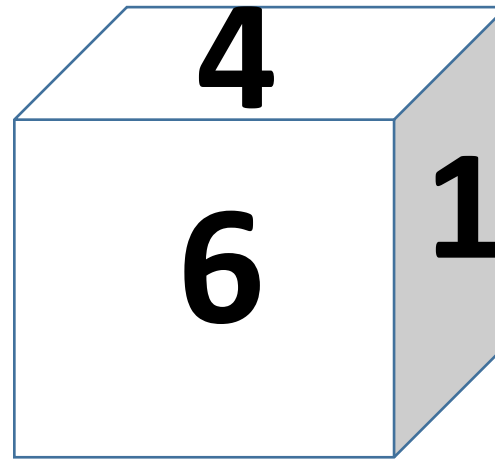
3.  $27 - 196$

4.  $32 - 36$



5

Two positions of dice are shown below. How many points will appear on the opposite to the face **containing 6 points**? किसी पांसे की दो बिभिन्न स्थितियों को दर्शाया गया है, दर्शाये गए पांसे की स्थिति में **6 की बिपरीत** सतह पर क्या है ?



(1) 5

(2) 6

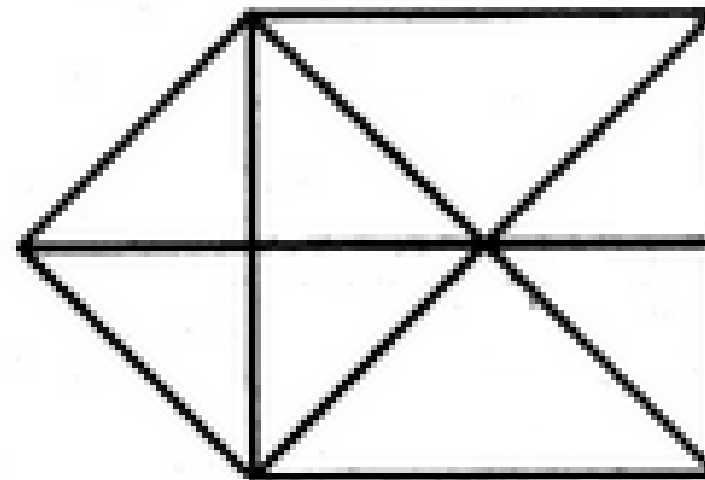
(3) 3

(4) 2

6

Find the number of **triangles** in the given figure.

दिए गए आंकड़े में **त्रिकोणों** की संख्या ज्ञात कीजिए।



A.15

B.16

C.17

D.18



7

Arrange the words given below in a meaningful sequence.

नीचे दिए गए शब्दों को सार्थक क्रम में व्यवस्थित करें।

1. Family परिवार 2. Community समुदाय

3. Member सदस्य 4. Locality इलाका 5. Country देश

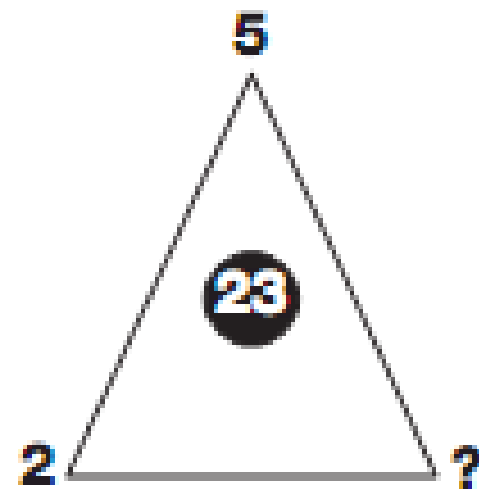
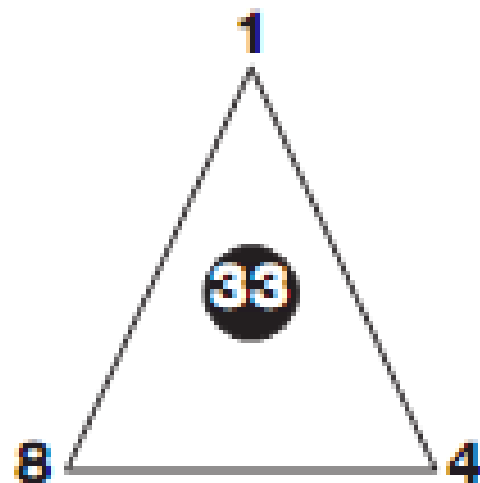
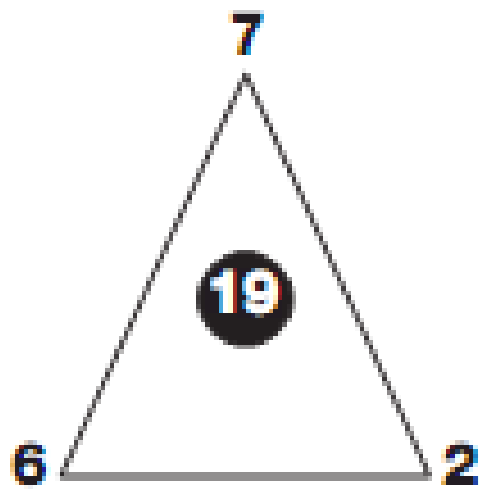
A.3, 1, 2, 4, 5

B.3, 1, 2, 5, 4

C.3, 1, 4, 2, 5

D.3, 1, 4, 5, 2

8



(1) 5

(2) 6

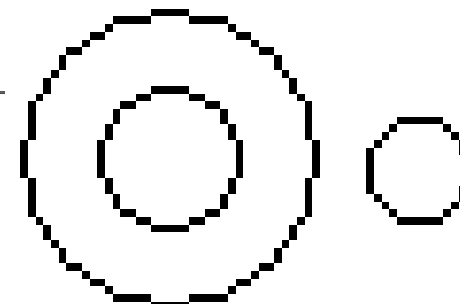
(3) 9

(4) 2

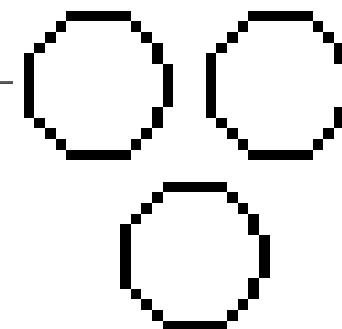


9

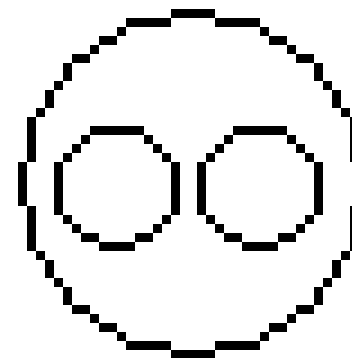
Author, Lawyer and Singer ?  
लेखक, वकील और गायक?



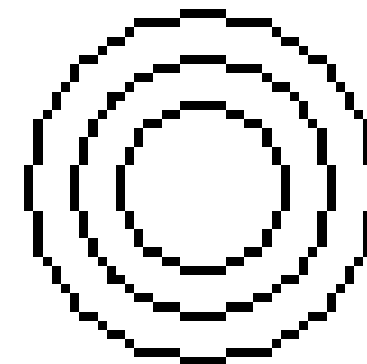
A



B



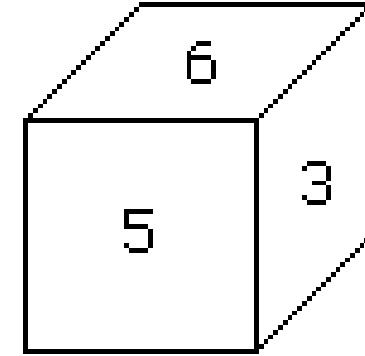
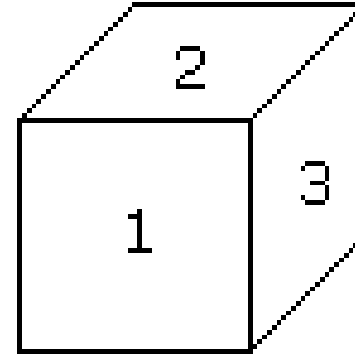
C



D

10

Which digit will appear on the face opposite to the face with number 4? नंबर 4 के विपरीत चेहरे पर कौन सा अंक दिखाई देगा?



A.3

B.5

C.6

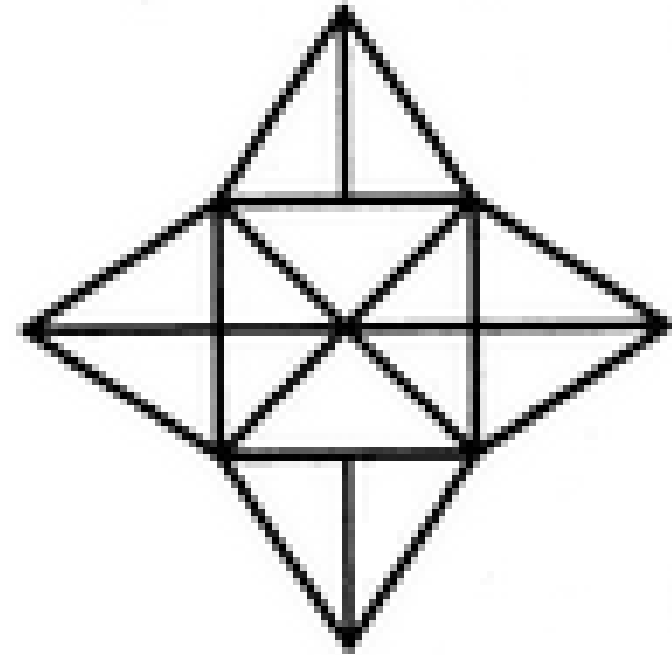
D.2/3



11

Find the number of **triangles** in the given figure.

दिए गए आंकड़े में **त्रिकोणों** की संख्या ज्ञात कीजिए।



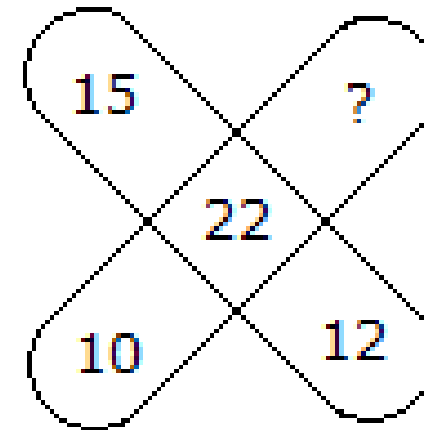
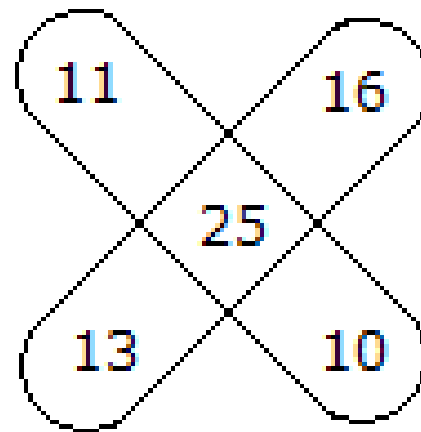
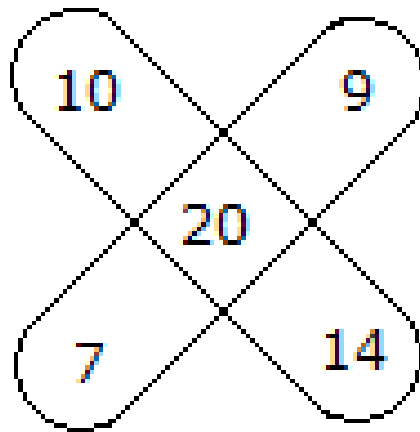
A.18

B.20

C.28

D.34

12



A.6

B.7

C.8

D.9



13

3	6	8
5	8	4
4	7	?

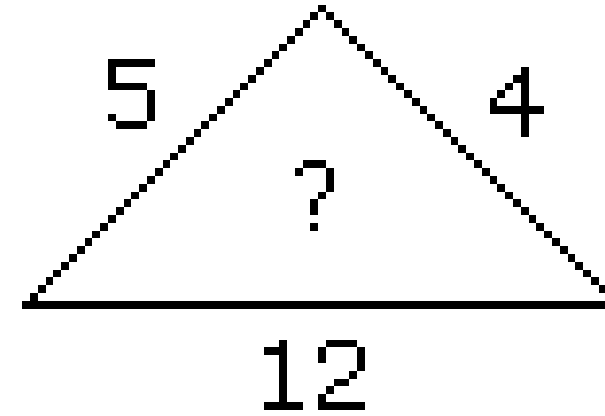
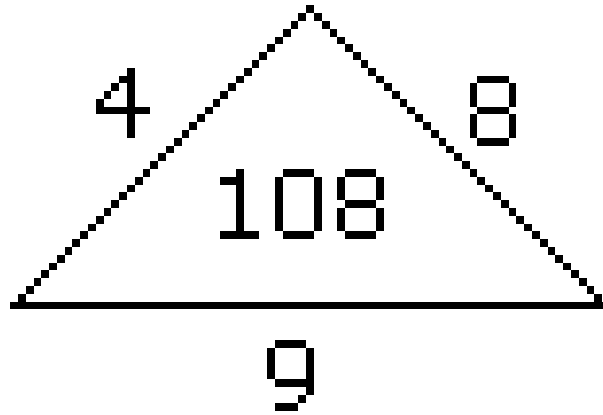
A.6

B.7

C.8

D.9

14



A.80

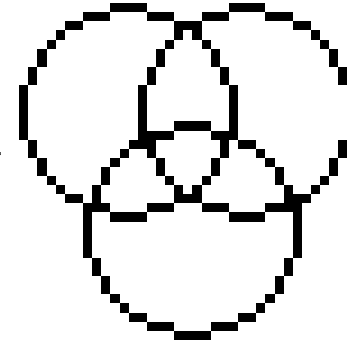
B.114

C.108

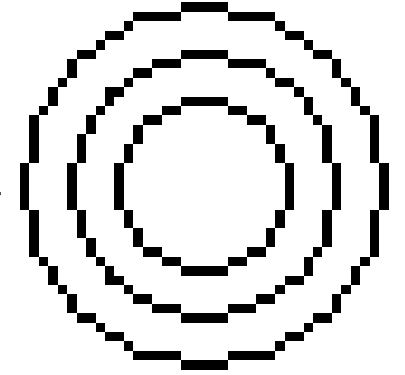
D.None of these

15

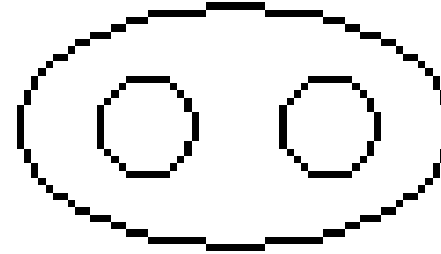
Hospital, Nurse and Patient ?  
अस्पताल, नर्स और रोगी?



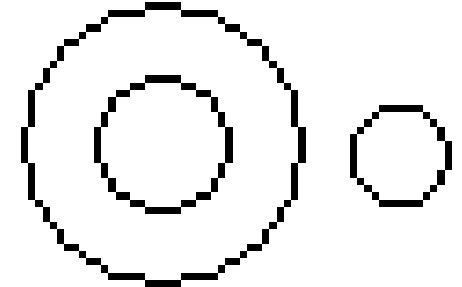
A



B



C

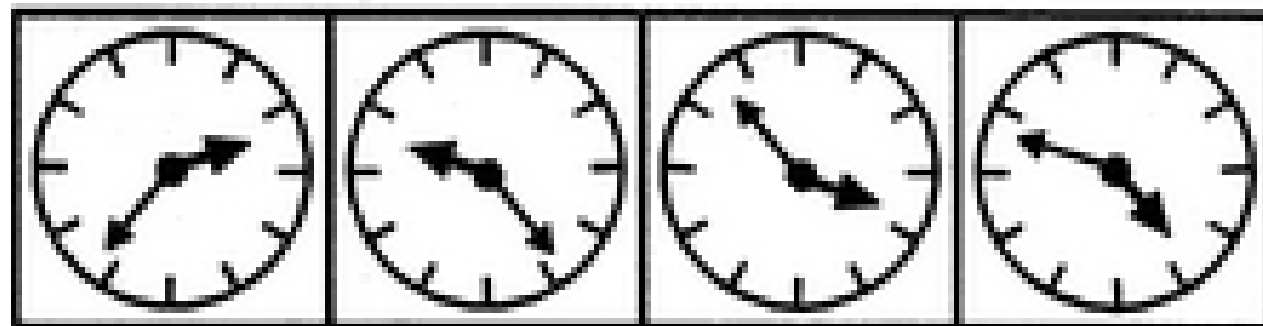
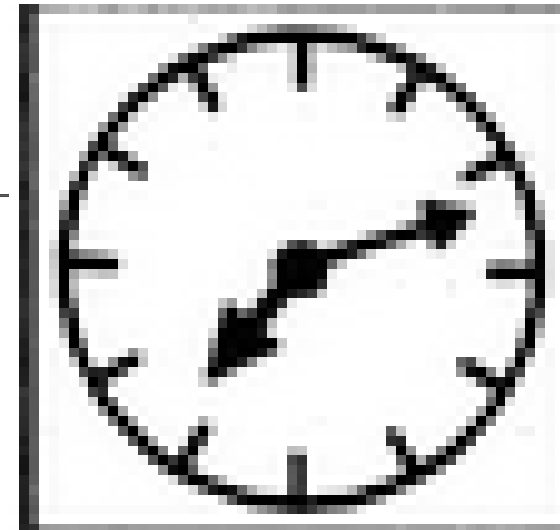


D



16

# MIRROR IMAGE



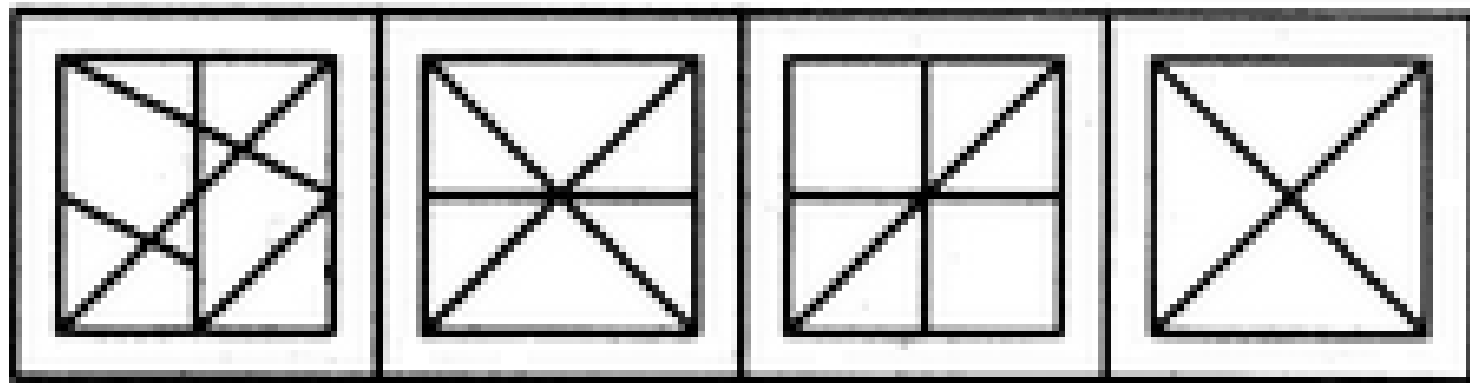
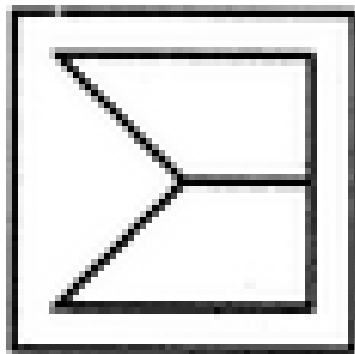
A

B

C

D

17




A

B


C

D


18




A



B


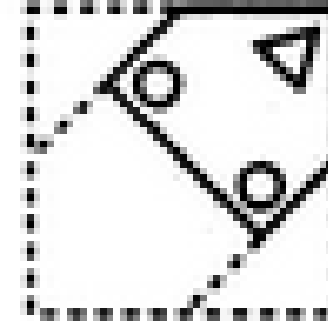


C

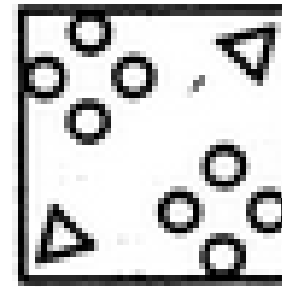


D

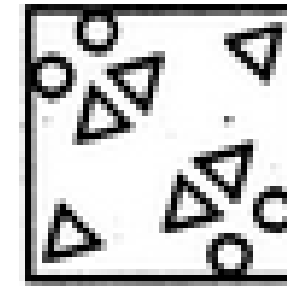





(1)



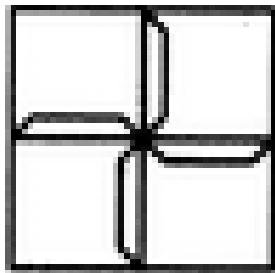
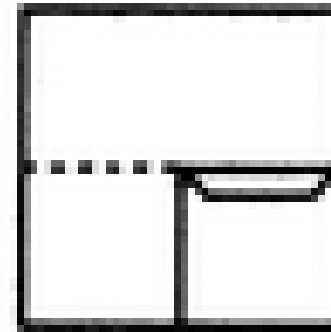


(2)




(3)



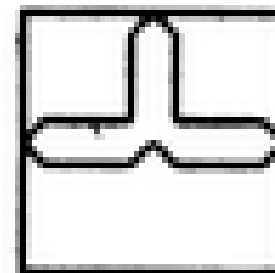
(4)



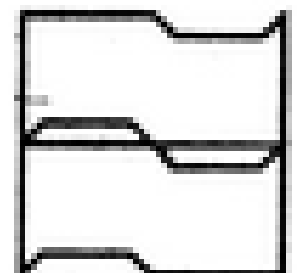
(1)



(2)



(3)



(4)