



RAILWAY NTPC

REASONING

T-20+QUESTION SERIES

ऐसे सवाल सिर्फ

NTPC ही पूछता है

DAY-38

 Mahendra's

ENSURE YOUR SUCCESS WITH- **VIDEO GURU**



A COMPLETE VIDEO CLASS
FOR YOUR PREPARATION

Subscribe
BUTTON



BOOST YOUR PREPARATIONS WITH MAHENDRAS: STUDY MATERIAL, E-MICA, E-NEWS, BAGS & MUCH MORE. VISIT NOW: myshop.mahendras.com

CRACK

IBPS PO/CLERK PRE 2019

Start Preparing With



Buy From -

myshop.mahendras.org

Toll Free - 1800 103 5225

LIVE CLASS

IBPS PO

PRE 2019

Selling Price
~~₹4000~~

₹1999

CLASS TIMING

- 8:00 AM - Reasoning
- 9:00 AM - English
- 10:00 AM - Maths

LIBRARY VALIDITY **1 YEAR**

LIVE CLASS

IBPS CLERK

PRE 2019

Selling Price
~~₹3000~~

₹1499

CLASS TIMING

- 01:00 PM - English
- 02:00 PM - Maths
- 03:00 PM - Reasoning

LIBRARY VALIDITY **1 YEAR**

Batch Start Date - 15 July 2019

Live Streaming Classes

THE AMAZING Exam Ticket

VALIDITY - 1 MONTH

₹999 Only For You

Daily Fresh Live Stream Access

Save 100%

Mahendra's ALL EXAM IN ONE TICKET

Buy Both Above Cards

₹999/- Only.

Validity 1 Month



ENSURE YOUR SUCCESS WITH- **VIDEO GURU**



A COMPLETE VIDEO CLASS FOR YOUR PREPARATION

Subscribe BUTTON

BOOST YOUR PREPARATIONS WITH MAHENDRAS: STUDY MATERIAL, E-MICA, E-NEWS, BAGS & MUCH MORE. VISIT NOW: myshop.mahendras.org

बीच रास्ते से लौटने का कोई फायदा नहीं
क्योंकि लौटने पर आपको उतनी ही दूरी तय करनी पड़ेगी
जितनी दूरी तय करने पर आप लक्ष्य तक पहुँच सकते हैं।

READY

 Mahendra's

ENSURE YOUR SUCCESS WITH- **VIDEO GURU**



A COMPLETE VIDEO CLASS
FOR YOUR PREPARATION

Subscribe
BUTTON 

BOOST YOUR PREPARATIONS WITH MAHENDRAS: **STUDY MATERIAL, E-MICA, E-NEWS, BAGS & MUCH MORE.** VISIT NOW: myshop.mahendras.c

1

Select the related number from the given alternatives.

दिए गए विकल्पों में से संबंधित संख्या का चयन करें।

64 : 100 :: 16 : ?

(1) **25**

(2) **36**

(3) **50**

(4) **55**

2

Select the related number from the given alternatives.

दिए गए विकल्पों में से संबंधित संख्या का चयन करें।

- (a) Metropolis महानगर
- (b) Home होम
- (c) Town टाउन
- (d) Village ग्राम

3

Select the related number from the given alternatives.

दिए गए विकल्पों में से संबंधित संख्या का चयन करें।

DH : EG?

1) QT : RS

2) LP : MO

3) VZ : XY

4) All are having the same
relationship

सभी एक तरह से सम्बंधित हैं

4

Select the related number from the given alternatives.

दिए गए विकल्पों में से संबंधित संख्या का चयन करें।

$1/2, 3/4, 5/8, 7/16, ?$

(a) $9/32$

(b) $10/17$

(c) $11/34$

(d) $12/35$

5

___bc c ___ a abc ___ baa b ___

(1) **acbc**

(2) **abac**

(3) **abcc**

(4) **acac**

6

If two days after day after tomorrow is Sunday, **what day was the day before yesterday?** यदि कल के दो दिन बाद का दिन रविवार है, तो कल से पहले का दिन कौन सा था?

- (1) Wednesday
- (2) Tuesday
- (3) Monday
- (4) Sunday

7

Four persons P, Q, R and S are playing cards. Q and R are partners. S is facing towards South. Next to the right of S is Q. **Where is P facing?** चार व्यक्ति P, Q, R और S ताश खेल रहे हैं। Q और R साझेदार हैं। S, दक्षिण की ओर है। S के दाईं ओर Q है। **P कहाँ देख रहा है?**

- (a) North
- (b) East
- (c) West
- (d) North-East

8

Mani is double the age of Prabhu, Ramona is half the age of Prabhu.

If Mani is sixty, **find out the age of Ramona.**

मणि प्रभु की उम्र से दोगुना है, रमोना प्रभु की आधी उम्र की है। अगर मणि की उम्र 60 है, **तो रमोना की उम्र का पता लगाएं।**

(a) **20**

(b) **15**

(c) **10**

(d) **24**

9

If 2 is related to 7, 6 will be related to
यदि 2 का संबंध 7 से है, तो 6 का संबंध होगा

(a) 215

(b) 329

(c) 164

(d) 84

 Mahendra's

ENSURE YOUR SUCCESS WITH- **VIDEO GURU**



A COMPLETE VIDEO CLASS
FOR YOUR PREPARATION

Subscribe
BUTTON 

BOOST YOUR PREPARATIONS WITH MAHENDRAS: STUDY MATERIAL, E-MICA, E-NEWS, BAGS & MUCH MORE. VISIT NOW: myshop.mahendras.c

10

Vipul is taller than Hansa. Hansa is taller than Anand. Alok is taller than Ashok. Ashok is taller than Hansa. **Who is the tallest?**

विपुल हंसा से लंबा है। हंसा आनंद से लंबी है। आलोक अशोक से लंबा है। अशोक हंसा से लंबा है। **सबसे लंबा कौन है?**

- (a) Vipul
- (b) Alok
- (c) Ashok
- (d) Cannot be determined

11

E _ GF _ E _ FGF _ E

- (1) EGFG**
- (2) GFEE**
- (3) FEFG**
- (4) FGEE**

12

If ENGLAND is written as 1234526 and FRANCE is written as 785291, **how is GREECE coded?**

अगर ENGLAND को 1234526 और FRANCE को 785291 लिखा जाता है, तो **GREECE को कैसे कोडित किया जाता है?**

(a) 381171

(b) 381191

(c) 832252

(d) 835545

13

If Friday falls on 15th of September 2000, **what will be the day of 15th of September 2001?** यदि 15 सितंबर 2000 को शुक्रवार पड़ता है, तो 15 सितंबर 2001 का दिन क्या होगा?

- (1) Friday
- (2) Saturday
- (3) Thursday
- (4) Sunday

 Mahendra's

ENSURE YOUR SUCCESS WITH- **VIDEO GURU**



A COMPLETE VIDEO CLASS
FOR YOUR PREPARATION

Subscribe
BUTTON 

BOOST YOUR PREPARATIONS WITH MAHENDRAS: **STUDY MATERIAL, E-MICA, E-NEWS, BAGS & MUCH MORE.** VISIT NOW: myshop.mahendras.c

14

$$2 \times 3 \times 4 = 432,$$

$$5 \times 6 \times 7 = 765,$$

$$7 \times 8 \times 9 = 987,$$

$$2 \times 5 \times 7 = ?$$

(a) **572**

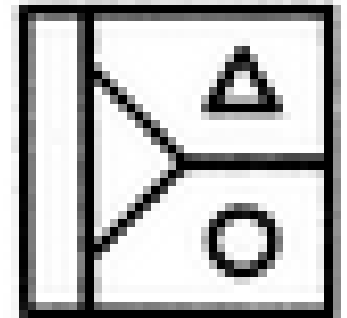
(b) **752**

(c) **725**

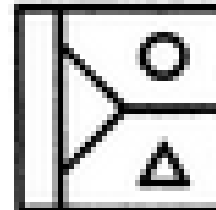
(d) **257**

15

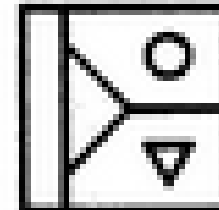
WATER IMAGE



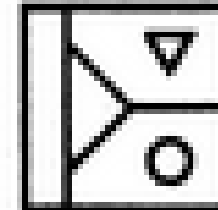
(X)




(1)



(2)

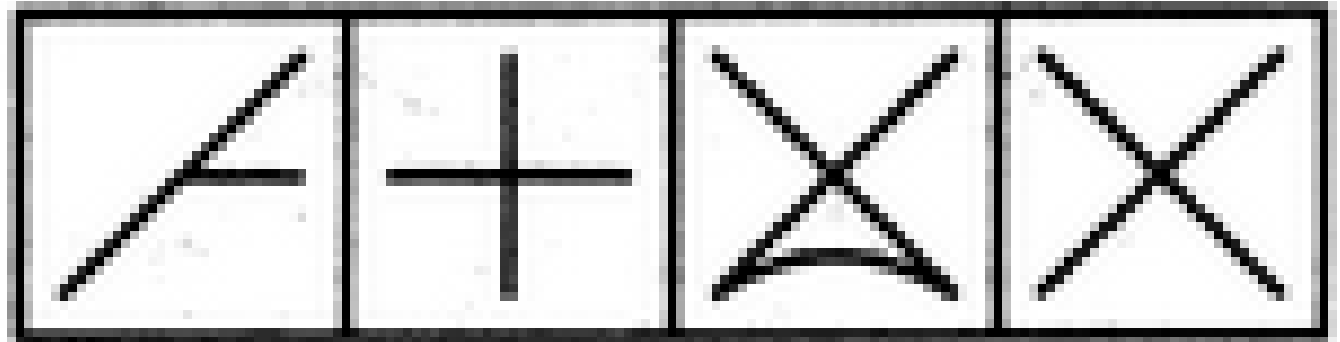
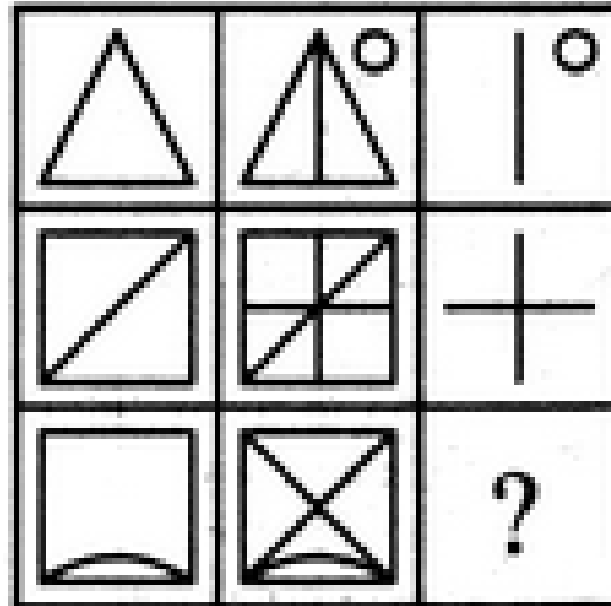


(3)



(4)

16




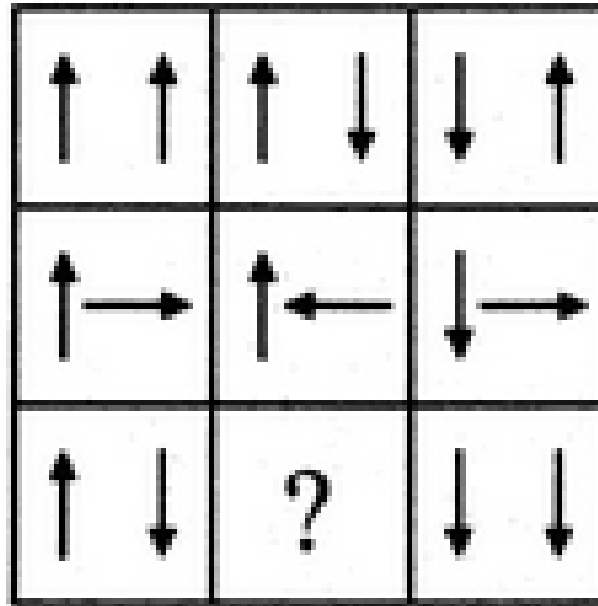
(1)

(2)

(3)

(4)

17



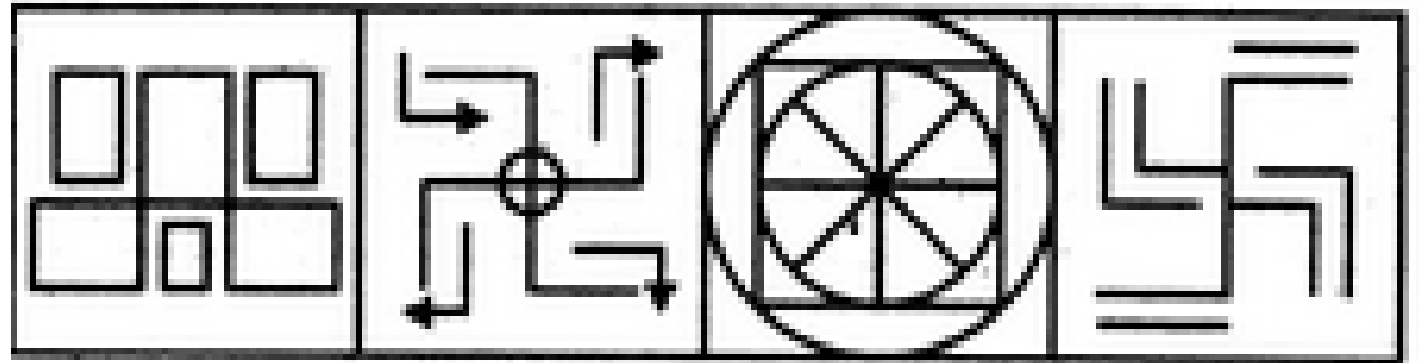
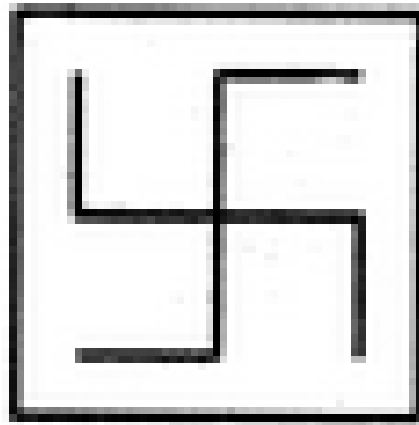
(1)

(2)

(3)

(4)

18







A


B

C


D




(1)



(2)


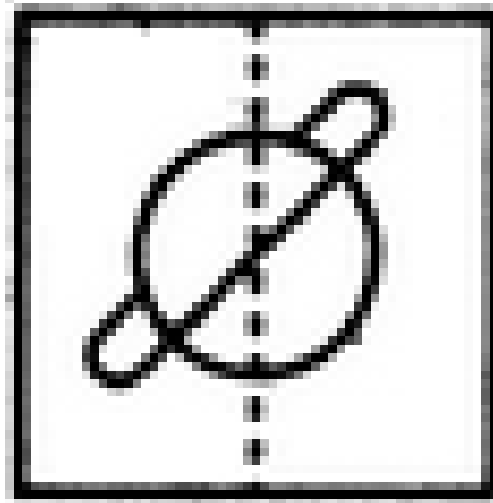


(3)

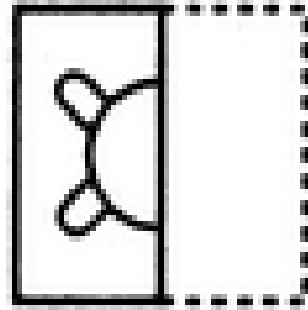


(4)

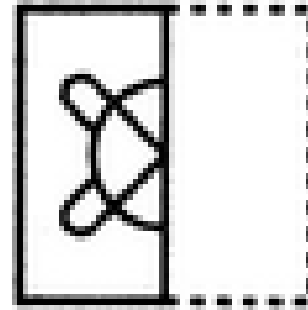
20



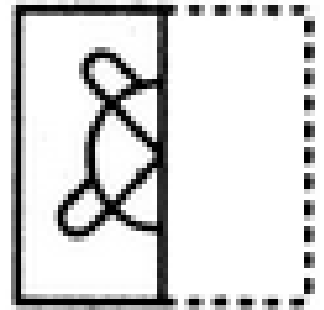
A



B



C

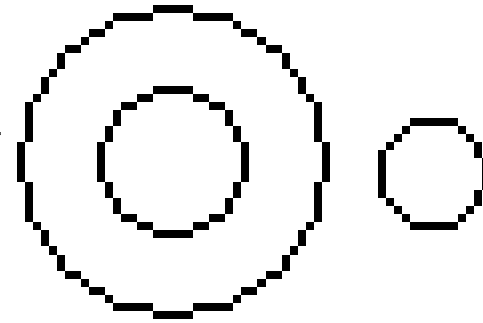


D

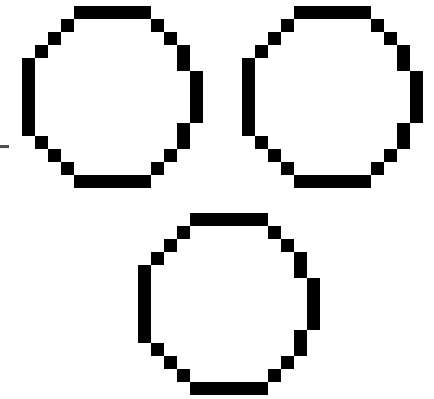
21

Travelers, Train and Bus


यात्री, ट्रेन और बस



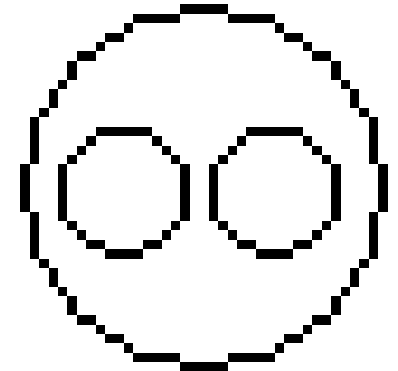
A



B



C



D



TARGET

SBI CLERK MAINS EXAM !!

Start Preparing With  *Mahendra's*

CLASS TIMING

10:30 AM TO 12:30 PM

Batch Start Date - 10 July 2019

₹999/-

LIVE CLASS

SBI

SBI CLERK MAINS 2019

CRASH COURSE



Buy From - myshop.mahendras.org

Toll Free - 1800 103 5225

Mahendra's

ENSURE YOUR SUCCESS WITH- VIDEO GURU



**A COMPLETE VIDEO CLASS
FOR YOUR PREPARATION**

**Subscribe
BUTTON**

BOOST YOUR PREPARATIONS WITH MAHENDRAS: STUDY MATERIAL, E-MICA, E-NEWS, BAGS & MUCH MORE. VISIT NOW: myshop.mahendras.org



A MILESTONE
in Making Your
Preparation
STRONGER

Buy From -
myshop.mahendras.org
Toll Free - 1800 103 5225

Bank, SSC & Railway
All Live Classes

In Just

One Ticket



Get Ticket To Your Success

₹999/- Only.

Mahendra's

ENSURE YOUR SUCCESS WITH- **VIDEO GURU**



A COMPLETE VIDEO CLASS
FOR YOUR PREPARATION

Subscribe
BUTTON



BOOST YOUR PREPARATIONS WITH MAHENDRAS: STUDY MATERIAL, E-MICA, E-NEWS, BAGS & MUCH MORE. VISIT NOW: myshop.mahendras.org



Once Again



Highest Selection

In

SBI PO PRE 2019 Exam

JOIN  *Mahendra's*
To Crack SBI PO Mains !!

For Online Live Class

Visit - myshop.mahendras.org

For Admission In Branch

Visit Mahendras Nearest Branch

Call Us : 1800-103-5225 (9:00 AM To 6:00 PM)

 Mahendra's

ENSURE YOUR SUCCESS WITH- **VIDEO GURU**



A COMPLETE VIDEO CLASS
FOR YOUR PREPARATION

Subscribe
BUTTON



BOOST YOUR PREPARATIONS WITH MAHENDRAS: STUDY MATERIAL, E-MICA, E-NEWS, BAGS & MUCH MORE. VISIT NOW: myshop.mahendras.org