



RAILWAY NTPC

REASONING

5:00 PM

T-20⁺ QUESTION SERIES

फेल न होना हो तो ऐसे सवाल देख लेना

DAY- 16

Mahendra's

GET COMPLETE ST SOLUTION WITH- **VIDEO BOX**



FINE TUNE YOUR T

Subscribe
NOW

BOOST YOUR PREPARATIONS WITH MAHENDRAS: STUDY MATERIAL, E-MICA, E-NEWS, BAGS & MUCH MORE. VISIT NOW: [m](#)

LIVE CLASS

TARGET SSC 2019

GS



GS

02:00 PM TO 03:00 PM

60+ Lectures

LIVE CLASS

TARGET SSC 2019

ENGLISH



ENGLISH

04:00 PM TO 05:00 PM

50+ Lectures

LIVE CLASS

TARGET SSC 2019

MATHS



MATHS

06:00 PM TO 07:00 PM

60+ Lectures

Batch Start Date

26 JUNE 19

KEY FEATURES

- ➔ CLASSES: 6 DAYS A WEEK (MON-SAT)
- ➔ CLASS DURATION: 1 HOUR
- ➔ LANGUAGE: HINDI
- ➔ BATCH STRENGTH: 100 SEATS
- ➔ VIDEO LIBRARY VALIDITY: 365 DAYS
- ➔ CLASSES BY EXPERT FACULTIES
- ➔ TOPIC WISE PDF
- ➔ CHAT FACILITY

MRP

~~₹5000~~

Selling Price

₹1999/-

Visit

myshop.mahendras.org



19th
june 2019

12:00 PM – 6:00 PM

SPEED TEST CARD MOST POPULAR

ALL IN ONE

999
TESTS

2
YEARS VALIDITY

BANK, SSC, RAILWAY & STATE LEVEL EXAMS

MRP:- ~~₹5000~~

Offer Price:- **₹499**

BUY FROM

myshop.mahendras.org

Mahendra's

GET COMPLETE ST SOLUTION WITH- **VIDEO BOX**



FINE TUNE YOUR T

Subscribe
NOW

BOOST YOUR PREPARATIONS WITH MAHENDRAS: STUDY MATERIAL, E-MICA, E-NEWS, BAGS & MUCH MORE. VISIT NOW: m

Mahendra's **BOOK FAIR**

18th JUNE TO **20th JUNE**
12:00 AM **11:59 PM**

BUY FROM
myshop.mahendras.org

SSC Kit - 2019

(Combo of 5 books)

ENGLISH

HINDI

₹599*

Bank Kit - 2019

(Combo of 5 books)

ENGLISH

HINDI

₹499*

Bank Kit - Hindi

(Combo of 4 books)

₹299

**UP STATE EXAM
KIT**

(Combo of 7 books)

₹599

* Prices Applicable On Individual Products



Mahendra's

GET COMPLETE ST SOLUTION WITH- **VIDEO BOX**



FINE TUNE YOUR T


Subscribe
NOW

BOOST YOUR PREPARATIONS WITH MAHENDRAS: STUDY MATERIAL, E-MICA, E-NEWS, BAGS & MUCH MORE. VISIT NOW: m

1

Select the related word/letters/number from the given alternatives:

Tanning : Leather :: Pyrotechnics : ?



- A. Bombs**
- B. Fireworks**
- C. Wool**
- D. Machinery**

2

Select the related word/letters/number from the given alternatives:

Fish : Gills : : Human : ?

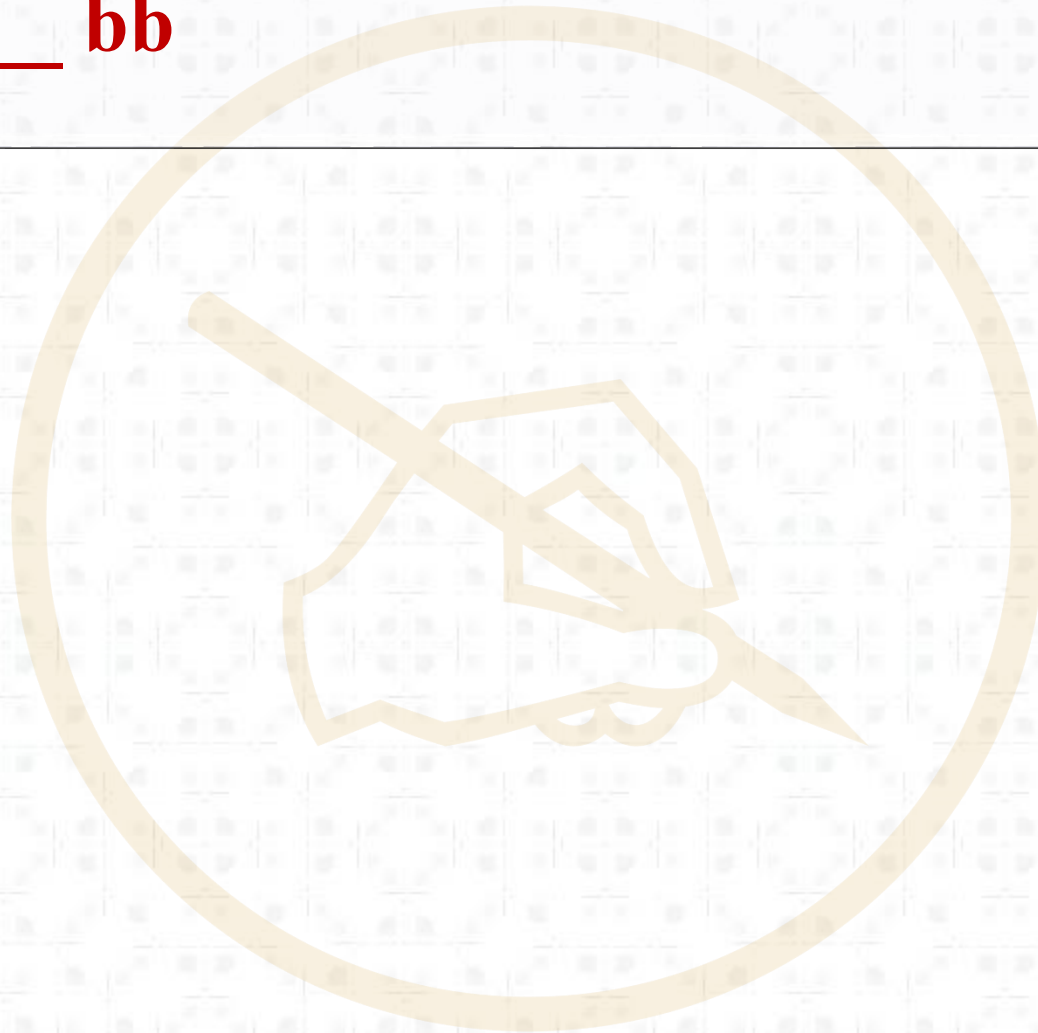


- A. Heart**
- B. Lungs**
- C. Nose**
- D. Mouth**

3

Select the related word/letters/number from the given alternatives:

a__ bba _ bba __ bb



- A. bba**
- B. aab**
- C. abb**
- D. bbb**

4

How many 4's are there preceded by 7 but not followed by 3?


5932174269746132874138325674395820187463



- A. six
- B. four
- C. five
- D. three

5

Find the odd word/ number from the given alternatives.



- A. fastidious**
- B. firm**
- C. grave**
- D. agreeable**

6

Find the odd word/ number from the given alternatives.



A. 27

B. 125

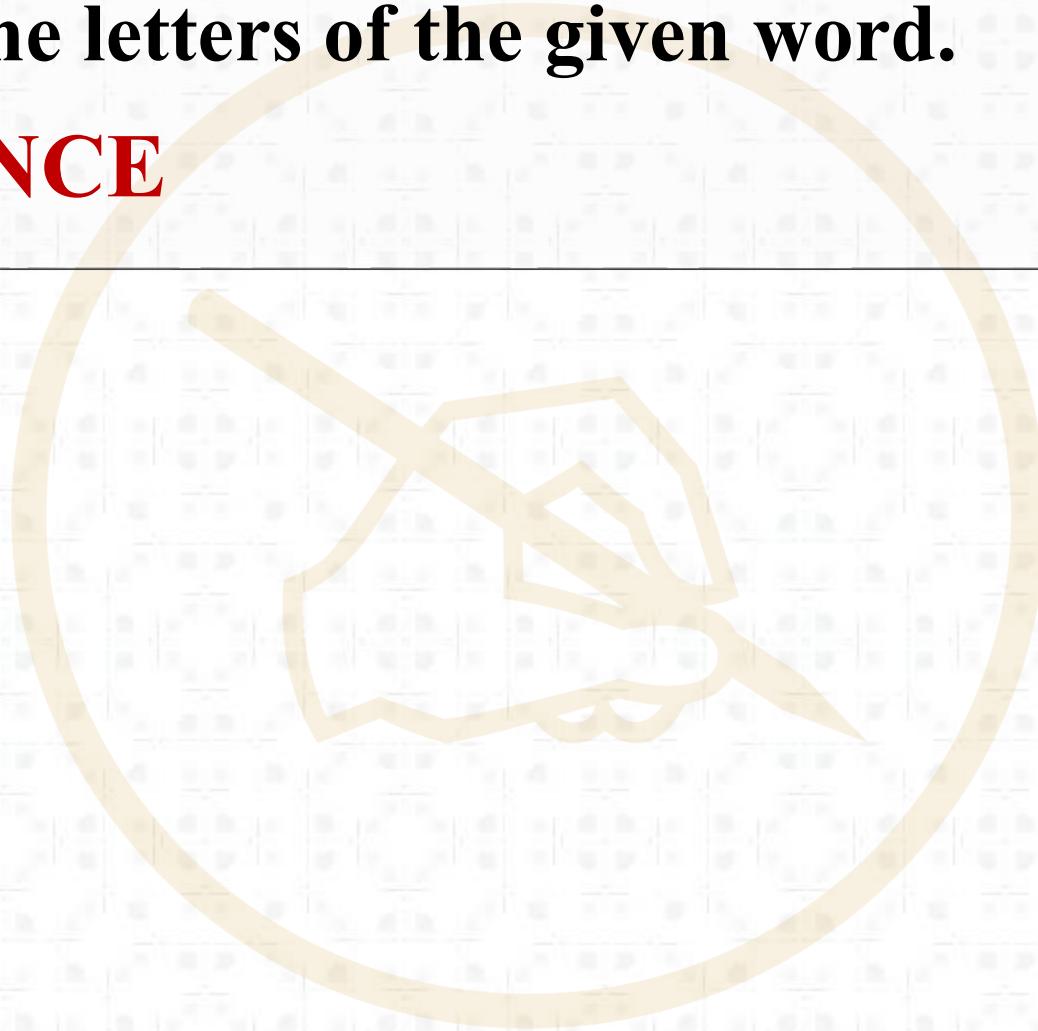
C. 216

D. 343

7

From the given alternatives select the word which cannot be formed using the letters of the given word.

INTELLIGENCE



- A. NEGLECT
- B. GENTLE
- C. INCITE
- D. CANCEL

8


If $55 + 66 = 33$ and $22 + 99 = 33$ what is $44 + 88$?

A. 33

B. 36

C. 38

D. 40



9

Arrange the following words in their ascending order, as in a dictionary:

1. Pick

2. Pith

3. Pile

4. Perk

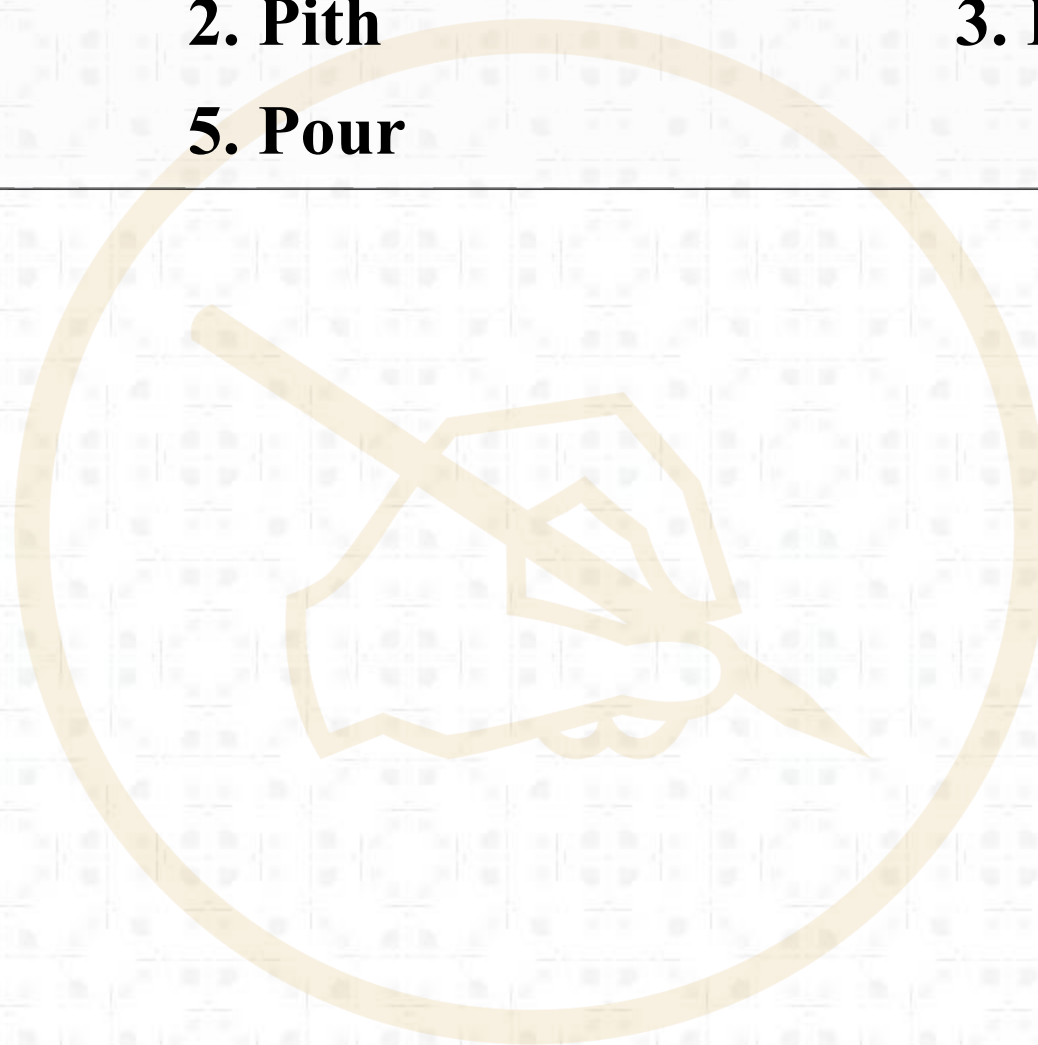
5. Pour

A. 4, 1, 2, 3, 5

B. 4, 1, 3, 2, 5

C. 3, 5, 3, 4, 1

D. 2, 3, 5, 1, 4



10

K is senior to G. G is senior to A. A is junior to R, R is junior to G. Who is the most senior?


- A. G
- B. R
- C. K
- D. A



11

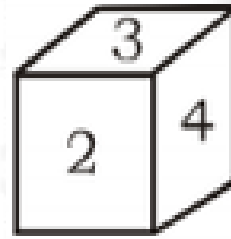
A and B both are walking away from point 'X'. A walked 3 m and B walked 4 m from it, then A walked 4 m north of 'X' and B walked 5 m south of X. What is the distance between them now ?

- A. 11.40 m
- B. 9.5 m
- C. 9 m
- D. 16 m

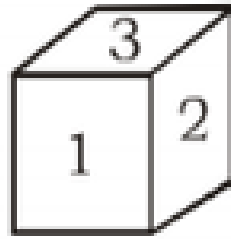


12

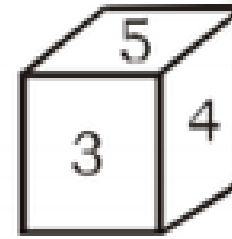
Four forms of a dice are shown below on the surface of which numbers from 1 to 6 are inscribed. Which digit will on the surface opposite to the digit '2'?



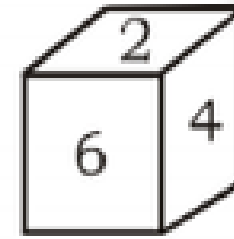
I



II



III



IV

A. 3

B. 4

C. 5

D. 6

13

Statement:

Education and wealth lead to progress.

Assumptions :

(I) Progress is possible if you are wealthy.

(II) Educated people are wealthy.

A. Only I is valid

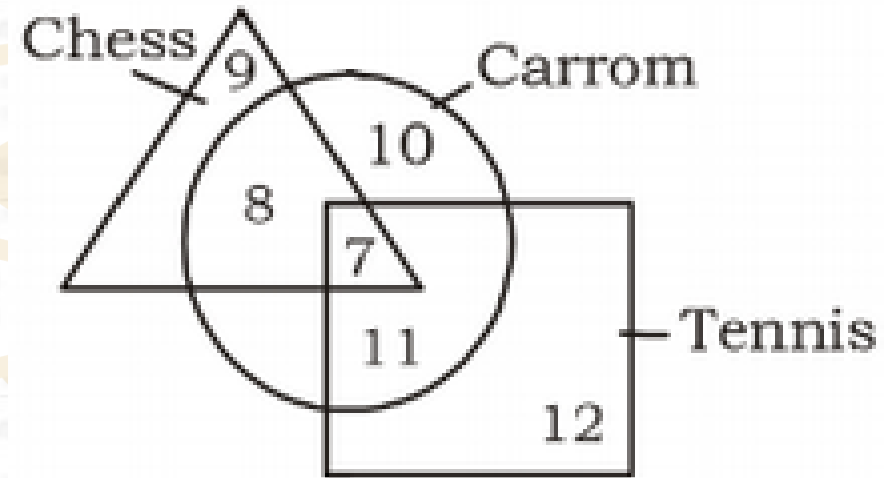
B. Only II is valid

C. Both assumptions are valid

D. Both assumptions are invalid



14

An interview of 60 persons to know whether they play Tennis, Chess or Carrom was conducted. The data so obtained has been summarized in a pictorial diagram as shown. Study the diagram and answer the question. How many persons do not play any games?




- A. 28
- B. 7
- C. 4
- D. 3


15




(A)



(B)



(C)

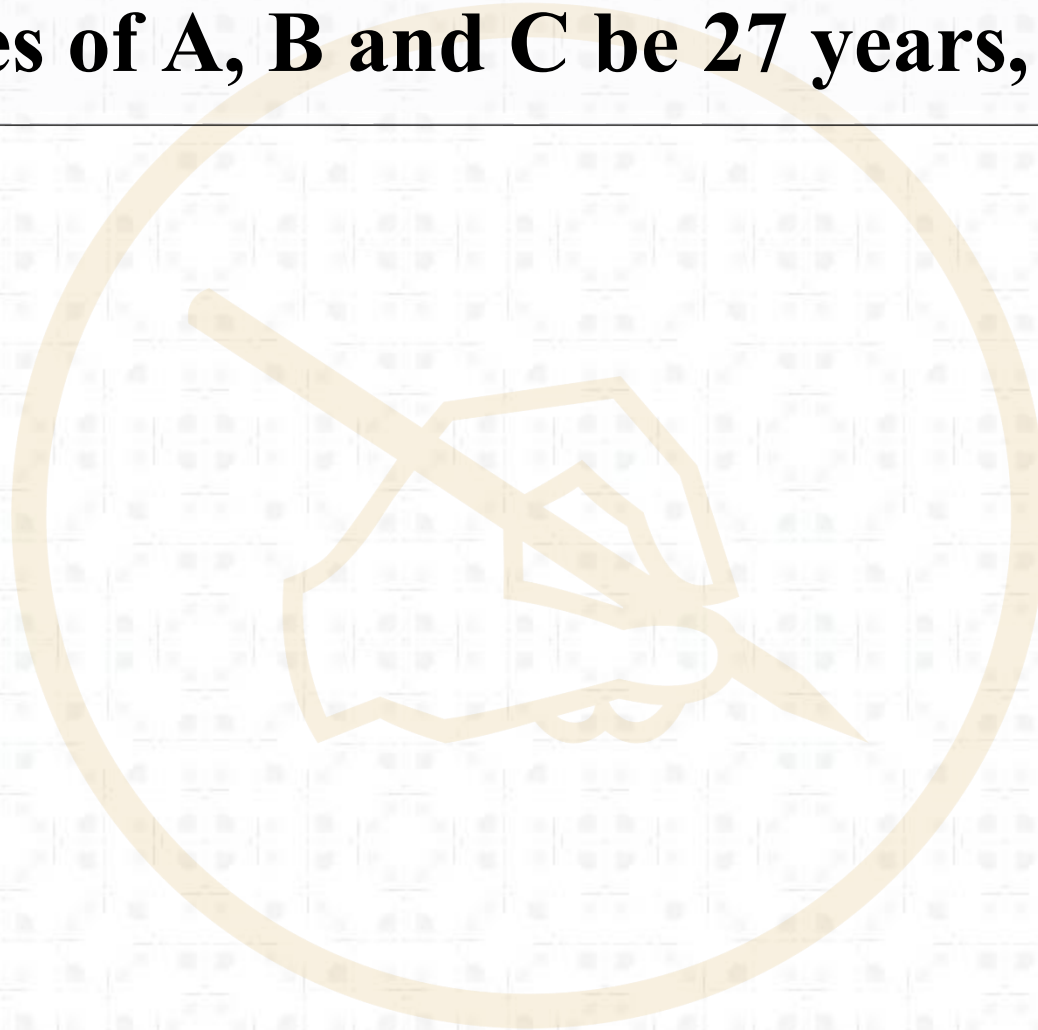


(D)

16

A is two years older than B who is twice as old as C. If the total of the ages of A, B and C be 27 years, then how old is B?

- A. 7 years**
- B. 8 years**
- C. 9 years**
- D. 10 years**



17

If $a + b > c + d$ and $b + c > a + d$ then it is definite that:-



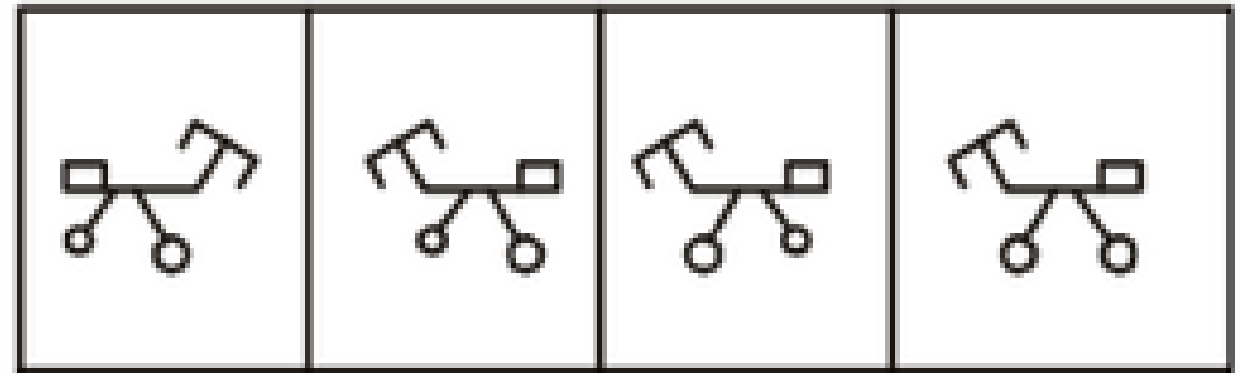
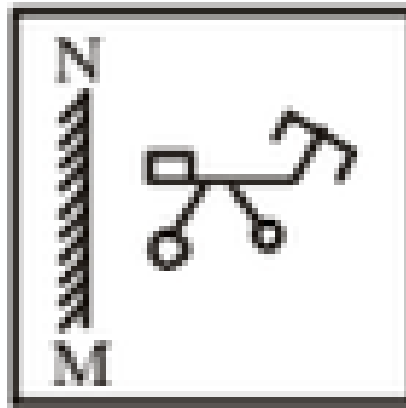
A. $b > c$

B. $b > d$

C. $c > d$

D. $a > d$

18

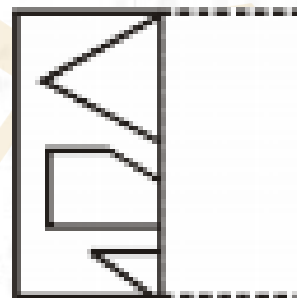
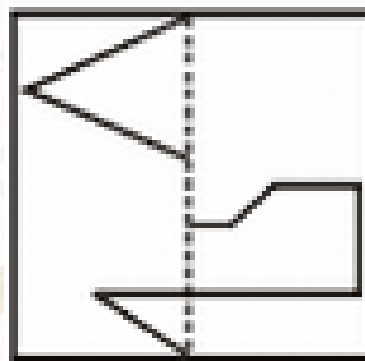


(a)

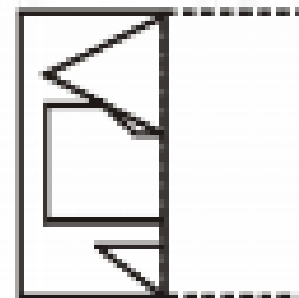
(b)

(c)

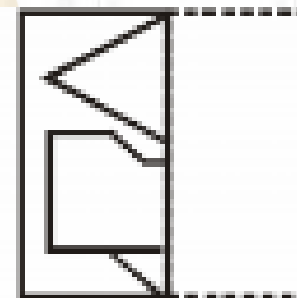
(d)



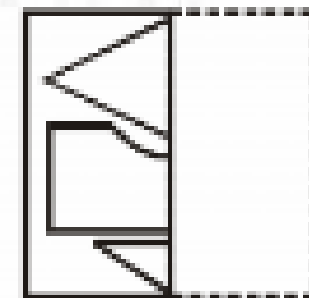
(A)



(B)



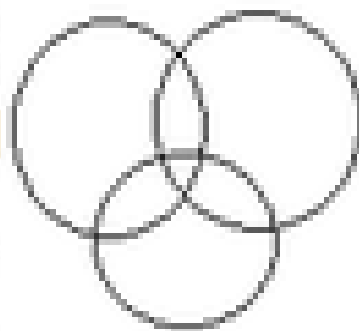
(C)



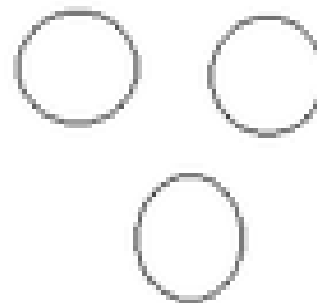
(D)

20

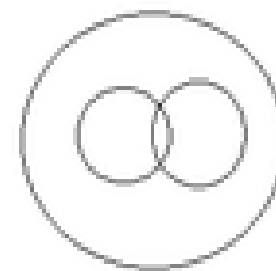
Which diagram correctly represents the relationship between politicians, poets and women ?



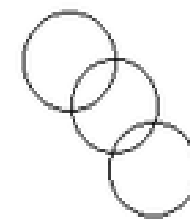
A



B



C

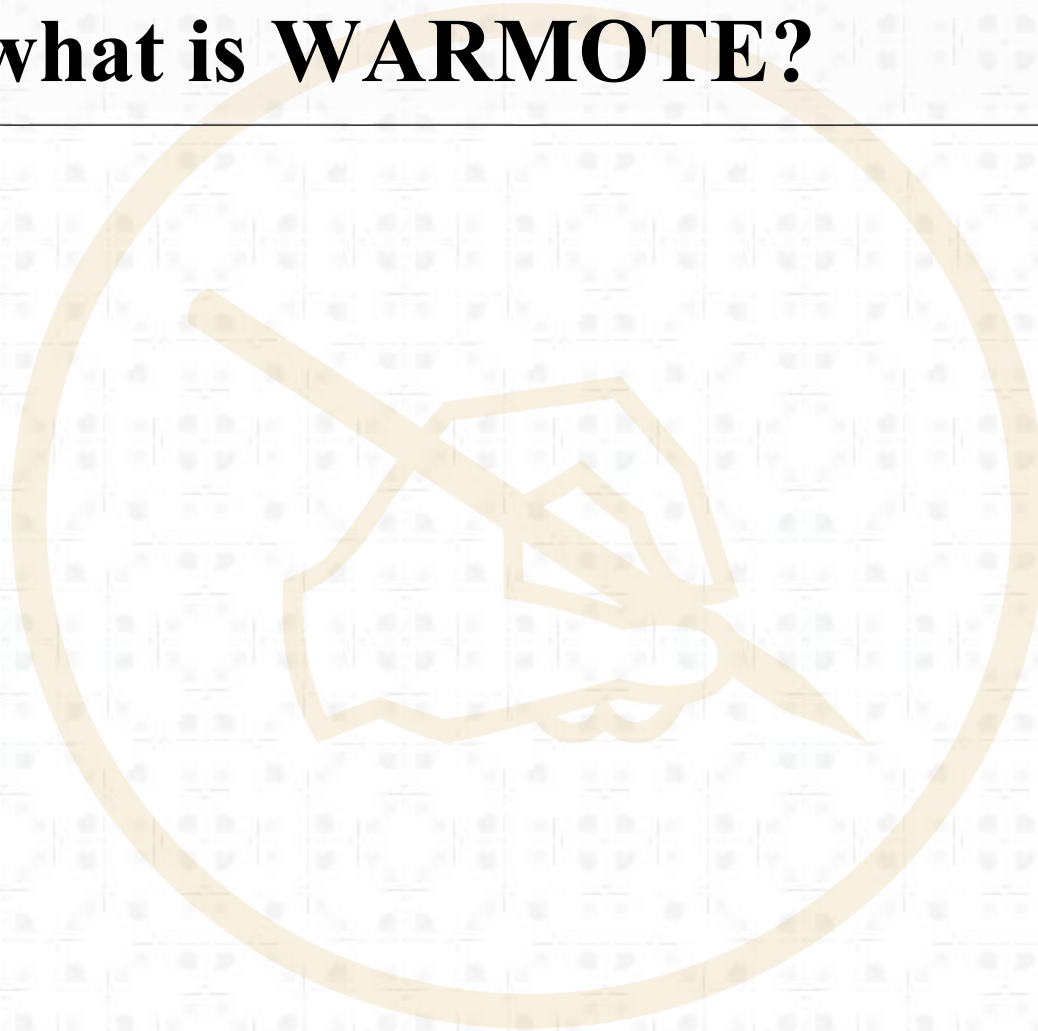


D

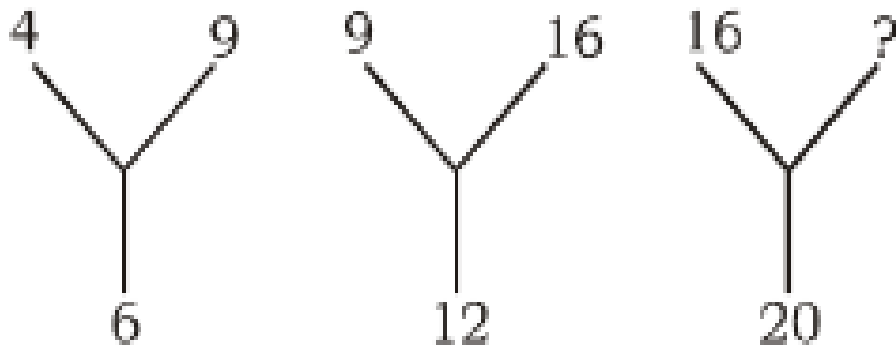
21

If E is A, A is R, R is X, M is S, T is W, P is O, W is E and O is T. Then what is **WARMOTE**?

- A. XERSWTAO**
- B. ERSJAWO**
- C. ERXSTWA**
- D. ESRXWAOT**



22



A. 18

B. 35

C. 25

D. 45

23

The angle between the hands of clock at 3 : 40 would be :

A. 130°

B. 150°

C. 140°

D. 125°



24

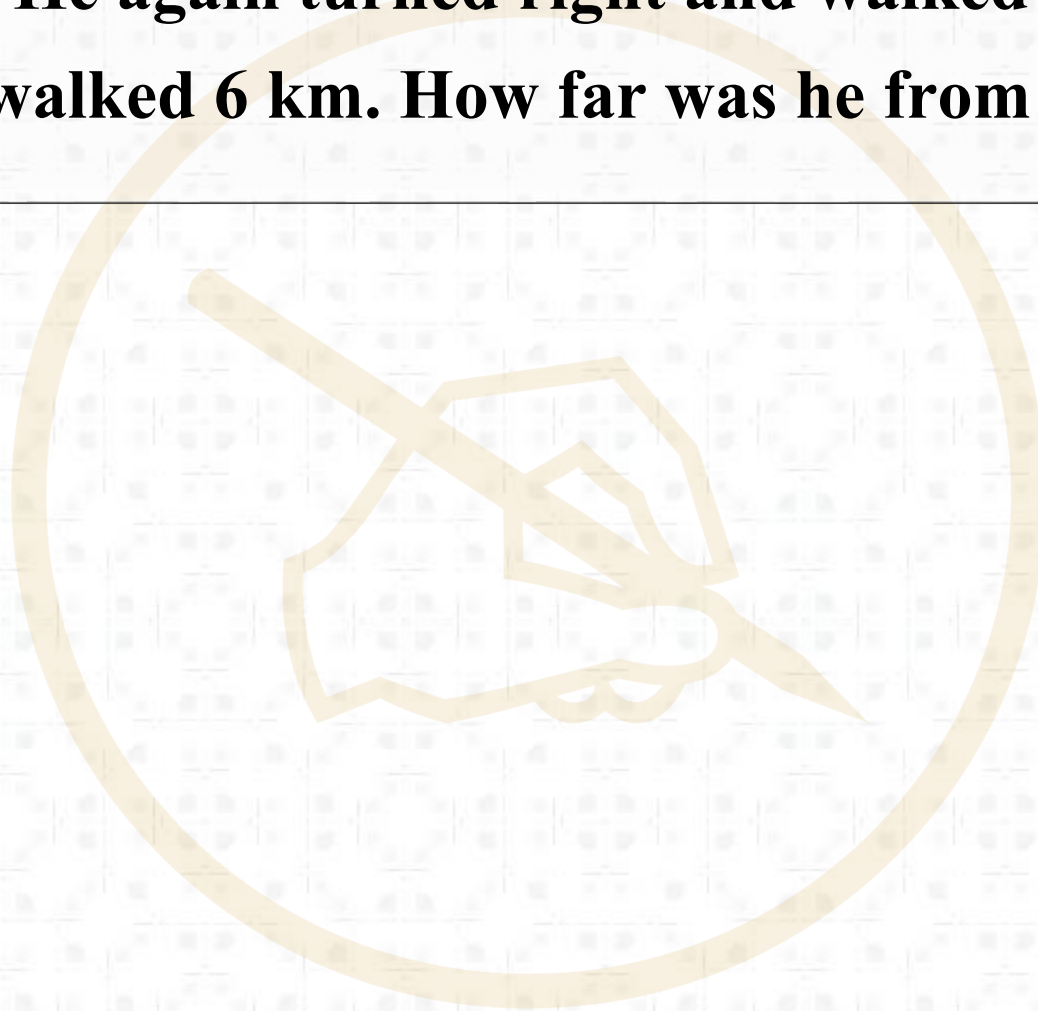
In a certain code language '**TROUBLE**' is written as '**GNDWQTV**'. Then, how will '**TEACHER**' be written in that code language?

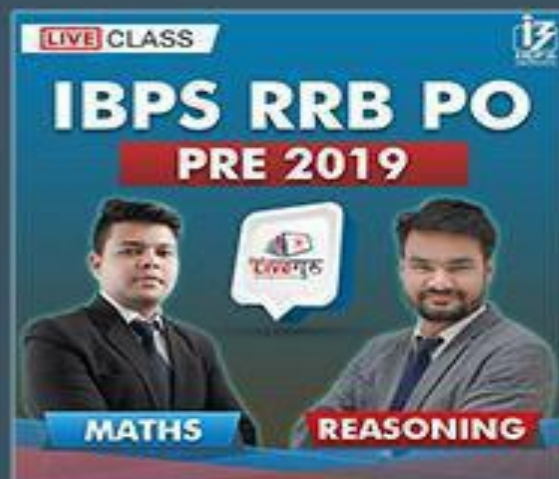
- A. TGJECGV
- B. THJEDHV
- C. TGIFDGV
- D. TGJEDGV

25

A man walked 10 km towards South from his house. Then he turned right and walked 6 km. He again turned right and walked 10 km. Thereafter, he turned right and walked 6 km. How far was he from the starting point ?

- A. 2 km
- B. 0 km
- C. 3 km
- D. 4 km





MATHS

REASONING

08:00 AM TO 09:00 AM 09:00 AM TO 10:00 AM

Selling Price

~~₹4000~~

Offer Price

₹1299/-



Mahendra's



Batch Start Date

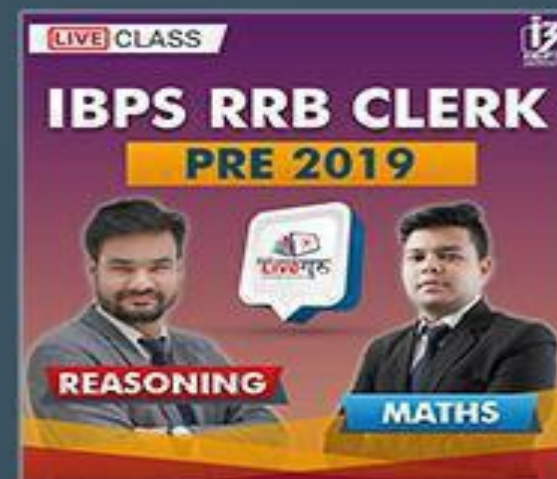
12 JUNE 19

KEY FEATURES

- PER DAY 2 HOURS CLASS
- 90+ HOURS CLASS
- 6 MONTHS VALIDITY OF LIBRARY
- CLASSES PROVIDED BY EXPERIENCED FACULTIES
- STUDY ANY WHERE ANY TIME
- CLASSES AS PER LATEST PATTERN
- EXAM ORIENTED CONTENT
- CHAT FACILITY
- PERSONAL ASSISTANCE BY FACULTY

Visit

myshop.mahendras.org



MATHS

REASONING

10:30 AM TO 11:30 AM 11:30 AM TO 12:30 PM

Selling Price

~~₹3500~~

Offer Price

₹999/-

Mahendra's

GET COMPLETE ST SOLUTION WITH- VIDEO BOX



FINE TUNE YOUR T

Subscribe NOW

BOOST YOUR PREPARATIONS WITH MAHENDRAS: STUDY MATERIAL, E-MICA, E-NEWS, BAGS & MUCH MORE. VISIT NOW: m