



RAILWAY NTPC

REASONING

T-20⁺ QUESTION SERIES

टॉपर्स इस तरह 15 मिनट में,

30 सवाल कर ले जाते हैं

DAY-28

Mahendra's

ENSURE YOUR SUCCESS WITH- **VIDEO GURU**



A COMPLETE VIDEO CLASS
FOR YOUR PREPARATION

Subscribe
BUTTON



BOOST YOUR PREPARATIONS WITH MAHENDRAS: STUDY MATERIAL, E-MICA, E-NEWS, BAGS & MUCH MORE. VISIT NOW: myshop.mahendras.com



TARGET

SBI CLERK MAINS EXAM !!

Start Preparing With  *Mahendra's*

CLASS TIMING

10:30 AM TO 12:30 PM

Batch Start Date - 10 July 2019

₹999/-

LIVE CLASS

SBI

SBI CLERK MAINS 2019

CRASH COURSE



Buy From - myshop.mahendras.org

Toll Free - 1800 103 5225

Mahendra's

ENSURE YOUR SUCCESS WITH- VIDEO GURU



**A COMPLETE VIDEO CLASS
FOR YOUR PREPARATION**

**Subscribe
BUTTON**



BOOST YOUR PREPARATIONS WITH MAHENDRAS: STUDY MATERIAL, E-MICA, E-NEWS, BAGS & MUCH MORE. VISIT NOW: myshop.mahendras.org



TARGET

SBI PO Mains Exam !!

Start Preparing With  *Mahendra's*

CLASS TIMING

2:00 PM TO 4:00 PM & 6:00 PM TO 8:00 PM

Batch Start Date - 1 July 2019

₹999

LIVE CLASS

SBI

SBI PO MAINS 2019

CRASH COURSE



Buy From - myshop.mahendras.org

Toll Free - 1800 103 5225

Mahendra's

ENSURE YOUR SUCCESS WITH- VIDEO GURU



**A COMPLETE VIDEO CLASS
FOR YOUR PREPARATION**

**Subscribe
BUTTON** 

BOOST YOUR PREPARATIONS WITH MAHENDRAS: STUDY MATERIAL, E-MICA, E-NEWS, BAGS & MUCH MORE. VISIT NOW: myshop.mahendras.org

1

In the following questions, select the related word/letters/numbers from the given alternatives:

निम्नलिखित प्रश्नों में, दिए गए विकल्पों से संबंधित शब्द / अक्षर / संख्या का चयन करें:

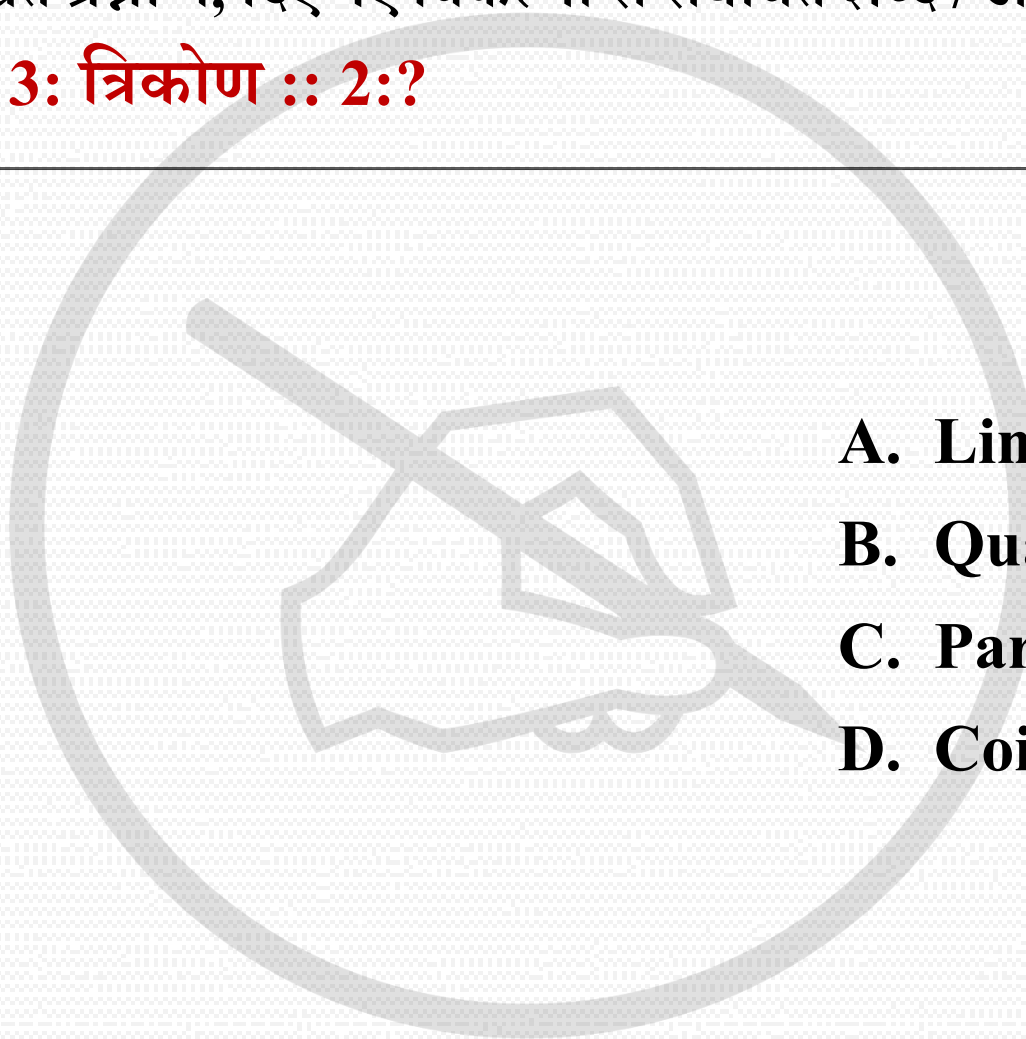
Atmospheric Pressure : Barometer :: Time : ? वायुमंडलीय दबाव: बैरोमीटर :: समय:?

- A. Calorimeter कैलोरीमीटर
- B. Caliper कैलिपर
- C. Anemometer एनीमोमीटर
- D. Clock घड़ी

2

In the following questions, select the related word/letters/numbers from the given alternatives: निम्नलिखित प्रश्नों में, दिए गए विकल्पों से संबंधित शब्द / अक्षर / संख्या का चयन करें:

3 : Triangle :: 2 : ? 3: त्रिकोण :: 2:?




- A. Line रेखा
- B. Quadrilateral चतुर्भुज
- C. Parallel lines समांतर रेखाएं
- D. Coincident lines संयोग रेखाएं

3

In the following questions, select the related word/letters/numbers from the given alternatives: निम्नलिखित प्रश्नों में, दिए गए विकल्पों से संबंधित शब्द / अक्षर / संख्या का चयन करें:

Y : F :: P : ?




- A. E
- B. G
- C. D
- D. H

4

In the following questions, select the related word/letters/numbers from the given alternatives: निम्नलिखित प्रश्नों में, दिए गए विकल्पों से संबंधित शब्द / अक्षर / संख्या का चयन करें:

TIN : O :: DID : ?




- A. I
- B. J
- C. K
- D. L

5

In the following questions, select the related word/letters/numbers from the given alternatives: निम्नलिखित प्रश्नों में, दिए गए विकल्पों से संबंधित शब्द / अक्षर / संख्या का चयन करें:

8 : 13 :: 18 : ?



A. 65

B. 52

C. 39

D. 26

 Mahendra's

ENSURE YOUR SUCCESS WITH- **VIDEO GURU**



A COMPLETE VIDEO CLASS
FOR YOUR PREPARATION

Subscribe
BUTTON




BOOST YOUR PREPARATIONS WITH MAHENDRAS: **STUDY MATERIAL, E-MICA, E-NEWS, BAGS & MUCH MORE.** VISIT NOW: myshop.mahendras.com

6

In the following questions, select the related word/letters/numbers from the given alternatives: निम्नलिखित प्रश्नों में, दिए गए विकल्पों से संबंधित शब्द / अक्षर / संख्या का चयन करें:


61 : 3 :: 44 : ?



- A. 2
- B. 3
- C. 4
- D. 5

7

In the following questions, select the related word/letters/numbers from the given alternatives: निम्नलिखित प्रश्नों में, दिए गए विकल्पों से संबंधित शब्द / अक्षर / संख्या का चयन करें:



- A. Namibia नामीबिया
- B. Philippines फिलीपींस
- C. Chile चिली
- D. New Zealand न्यूजीलैंड


8

In the following questions, select the related word/letters/numbers from the given alternatives: निम्नलिखित प्रश्नों में, दिए गए विकल्पों से संबंधित शब्द / अक्षर / संख्या का चयन करें:

- A. Narendra Modi नरेंद्र मोदी
- B. John Mathai जॉन मथाई
- C. Lalu Prasad Yadav लालू प्रसाद यादव
- D. Mr. Lal Bahadur Shastri श्री लाल बहादुर शास्त्री

9


In the following questions, select the related word/letters/numbers from the given alternatives: निम्नलिखित प्रश्नों में, दिए गए विकल्पों से संबंधित शब्द / अक्षर / संख्या का चयन करें:



- A. P
- B. H
- C. I
- D. Y

10


In the following questions, select the related word/letters/numbers from the given alternatives: निम्नलिखित प्रश्नों में, दिए गए विकल्पों से संबंधित शब्द / अक्षर / संख्या का चयन करें:



- A. TB
- B. JA
- C. VV
- D. KQ

11


In the following questions, select the related word/letters/numbers from the given alternatives: निम्नलिखित प्रश्नों में, दिए गए विकल्पों से संबंधित शब्द / अक्षर / संख्या का चयन करें:



- A. 522
- B. 666
- C. 702
- D. 204

12

In the following questions, select the related word/letters/numbers from the given alternatives: निम्नलिखित प्रश्नों में, दिए गए विकल्पों से संबंधित शब्द / अक्षर / संख्या का चयन करें:



- A. 50
- B. 442
- C. 170
- D. 362

13

Arrange the given words in the sequence in which they occur in the dictionary.

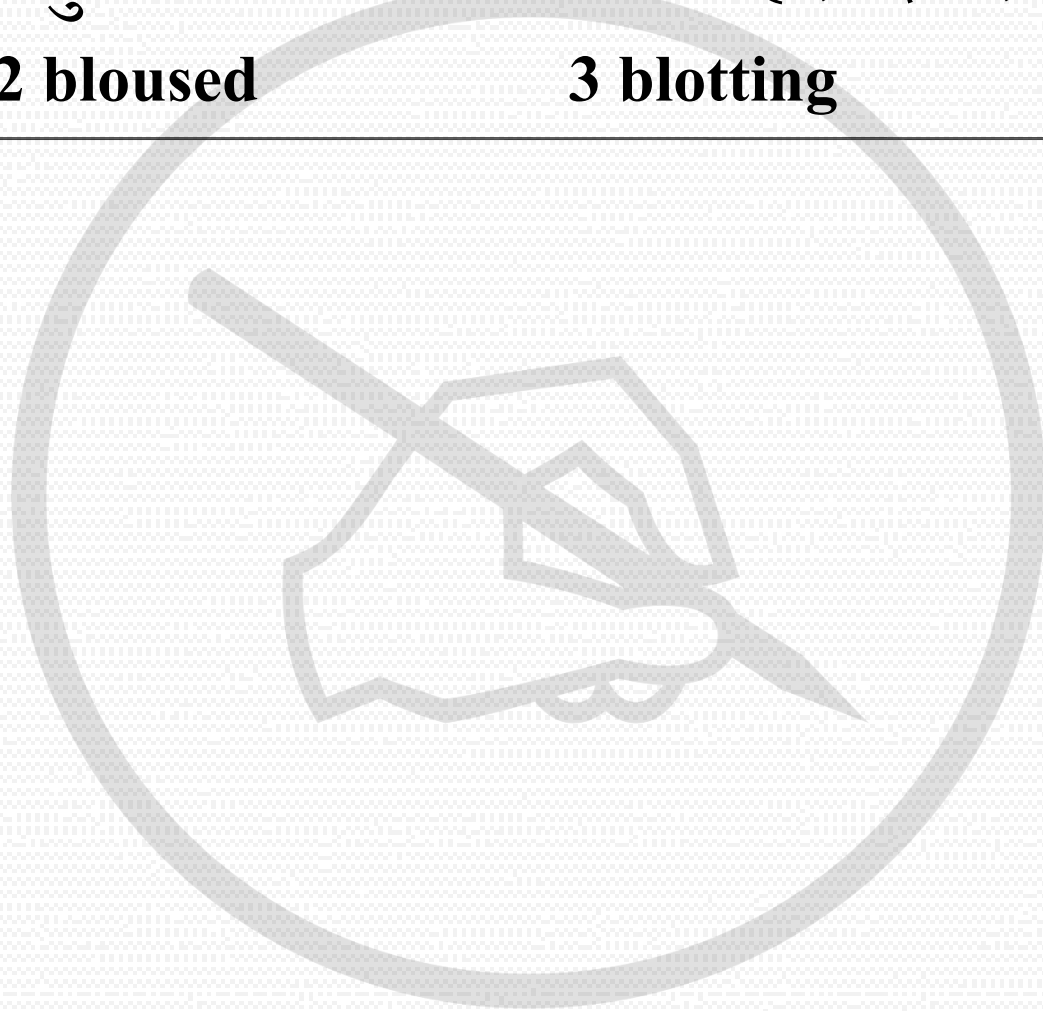
दिए गए शब्दों को इस अनुक्रम में व्यवस्थित करें जैसे वह शब्दकोश में होते हैं।

1 bloviate

2 bloused

3 blotting

4 blotchy



A. 3421

B. 3412

C. 4123

D. 4321

14

Arrange the given words in the sequence in which they occur in the dictionary.


दिए गए शब्दों को इस अनुक्रम में व्यवस्थित करें जैसे वह शब्दकोश में होते हैं।

1 Creche

2 Crème

3 Creepy

4 Crest



A. 2134

B. 1432


C. 1324

D. 1234

15

In the following questions, select the related word/letters/numbers from the given alternatives: निम्नलिखित प्रश्नों में, दिए गए विकल्पों से संबंधित शब्द / अक्षर / संख्या का चयन करें:

W, Q, K, E, ?



A. C

B. B


C. A

D. X

15

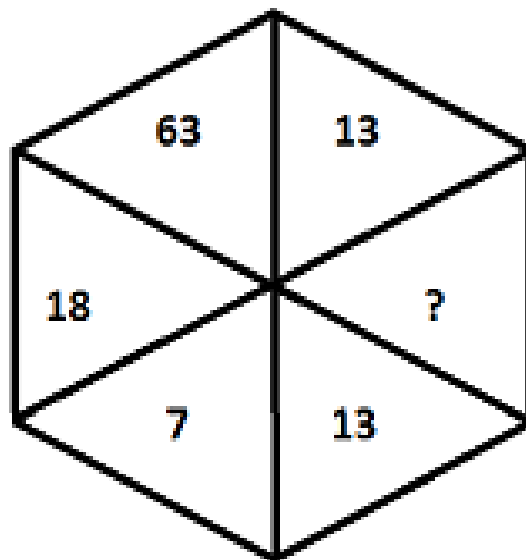
In the following questions, select the related word/letters/numbers from the given alternatives: निम्नलिखित प्रश्नों में, दिए गए विकल्पों से संबंधित शब्द / अक्षर / संख्या का चयन करें:

E, H, N, W, ?



- A. I
- B. G
- C. E
- D. None of these

16



A. 12

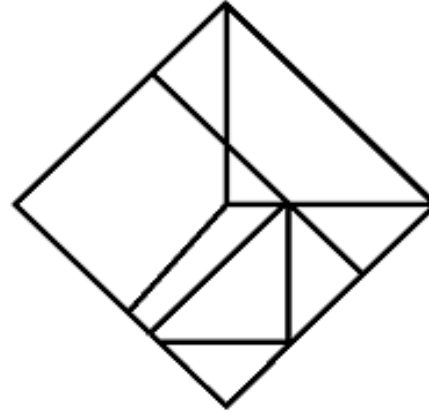
B. 8

C. 2

D. 6

16

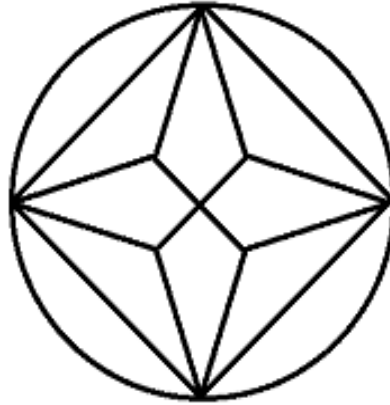
Find the number of triangles in the given figure. दिए गए चित्र में त्रिभुज की संख्या बताएं।



- A. 7
- B. 8
- C. 10
- D. None of these

17

Find the number of quadrilaterals in the given figure. दिए गए चित्र में चतुर्भुज की संख्या बताएं।



A. 12

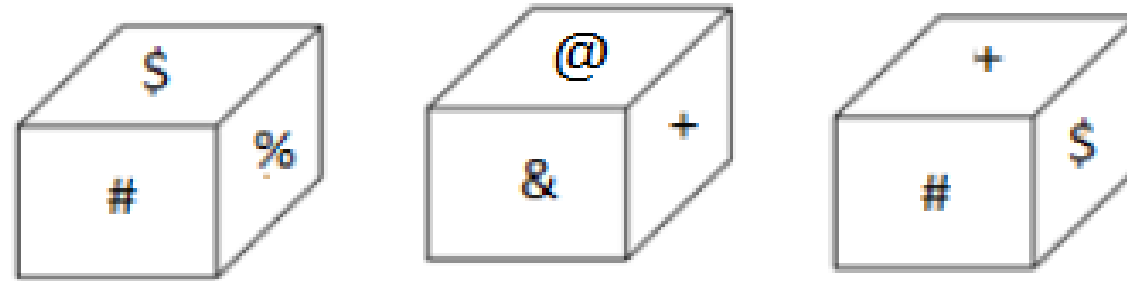
B. 8

C. 9

D. None of these

19

Three positions of a cube are shown below. What will come opposite to \$?
पासे की तीन स्थितियों को नीचे दिखाया गया है। \$ के विपरीत क्या होगा?

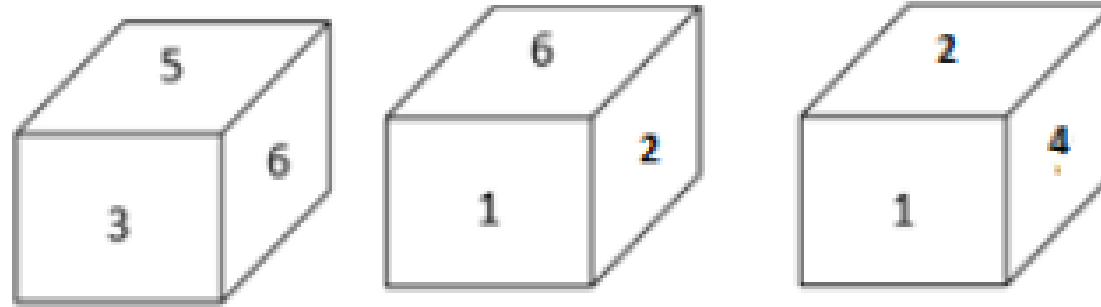


- A. %
- B. @
- C. &
- D. None of these

20

Three positions of a cube are shown below. What will come opposite to face containing 6?

पासे की तीन स्थितियों को नीचे दिखाया गया है। 6 वाले फलक के विपरीत क्या होगा?



- A. 3
- B. 5
- C. 4
- D. None of these

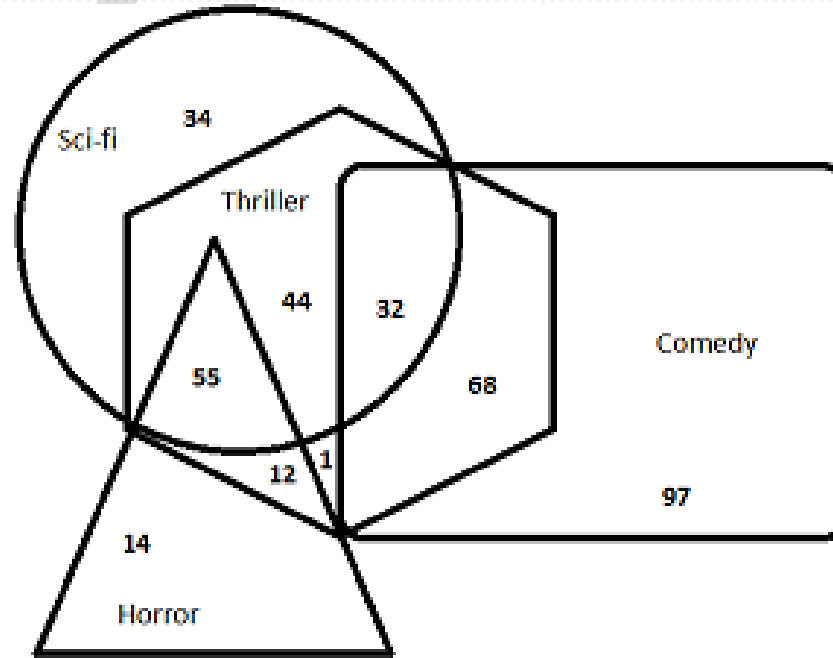
21

Following figure shows the number of people like different genres of movies.

Answer the questions based on it.

How many people like only Thriller genre movies?

कितने व्यक्ति केवल Thriller शैली फिल्मों को पसंद करते हैं?



A. 44

B. None

C. 12

D. None of these

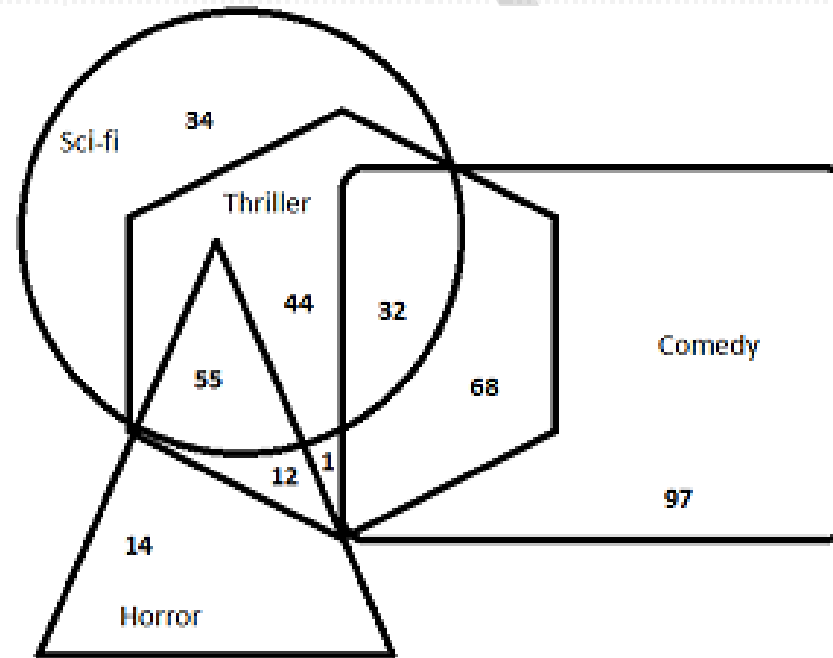
21

Following figure shows the number of people like different genres of movies.

Answer the questions based on it.

How many people like Horror and Thriller genres only?

कितने व्यक्ति केवल Horror and Thriller शैली फिल्मों को पसंद करते हैं?



A. 55

B. 67

C. 68

D. 12

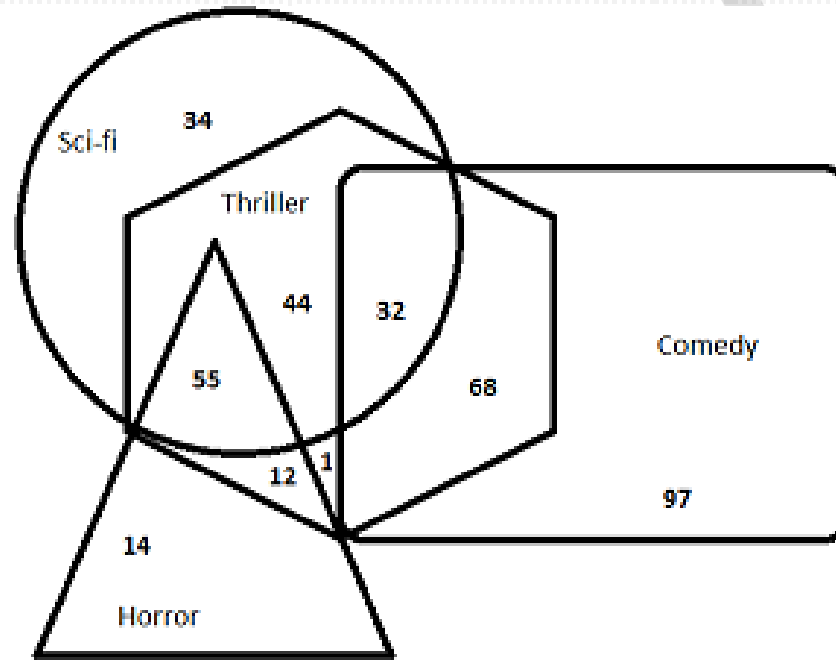
21

Following figure shows the number of people like different genres of movies.

Answer the questions based on it.

How many people like Comedy and Thriller genres both?

Comedy and Thriller दोनों शैली कितने व्यक्ति पसंद करते हैं?



A. 32

B. 68

C. 100

D. None of these

22

Seven friends A, B, C, D, E, F and G are standing in a football field. D is 14 m north of F and 18 m south of E. A is to the south-east of D and north-east of F. C is to the east of A. G is to the north-west of E. B is to the south of G and to the west of D. A is in which direction with respect to B? सात दोस्तों A, B, C, D, E, F और G फुटबॉल मैदान में खड़े हैं। D, F के 14 मीटर उत्तर में और E के 18 मीटर दक्षिण में है। A, D के दक्षिण-पूर्व में और F के उत्तर-पूर्व में है। C, A के पूर्व में है। G, E के उत्तर-पश्चिम में है। B, G के दक्षिण में और D के पश्चिम में है। A, B के किस दिशा में है?

- A. South – east
- B. North – west
- C. South – west
- D. North – east

23

Five friends P, Q, R, S and T have different number of pens. P has more number of pens than T and less number of pens than R. Q has less number of pens than S. T doesn't have the least number of pens. R doesn't have the highest number of pens. Who has the least number of pens?

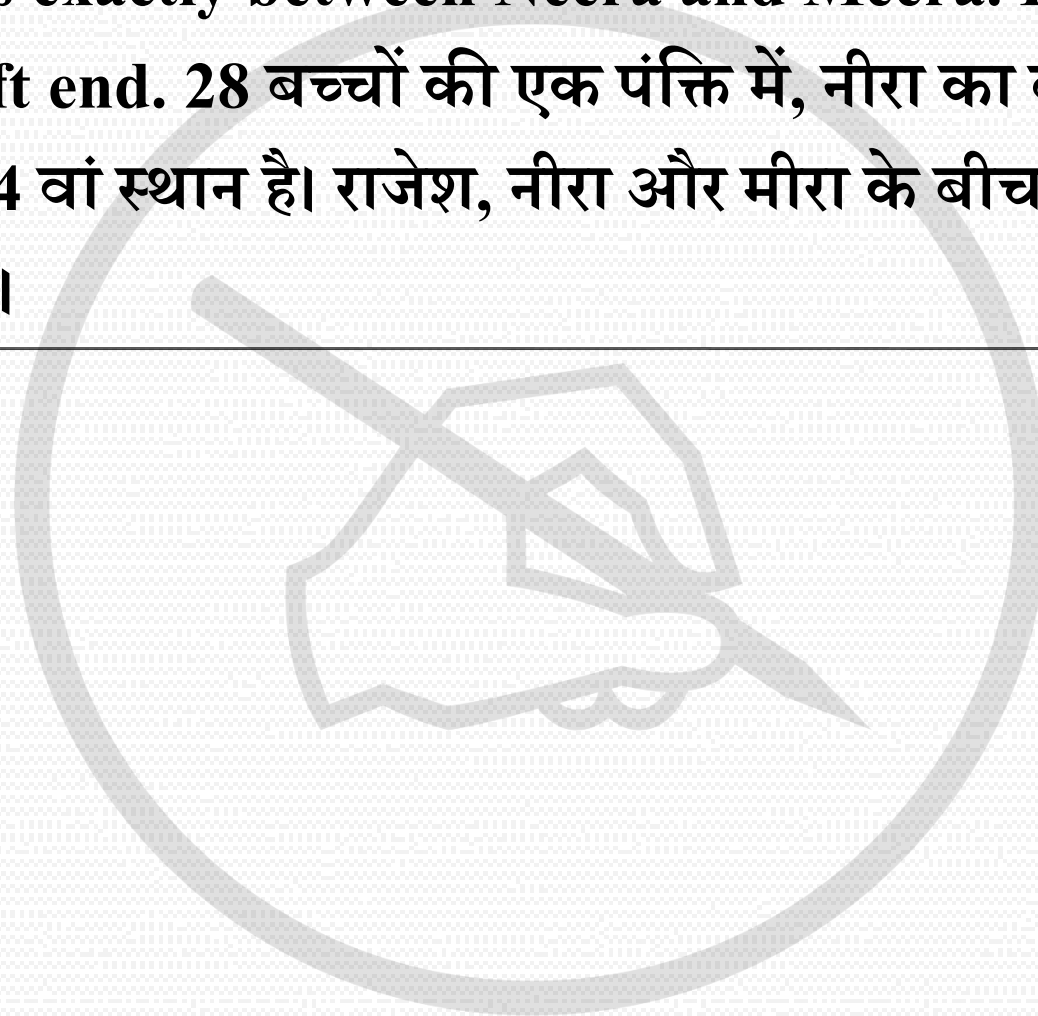
पांच दोस्तों P, Q, R, S और T के पास पेन की अलग-अलग संख्या है। P पर T की तुलना में अधिक संख्या में और R की तुलना में कम संख्या में पेन हैं। Q पर S की तुलना में कम संख्या में पेन हैं, T सबसे कम पेन नहीं रखता है। R पर सबसे अधिक संख्या में पेन नहीं हैं। कौन पर सबसे कम संख्या में पेन है?

- A. P
- B. S
- C. Q
- D. T

24

In a row of 28 children, Neera is 13th from the left end Meera is 24th from the right end. Rajesh is exactly between Neera and Meera. Find the position of Rajesh from the left end. 28 बच्चों की एक पंक्ति में, नीरा का बाएं छोर से 13 वां स्थान है। मीरा का दाएं छोर से 24 वां स्थान है। राजेश, नीरा और मीरा के बीच बिल्कुल में है। बाएं छोर से राजेश का स्थान बताएं।

- A. 7th
- B. 6th
- C. 9th
- D. 11th



25

In a certain code language:

“health is wealth” is written as “cp nq tr”,

“wealth gains money” is written as “nq dt ps”,

“money is necessary” is written as “ps tr st”.

Question 29 of 200 You did not attempt this Question.

What is the code for “necessary”?

A. cp

B. ps

C. dt

D. st

26

In a certain code language:

“health is wealth” is written as “cp nq tr”,

“wealth gains money” is written as “nq dt ps”,

“money is necessary” is written as “ps tr st”.

Question 30 of 200 You did not attempt this Question.

“tr” is the code for which of the following?

A. is

B. wealth


C. gains

D. health

27

If '-' means 'x', 'x' means '÷', '÷' means '+' and '+' means '-', then what will be the value of the following expression?

$$78 - 4 \times 6 \div 11 + 14 = ?$$



A. 35

B. 49


C. 63

D. 52

28

If '-' means 'x', 'x' means '÷', '÷' means '+' and '+' means '-', then what will be the value of the following expression?

$$112 \times 7 - 12 + 10 \div 48 = ?$$



A. 190

B. 230


C. 170

D. 210

29

$15 \# 11 \% 3 = 78; 18 \# 12 \% 5 = 150$

Then, $22 \# 10 \% 2 = ?$



A. 64

B. 72


C. 56

D. 58

30

$64 @ 8 @ 2 = 4; 78 @ 13 @ 3 = 2$

Then, $56 @ 7 @ 4 = ?$



A. 2

B. 3

C. 4

D. 5

31

From the given options, select the word which cannot be formed using the letters of the given word – '**CARDIOLOGIST**'.

दिए गए विकल्पों में से, उस शब्द का चयन करें जिसे दिए गए शब्द - '**CARDIOLOGIST**' के अक्षरों का उपयोग करके नहीं बनाया जा सकता है।



- A. IDOL
- B. LOGICAL
- C. LOST
- D. CARDS

32

From the given options, select the word which can be formed using the letters of the given word – ‘**ILLUSTRATIONS**’.


दिए गए विकल्पों में से, उस शब्द का चयन करें जिसे दिए गए शब्द - **ILLUSTRATIONS**’के अक्षरों का उपयोग करके बनाया जा सकता है।



- A. STATION
- B. STRAND
- C. LOSING
- D. STERLING

33


45, 451, 4061, 32493, 227441



- A. 451**
- B. 32493**
- C. 4061**
- D. 227441**

34

60, 40, 70, 230, 845



A. 230

B. 70

C. 845

D. 40

35

Statements:

Some orange are mango

No mango is banana

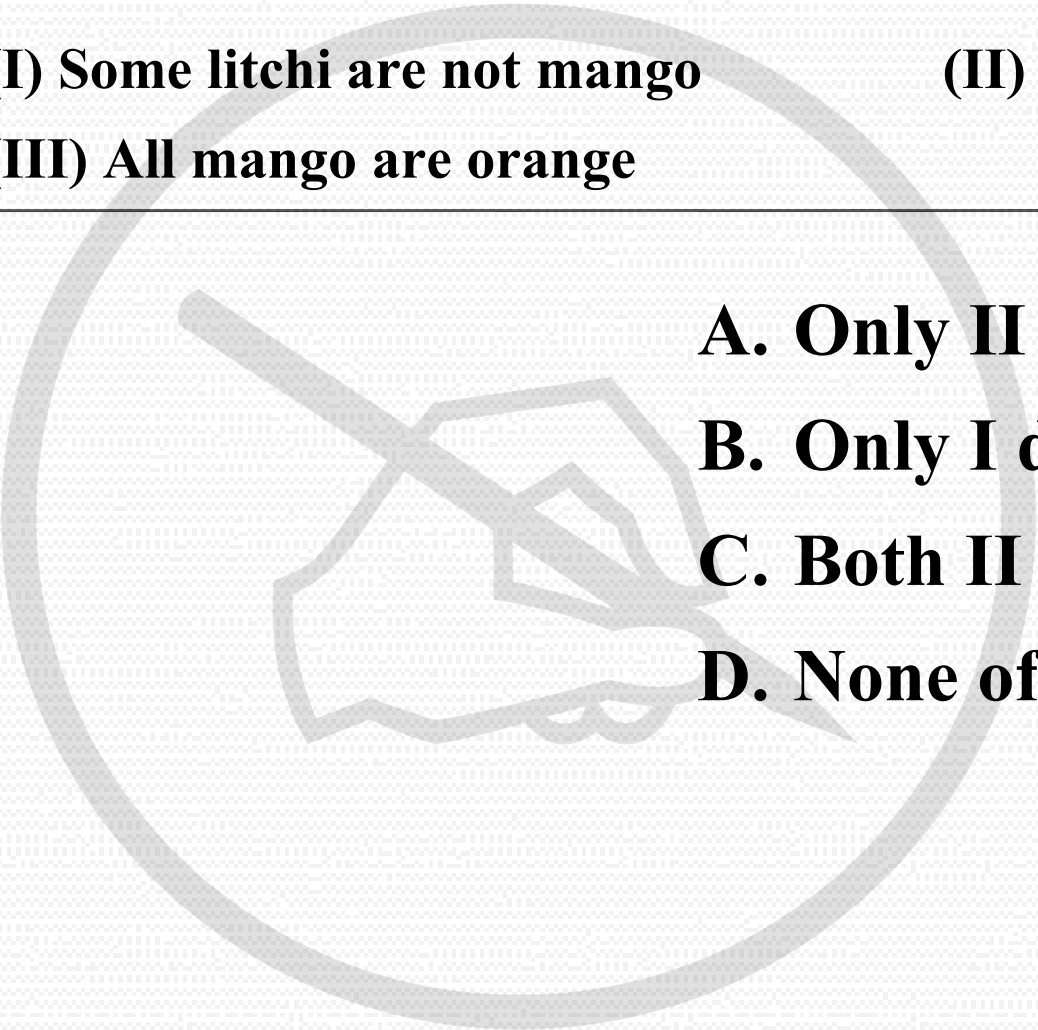
All banana are litchi

Conclusions:

(I) Some litchi are not mango

(II) Some mango are banana

(III) All mango are orange

- 
- A. Only II does not follow**
 - B. Only I does not follow**
 - C. Both II and III do not follow**
 - D. None of these**

36

Statements:

All chairs are tables

No table is bench

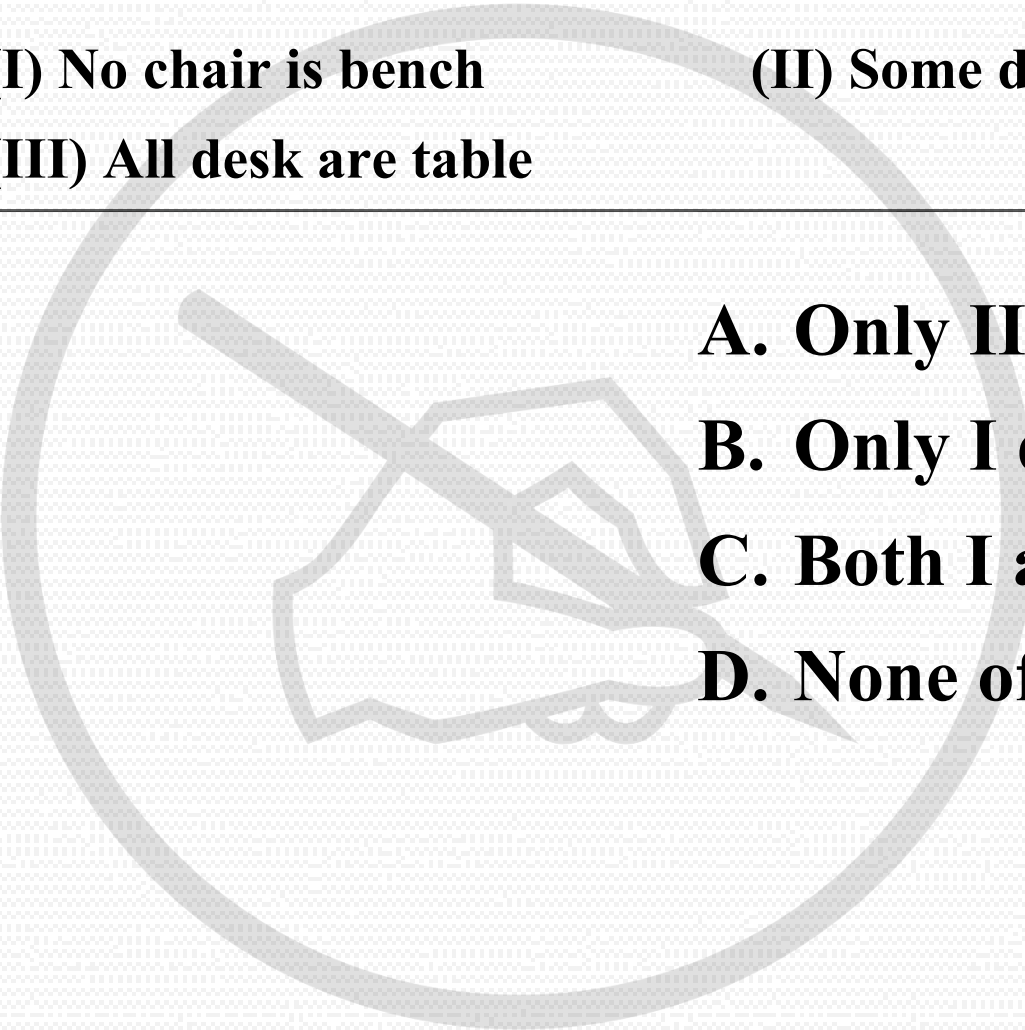
All bench are desk

Conclusions:

(I) No chair is bench

(II) Some desk are not table

(III) All desk are table

- 
- A. Only III does not follow**
 - B. Only I does not follow**
 - C. Both I and II do not follow**
 - D. None of these**

37

THIEF'

Matrix – I

	0	1	2	3	4
0	D	T	E	H	K
1	T	E	H	K	D
2	E	K	D	T	H
3	K	H	T	D	E
4	H	D	K	E	T

Matrix – II

	5	6	7	8	9
5	L	I	Y	N	F
6	I	Y	N	F	L
7	Y	F	L	I	N
8	F	N	I	L	Y
9	N	L	F	Y	I

- A. 44, 31, 20, 65, 59
 B. 32, 40, 56, 11, 85
 C. 10, 87, 12, 02, 68
 D. 23, 24, 34, 87, 68

38

‘HORSE’

Matrix – I

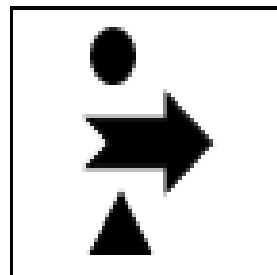
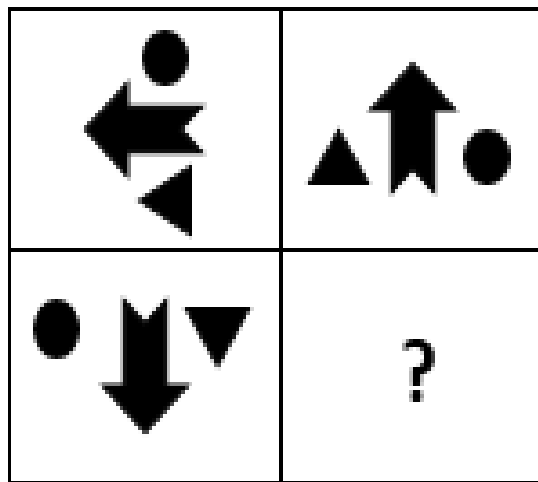
	0	1	2	3	4
0	C	O	L	S	R
1	O	L	S	R	C
2	L	R	C	O	S
3	R	S	O	C	L
4	S	C	R	L	O

Matrix – II

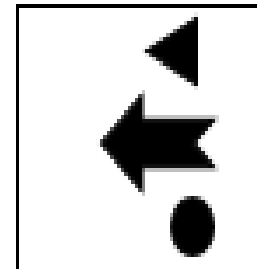
	0	1	2	3	4
0	C	O	L	S	R
1	O	L	S	R	C
2	L	R	C	O	S
3	R	S	O	C	L
4	S	C	R	L	O

- A. 96, 10, 30, 57, 40
B. 44, 77, 04, 03, 75
C. 77, 32, 21, 31, 66
D. 69, 10, 31, 21, 57

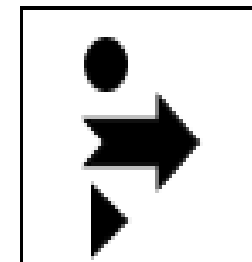
39



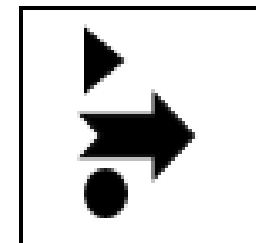
A



B

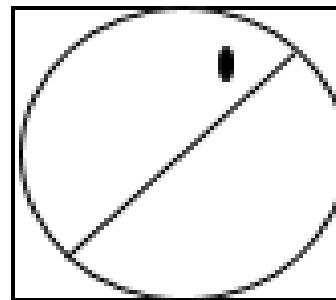
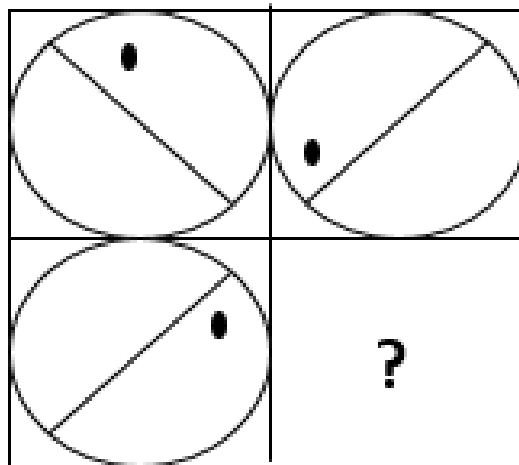


C

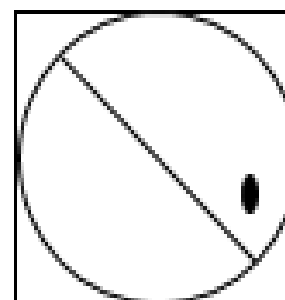


D

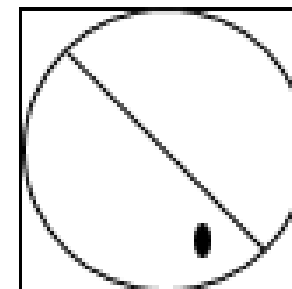
40



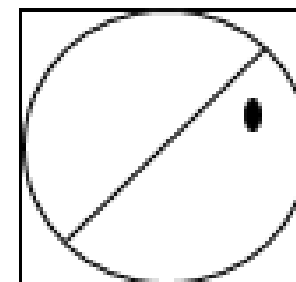
A



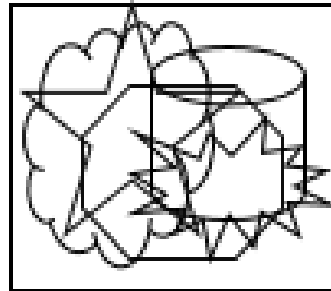

B



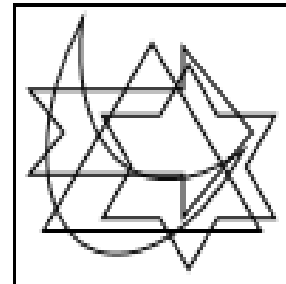
C




D



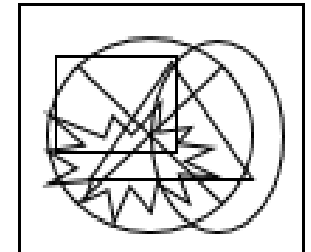
A



B

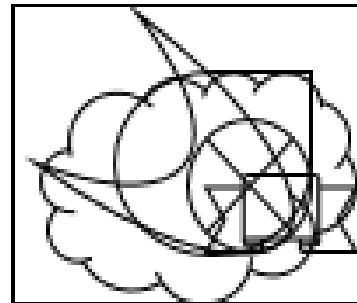
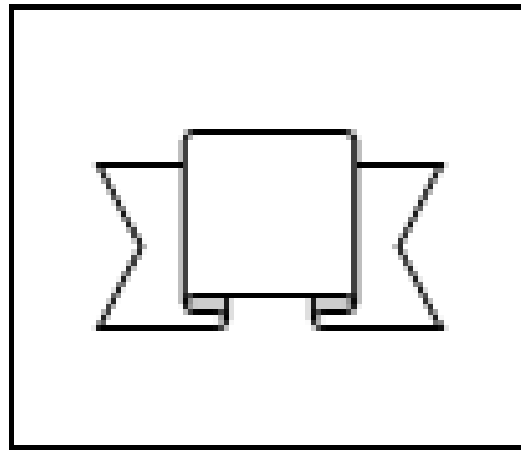


C

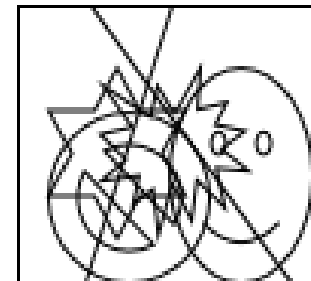


D


42



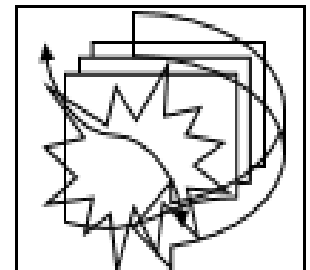
A



B

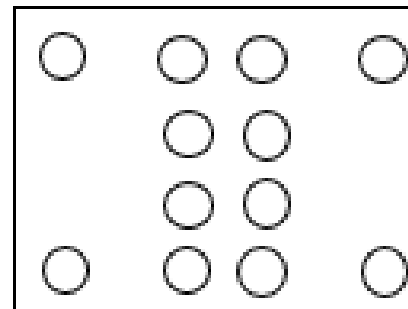
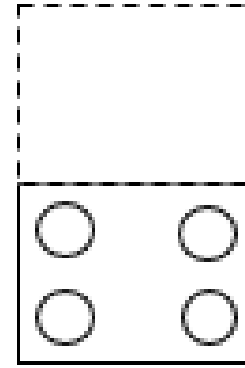
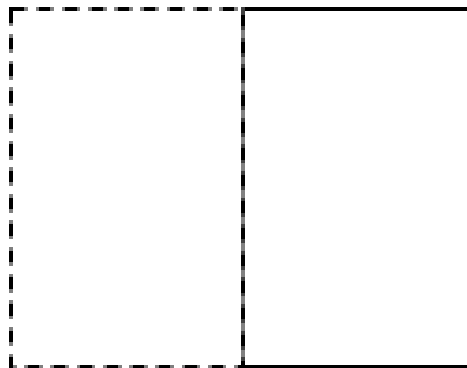



C

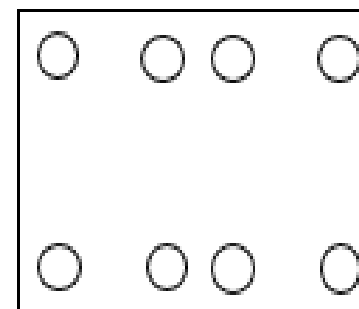


D

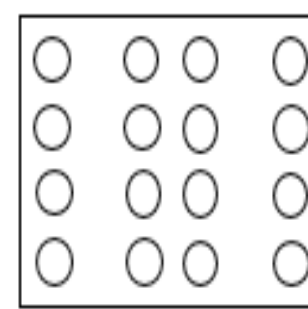
43



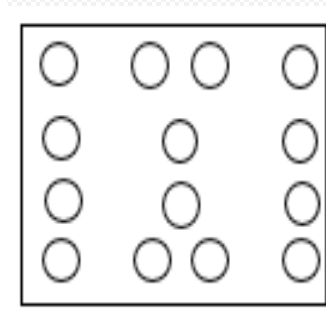
A



B

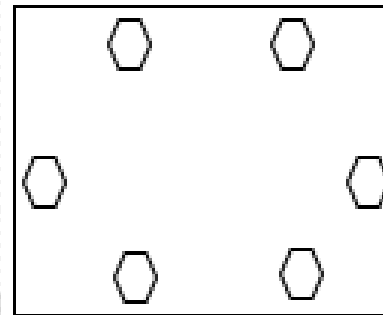
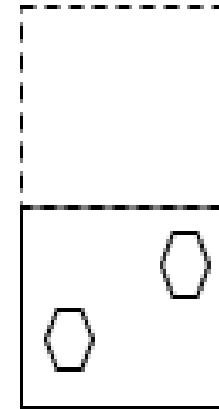
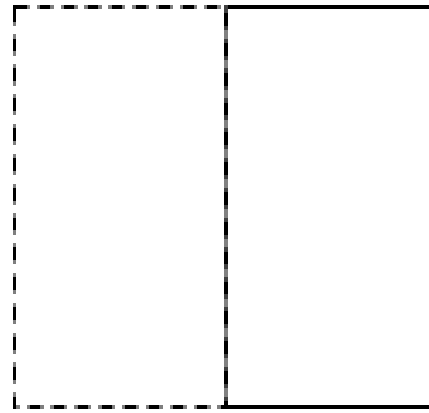



C

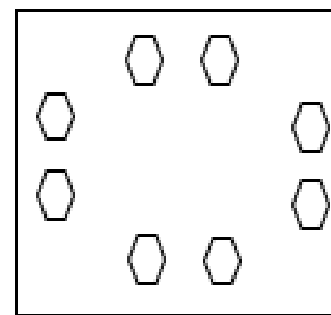


D

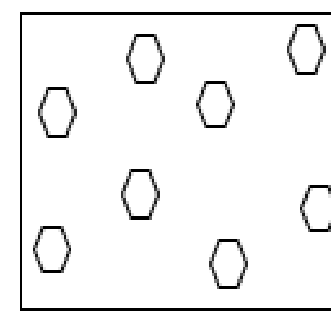
44



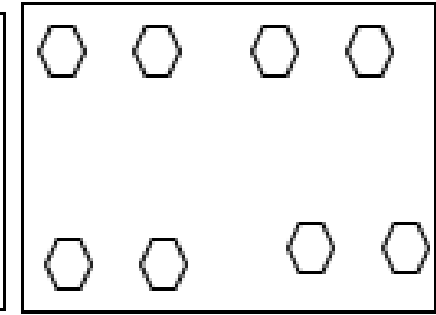
A



B




C



D


45




A
B



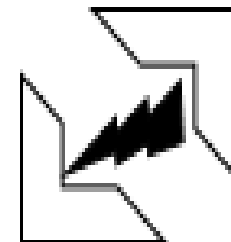
A



B



C



D

Facing Problem in Any Particular Topic?

Acquire Command With Our Topic Wise Live Classes.

Reasoning

LIVE CLASS **REASONING**
PUZZLE & SITTING ARRANGEMENT
200 QUESTIONS



8:00 AM

Offer Price
₹499/-

Maths

LIVE CLASS **MATHS**
ZERO TO HERO
IN SIMPLIFICATION & APPROXIMATION



9:00 AM

Offer Price
₹499/-

GA

LIVE CLASS **GA**
CURRENT AFFAIRS (MCQ)
+ STATIC FOR ALL EXAM



10:00 AM

Offer Price
₹499/-

English

LIVE CLASS **ENGLISH**
TOP 20 CLOZE TEST & REARRANGEMENT
FOR ALL BANKING EXAMS



11:00 AM

Offer Price
₹499/-

GS

LIVE CLASS **GS**
RAILWAY NTPC GK



12:00 PM

Offer Price
₹499/-



Visit

myshop.mahendras.org



ENSURE YOUR SUCCESS WITH- **VIDEO GURU**



A COMPLETE VIDEO CLASS
FOR YOUR PREPARATION

Subscribe
BUTTON



BOOST YOUR PREPARATIONS WITH MAHENDRAS: STUDY MATERIAL, E-MICA, E-NEWS, BAGS & MUCH MORE. VISIT NOW: myshop.mahendras.org