



तैयारी वरदो पाने की

15 दिन की दौड़

CRASH  
COURSE

MIRROR & WATER IMAGE

REASONING

दौड़ - 7

शाम 5 बजे

Mahendra's

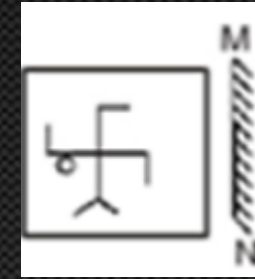
LIKE US ON FACEBOOK  /Emahendras

JOIN MAHENDRAS !!! BEST CHOICE TO OPT FOR THE PREPARATION OF BANK, S

1

If a mirror is placed on the line MN, then which of the answer figures is the right image of the given figure?

यदि रेखा MN पर एक दर्पण रखा जाए, तो निम्नलिखित में से कौन सा उत्तर चित्र प्रश्नचित्र कि सही छवि होगी?



(a)



(b)



(c)



(d)



2

If a mirror is placed on the line MN, then which of the answer figures is the right image of the given figure?

यदि रेखा MN पर एक दर्पण रखा जाए, तो निम्नलिखित में से कौन सा उत्तर चित्र प्रश्नचित्र कि सही छवि होगी?



(a)



(b)



(c)



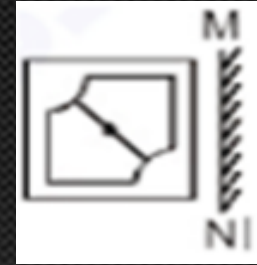
(d)



3

If a mirror is placed on the line MN, then which of the answer figures is the right image of the given figure?

यदि रेखा MN पर एक दर्पण रखा जाए, तो निम्नलिखित में से कौन सा उत्तर चित्र प्रश्नचित्र कि सही छवि होगी?



(a)



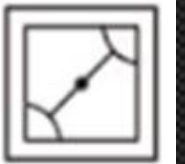
(b)



(c)



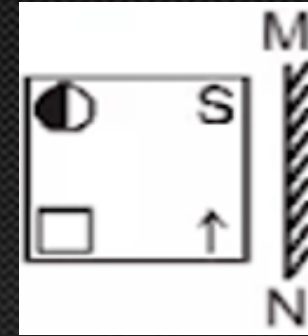
(d)



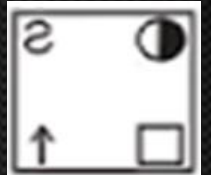
4

If a mirror is placed on the line MN, then which of the answer figures is the right image of the given figure?

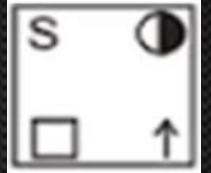
यदि रेखा MN पर एक दर्पण रखा जाए, तो निम्नलिखित में से कौन सा उत्तर चित्र प्रश्नचित्र कि सही छवि होगी?



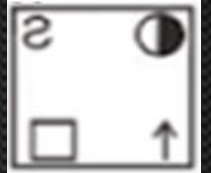
(a)



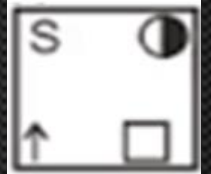
(b)



(c)



(d)



5

In each of the following questions, choose the correct mirror image from alternatives (A), (B), (C) and (D) of the figure (X).



(X)



(a)



(b)



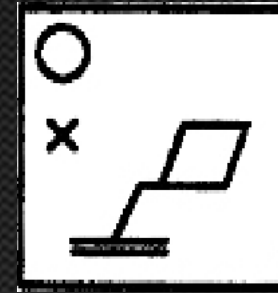
(c)



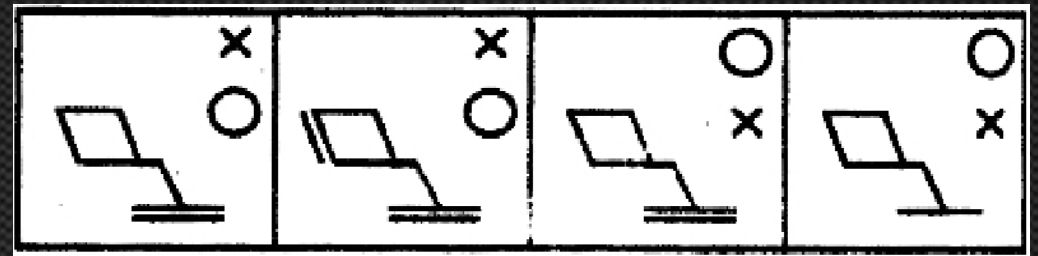
(d)

6

In each of the following questions, choose the correct mirror image from alternatives (A), (B), (C) and (D) of the figure (X).



(X)



(a)

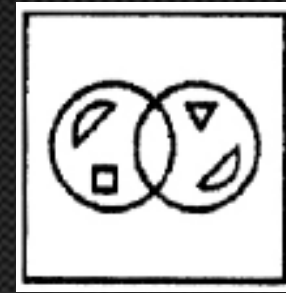
(b)

(c)

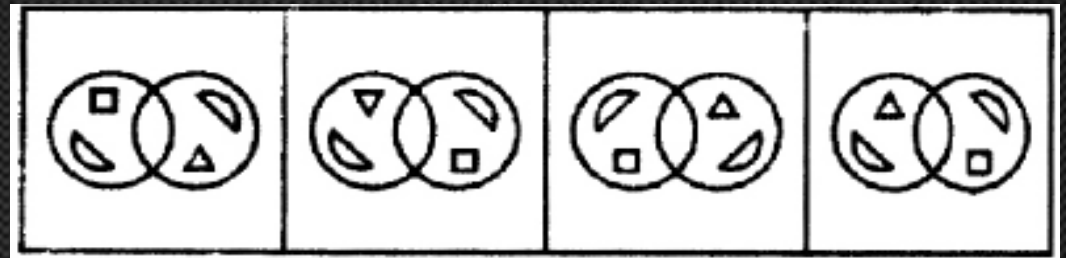
(d)

7

In each of the following questions, choose the correct mirror image from alternatives (A), (B), (C) and (D) of the figure (X).



(X)



(a)

(b)

(c)

(d)

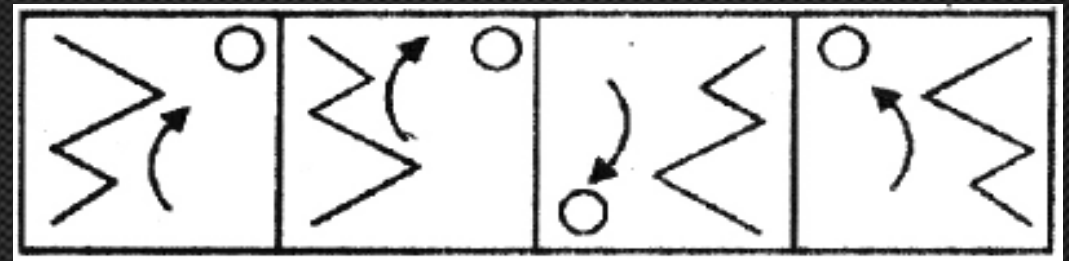


8

In each of the following questions, choose the correct mirror image from alternatives (A), (B), (C) and (D) of the figure (X).



(X)



(a)

(b)

(c)

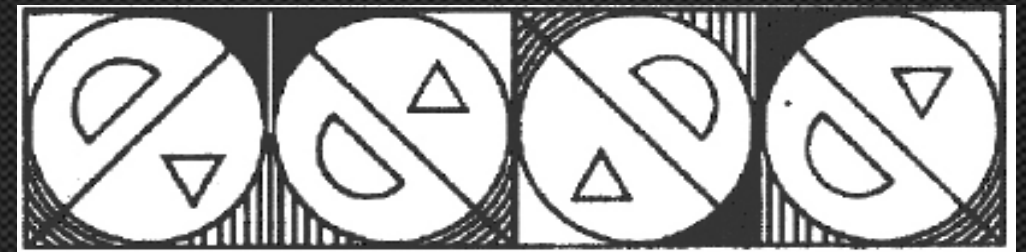
(d)

9

In each of the following questions, choose the correct mirror image from alternatives (A), (B), (C) and (D) of the figure (X).



(X)



(a)

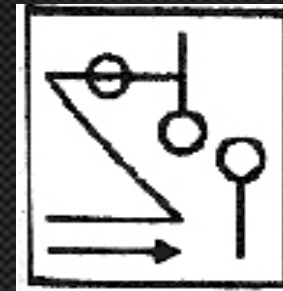
(b)

(c)

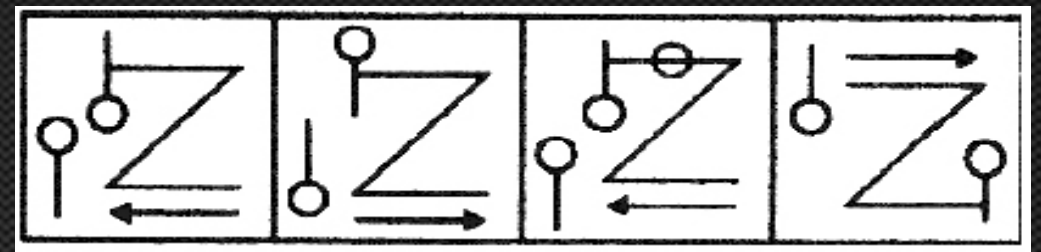
(d)

10

In each of the following questions, choose the correct mirror image from alternatives (A), (B), (C) and (D) of the figure (X).



(X)



(a)

(b)

(c)

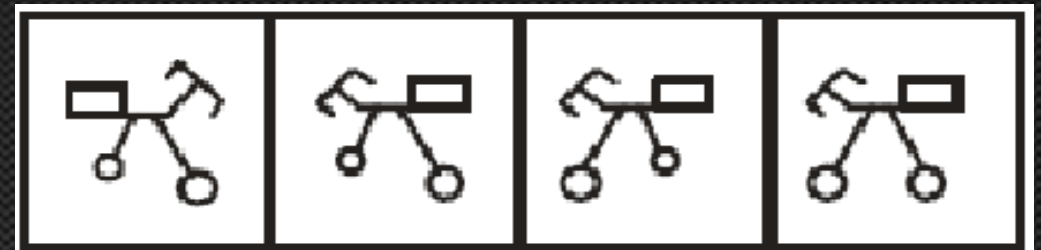
(d)

11

In each of the following questions, choose the correct mirror image from alternatives (A), (B), (C) and (D) of the figure (X).



(X)



(a)

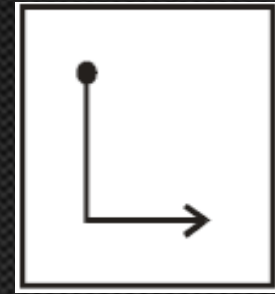
(b)

(c)

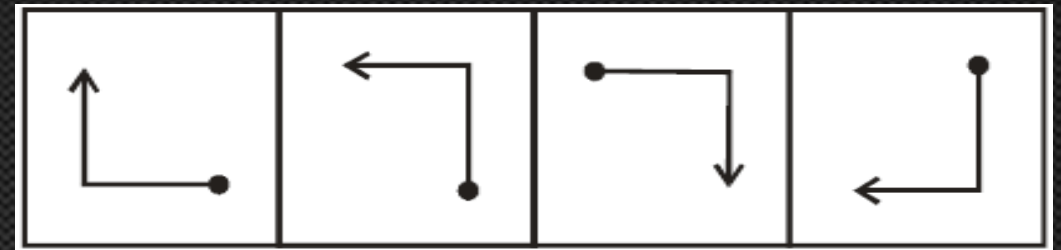
(d)

12

In each of the following questions, choose the correct mirror image from alternatives (A), (B), (C) and (D) of the figure (X).



(X)



(a)

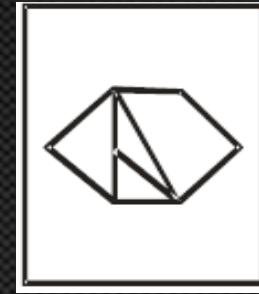
(b)

(c)

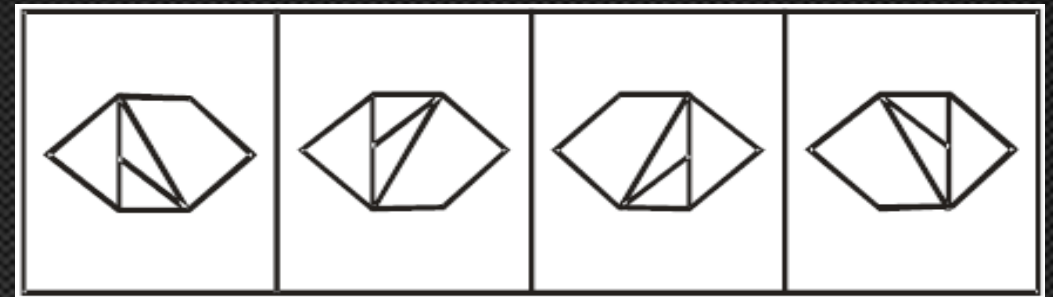
(d)

13

In each of the following questions, choose the correct water image of the figure (X) from the given four alternatives (A), (B), (C) and (D).



(X)



(a)

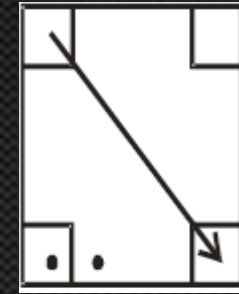
(b)

(c)

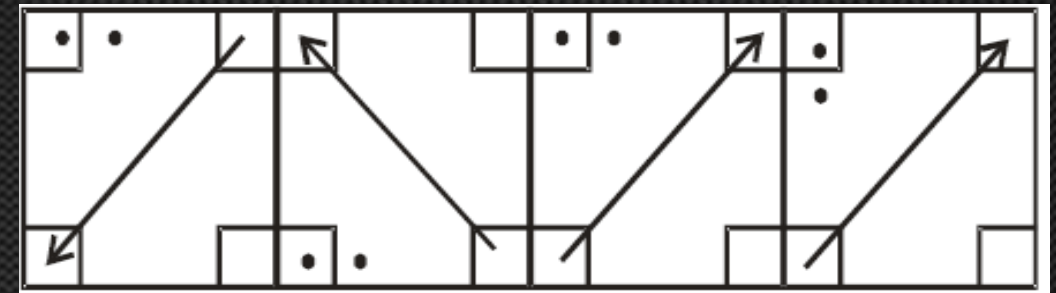
(d)

14

In each of the following questions, choose the correct water image of the figure (X) from the given four alternatives (A), (B), (C) and (D).



(X)



(a)

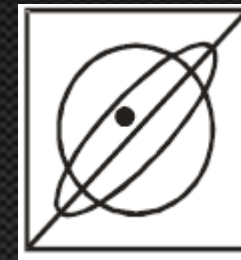
(b)

(c)

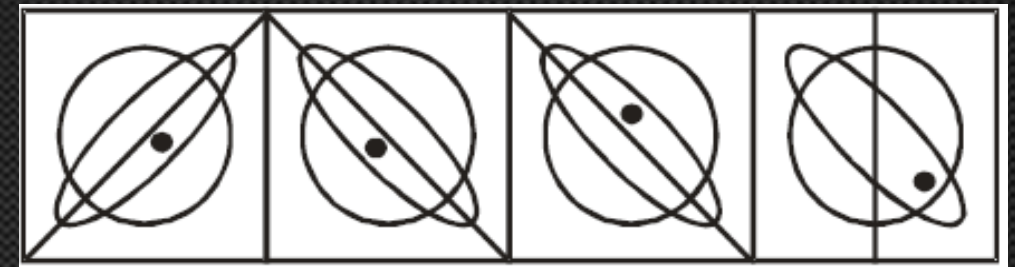
(d)

15

In each of the following questions, choose the correct water image of the figure (X) from the given four alternatives (A), (B), (C) and (D).



(X)



(a)

(b)

(c)

(d)



16

In each of the following questions, choose the correct water image of the figure (X) from the given four alternatives (A), (B), (C) and (D).



(X)



(a)

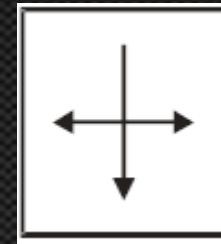
(b)

(c)

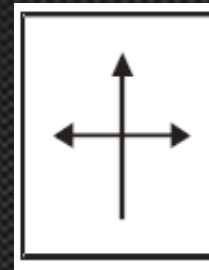
(d)

17

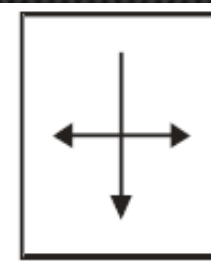
In each of the following questions, choose the correct water image of the figure (X) from the given four alternatives (A), (B), (C) and (D).



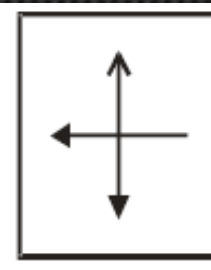
(X)



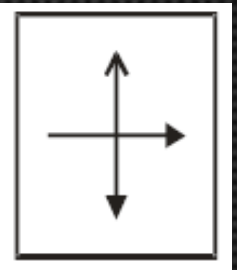
(a)



(b)



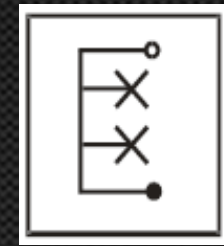
(c)



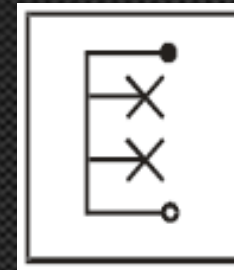
(d)

18

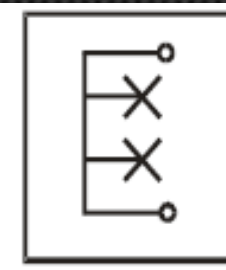
In each of the following questions, choose the correct water image of the figure (X) from the given four alternatives (A), (B), (C) and (D).



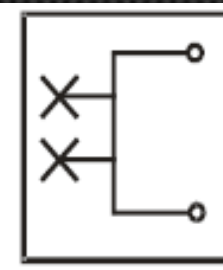
(X)



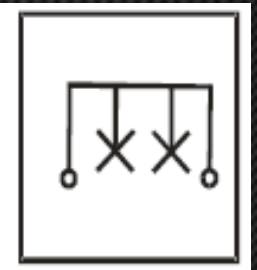
(a)



(b)



(c)



(d)

  
**Comment**

  
**Share**

**Subscribe**



  
**Like**

 *Mahendras*

**LIKE US ON FACEBOOK**  /Emahendras

**JOIN MAHENDRAS !!! BEST CHOICE TO OPT FOR THE PREPARATION OF BANK, S**