

ALL IN ONE

REASONING



5:00 PM

FIGURE COUNTING

जाने **TRIANGLE** में **TRIANGLE** कितने **TRIANGLE**

अबकी बार सारे **EXAM** पर

 Mahendras

LIKE US ON FACEBOOK  /Emahendras

JOIN MAHENDRAS !!! BEST CHOICE TO OPT FOR THE PREPARATION OF BANK, S



STUDY FROM HOME

Mahendra's
**VIDEO
COURSES**

ALL IN ONE 2019

BANK



~~₹15000~~

₹7500

SSC



~~₹15000~~

₹7500

RAILWAY



~~₹10000~~

₹3999

SSC CHSL



COMING ON

WEDNESDAY

13 MARCH 2019



VIDEOBOX
LEARNING RELOADED

SPEED TEST
VIDEO SOLUTION

BUY FROM

myshop.mahendras.org

TOLL FREE

1800 103 5225 (9 am to 6 pm)

Mahendra's

LIKE US ON FACEBOOK  /Emahendras

JOIN MAHENDRAS !!! BEST CHOICE TO OPT FOR THE PREPARATION OF BANK, SSC, RAILWAY, CHSL, CGL, CLERK, JUDGE, POLICE, AND OTHER GOVT. EXAMS.

1

How many triangles are there ?



a) 2

b) 4


c) 5

d) 3



2

How many triangles are there ?



a) 21

b) 41

c) 25

d) 33

3

How many triangles are there ?



a) 21


b) 42

c) 12

d) 33

4

How many triangles are there ?



a) 72


b) 84

c) 65

d) 83

5

How many triangles are there ?



a) 28

b) 48

c) 58

d) 38

6

How many triangles are there ?



a) 37

b) 48

c) 51

d) 36

7

How many triangles are there ?



a) 21


b) 41

c) 25

d) 33

8

How many triangles are there ?



a) 10

b) 11

c) 5

d) 7

9

How many triangles are there ?



a) 8

b) 6

c) 15

d) 10

10

How many triangles are there ?



a) 21

b) 41

c) 35

d) 33

11

How many triangles are there ?



a) 3


b) 4

c) 5

d) 8

12

How many triangles are there ?



a) 17


b) 11

c) 13

d) 19

13

How many triangles are there ?



→ a) 21


b) 11

c) 17

d) 19

14

How many triangles are there ?



a) 2


b) 4

c) 5

d) 3

15

How many triangles are there ?



→ a) 12

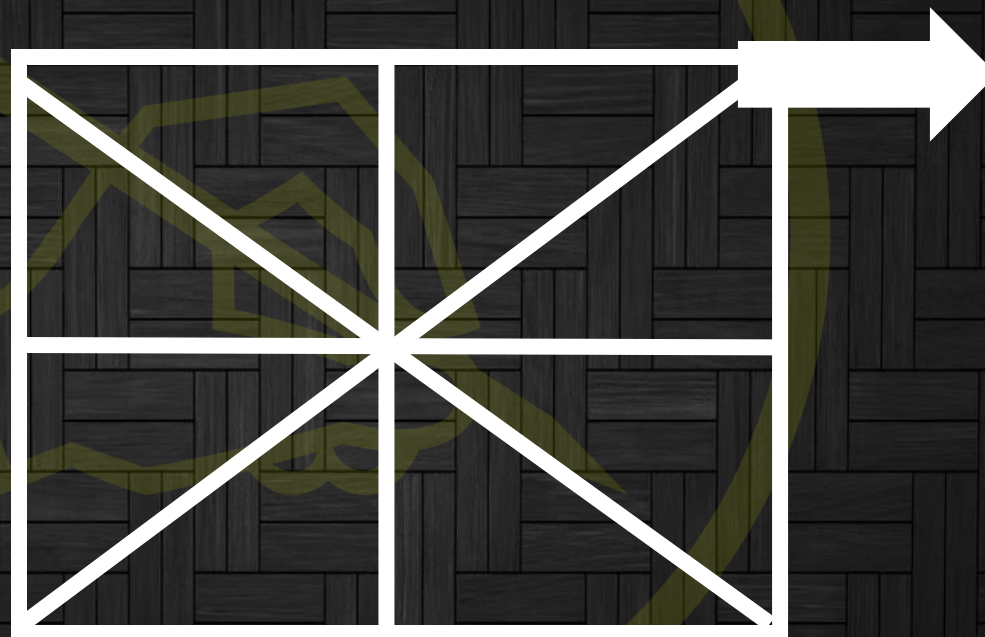
b) 14

c) 15

d) 18

16

How many triangles are there ?



a) 16


b) 11

c) 12

d) 18

17

How many triangles are there ?



a) 18

b) 19

c) 21

d) 23

18

How many triangles are there ?



a) 38

b) 26


c) 18

d) 28



19

How many triangles are there ?



a) 31


b) 26

c) 25

→ d) 29

20

How many triangles are there ?



a) 40


b) 46

c) 44

d) 32

21

How many triangles are there ?



a) 21

b) 41

→ c) 19

d) 33

22

How many triangles are there ?



→ a) 13

b) 15

c) 9

d) 11

$$\frac{n(n+2)(2n+1)}{8}$$

23

How many triangles are there ?



a) 27

b) 22

c) 25


d) 21

$$\frac{n(n+2)(2n+1)}{8}$$

8

24

How many triangles are there ?



a) 8

b) 4

c) 5

d) 10

NON-STOP/MARATHON CLASS



SSC CPO 2019

11 MAR 2019 FROM 9:00 AM

ENGLISH

MATHS

REASONING

GENERAL STUDIES

अब होगी तैयारी जीत की



 Mahendras

LIKE US ON FACEBOOK



/Emahendras

JOIN MAHENDRAS !!! BEST CHOICE TO OPT FOR THE PREPARATION OF BANK, S


Comment


Share


Like

Subscribe
