



Mahendra's



यूपी पुलिस एसआई परीक्षा 2021

India's latitude & longitude MCQ



सामान्य ज्ञान

• **LIVE**

01:30 PM





Mahendra's presents **150 का दम**

Don't let your practice get impacted during lockdown!!

Stay home and make your preparation perfect through **Special Lockdown Speed Test Package**

SPEED TEST PACKAGE (150 Tests)

: FEATURES :

SBI CLERK PRE
(20 TESTS) 

IBPS PO PRE
(15 TESTS) 

SSC CGL PRE
(15 TESTS) 

SBI CLERK MAINS
(20 TESTS) 

IBPS PO MAINS
(5 TESTS) 

SSC CGL MAINS
(5 TESTS) 

SBI PO PRE
(15 TESTS) 

IBPS CLERK PRE
(15 TESTS) 

SSC CHSL PRE
(15 TESTS) 

SBI PO MAINS
(5 TESTS) 

IBPS CLERK MAINS
(5 TESTS) 

RAILWAYS GD
(10 TESTS) 

SSC STENOGRAPHER
(5 TESTS) 

- **SCORE CARD WITH NEGATIVE MARKS**
- **COMPARISON WITH TOPPER**
- **REAL EXAM FEEL**
- **DETAILED EXPLANATION**
- **BASED ON LATEST PATTERN**




Visit: mahendras.org (Store)

Toll Free : 1800-103-5225



India is located latitudinally in the Northern Hemisphere and longitudinally in the Eastern Hemisphere. It extends from $8^{\circ}4'$ north and $37^{\circ}6'$ North in length (latitudes). And between $68^{\circ}7'$ East and $97^{\circ}25'$ East in width (longitudes).







Earth is slightly flattened at the _____.

पृथ्वी _____ पर थोड़ी चपटी है।

[A] North Pole

[B] South Pole

[C] North and the South Poles

[D] Middle



Imaginary line running on the globe divides it into two equal parts. Line is known as the

_____.

ग्लोब पर चलने वाली काल्पनिक रेखा इसे दो समान भागों में विभाजित करती है। रेखा को _____ के रूप में जाना जाता है।

[A] None of these

[B] Pole

[C] Equator

[D] Axis



Latitudes are measured in _____.
अक्षांश _____ में मापा जाता है।

- [A] Fahrenheit
- [B] Degrees
- [C] Radian
- [D] Km



Tropic of Cancer is situated _____ in the Northern Hemisphere.

कर्क रेखा उत्तरी गोलार्ध में _____ स्थित है।

[A] $23\frac{1}{2}^{\circ}$ N

[B] $66\frac{1}{2}^{\circ}$ S

[C] $23\frac{1}{2}^{\circ}$ S

[D] $66\frac{1}{2}^{\circ}$ N



_____ is situated at $66\frac{1}{2}^{\circ}$ south of the equator.

_____ भूमध्य रेखा के $66\frac{1}{2}^{\circ}$ दक्षिण में स्थित है।

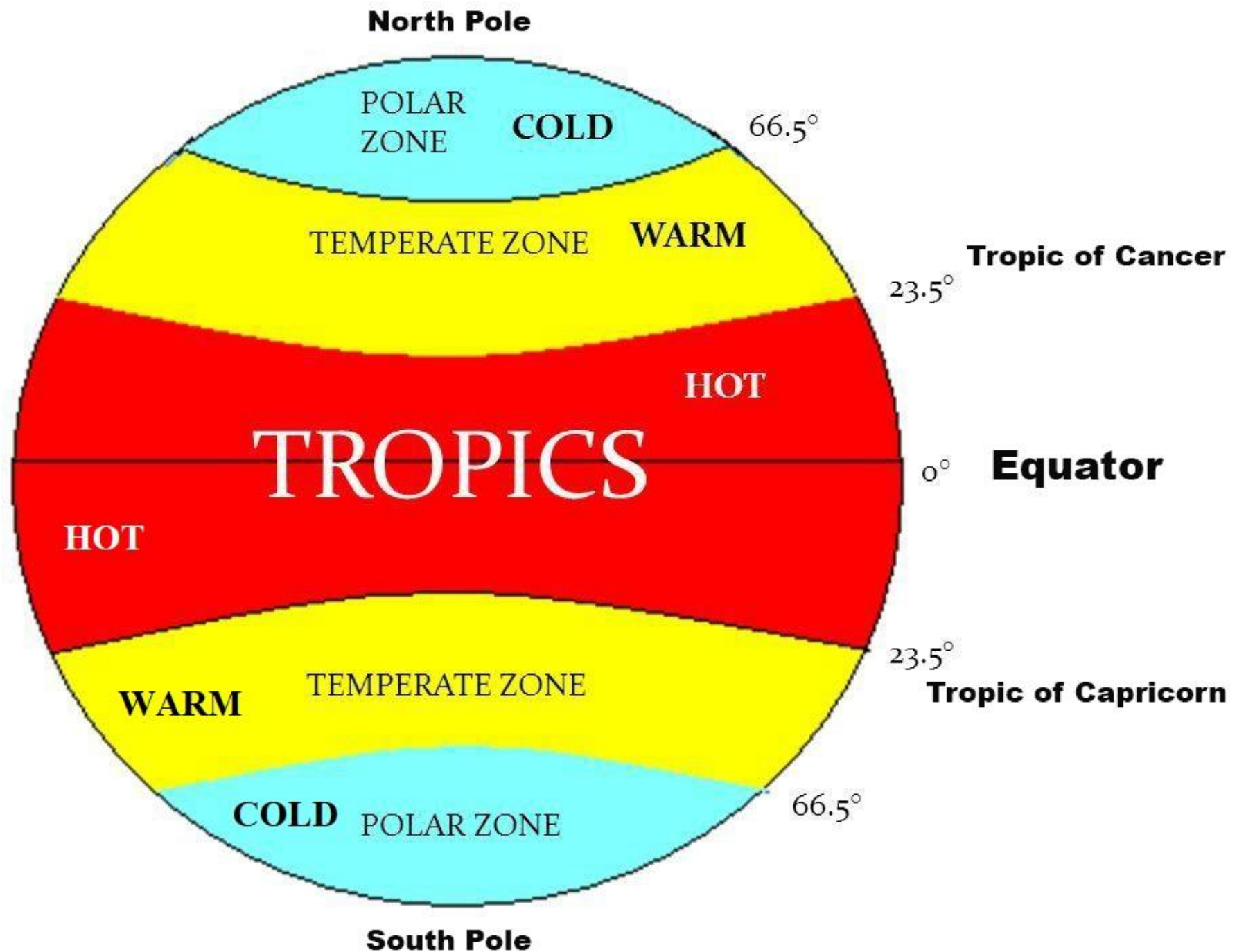
- [A] Arctic Circle
- [B] Tropic of Cancer
- [C] Tropic of Capricorn
- [D] Antarctic Circle



The mid-day sun is exactly overhead at least once a year on all latitudes in between the Tropic of Cancer and the Tropic of Capricorn this area is called as _____.

कर्क रेखा और मकर रेखा के बीच के सभी अक्षांशों पर वर्ष में कम से कम एक बार मध्य-दिन का सूरज एक बार उग आता है, इस क्षेत्र को _____ कहा जाता है।

- [A] Torrid Zone
- [B] Temperate Zones
- [C] Frigid Zones
- [D] None of these





The value of the prime meridian is _____ degree.

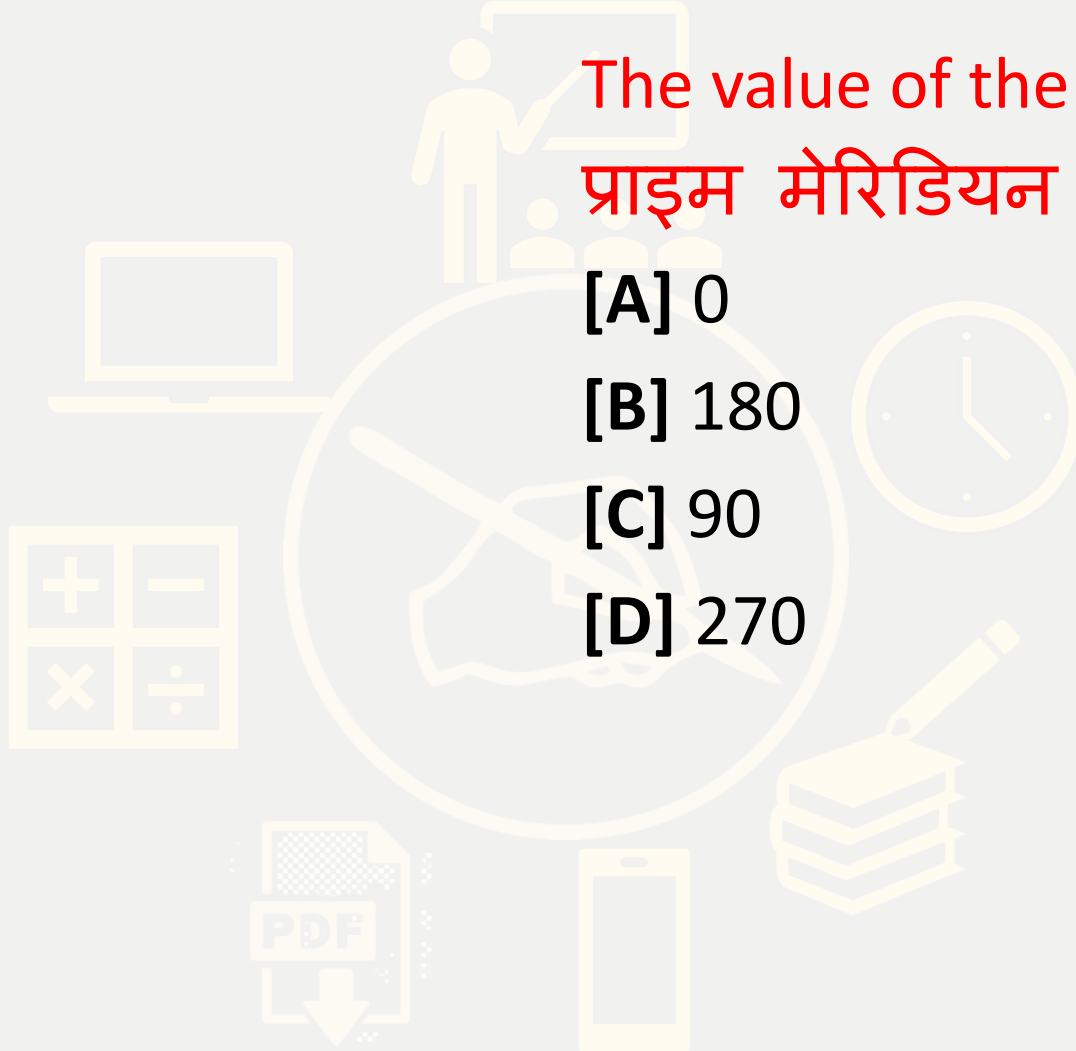
प्राइम मेरिडियन का मान _____ डिग्री है।

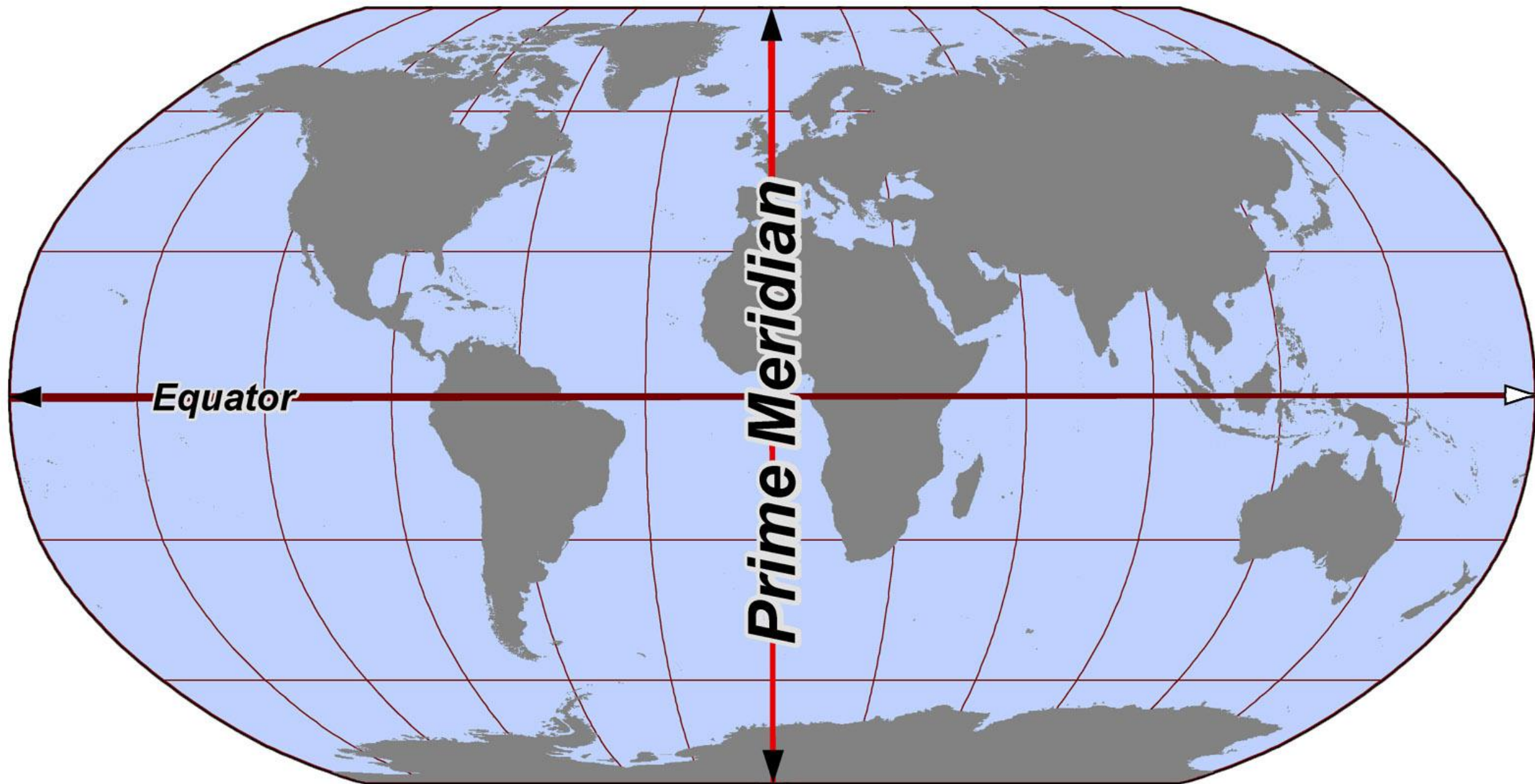
[A] 0

[B] 180

[C] 90

[D] 270







- Every country calculates its Standard meridian as the angular distance from the Greenwich meridian. If it is 12 noon at GMT what is the time on Indian Standard Time?
- हर देश अपने मानक मेरिडियन की गणना ग्रीनविच मेरिडियन से कोणीय दूरी के रूप में करता है। यदि यह GMT में दोपहर 12 बजे है तो भारतीय मानक समय क्या है?

- a) 5:30 P.M
- b) 5:00 P.M
- c) 5:20 P.M
- d) 5:30 A.M

Calculation of Time and Longitude





Mahendra's

FOR MORE DISCOUNT VISIT www.mahendras.org & USE PROMO CODE : **E13830**

UPCOMING ONLINE BATCHES MAY 2021

 1800-103-5225

05 May 2021

08:00 AM to 10:00 AM

**LIVE PREMIUM
SILVER CARD**
(CGL & CHSL)

03:00 PM to 05:00 PM

**LIVE PREMIUM
GREEN CARD**
(IBPS PO & CLERK)

BILINGUAL

12 May 2021

01:00 PM to 03:00 PM

**LIVE PREMIUM
SILVER CARD**
(CGL & CHSL)

05:30 PM to 07:30 PM

**LIVE PREMIUM
GREEN CARD**
(IBPS PO & CLERK)

BILINGUAL

19 May 2021

10:30 AM to 12:30 PM

**LIVE PREMIUM
SILVER CARD**
(CGL & CHSL)

01:00 PM to 03:00 PM

**LIVE PREMIUM
GREEN CARD**
(IBPS PO & CLERK)

BILINGUAL

26 May 2021

07:30 PM to 09:30 PM

LIVE PREMIUM SILVER CARD
(CGL & CHSL)

08:00 AM to 10:00 AM

LIVE PREMIUM GREEN CARD
(CGL & CHSL)

05:30 PM to 07:30 PM

LIVE PREMIUM SILVER CARD
(CGL & CHSL)

BILINGUAL

10:30 AM to 12:30 PM

**LIVE PREMIUM
GREEN CARD**
(IBPS PO & CLERK)

ENGLISH MEDIUM

03:00 PM to 05:00 PM

**LIVE PREMIUM
SILVER CARD**
(CGL & CHSL)

ENGLISH MEDIUM

07:30 PM to 09:30 PM

**LIVE PREMIUM
GREEN CARD**
(IBPS PO & CLERK)

ENGLISH MEDIUM

PDF



Consider the following statements?

1. A person travelling from India to USA across International Date Line will gain a day./ 1. अंतर्राष्ट्रीय तिथि रेखा के पार भारत से यूएसए जाने वाले व्यक्ति को एक दिन मिलेगा।
2. A person travelling from Mexico to New Zealand will lose a day./ 2. मेक्सिको से न्यूजीलैंड जाने वाला व्यक्ति एक दिन खो देगा।
3. On a 12 hour clock, the time is 05:30 in Delhi. Then the time in London on a 24 hour clock will be 00:00./12 घंटे की घड़ी में, दिल्ली में समय 05:30 है। फिर लंदन में 24 घंटे की घड़ी में समय 00:00 होगा

Which of the above statements are incorrect?

- a) All the statements are correct
- b) Only 2
- c) 1 and 2
- d) 2 and 3



Practice Question

If the difference in time between two places were 2 hours and 20 minutes, then the difference in their longitude would be:

A. 30

B. 35

C. 45

D. 50



Mahendra's

FOR MORE DISCOUNT VISIT www.mahendras.org & USE PROMO CODE : **E13830**

Don't Let Your Studies Get Impacted By COVID-19 Pandemic

Stay Home & Study Online With Mahendras Hybrid Model

Features :



Offline
Classes



Live Interactive
Online Classes



Same
Faculty



Same
Batch



Same
Batch Timing



Online Library
Facility



Recorded
Video



PDFs



Classes In
Both Model

CONTACT US:

1800-103-5225



THANK YOU