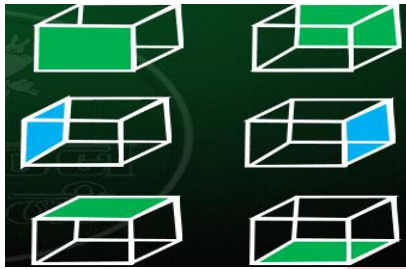


REASONING (28 SEPTEMBER 2019)



Q.1 There are two types of dice

1. Standard
2. Non-standard

Non -Standard -

Dice which does not follow the rule of standard Dice.

Rule No. 1 :

Two opposite faces cannot be adjacent to one another.

Non -Standard -

Dice which does not follow the rule of standard Dice.

Rule No. 1 :

Two opposite faces cannot be adjacent to one another.

Non -Standard -

Dice which does not follow the rule of standard Dice.

Rule No. 1 :

Two opposite faces cannot be adjacent to one another.

Non -Standard -

Dice which does not follow the rule of standard Dice.

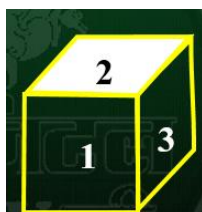
Rule No. 1 :

Two opposite faces cannot be adjacent to one another.

Q.2 Which number is opposite to 5 ?

कौन सी संख्या 5 के विपरीत है?

1. 4
2. 2
3. 1
4. 3



ANS-2

Q.3 Which number is opposite to Heart shape ?

हार्ट शेप के विपरीत कौन सी संख्या है?



ANS-3

Q.4

Which number is opposite to 5 ?

कौन सी संख्या 5 के विपरीत है?

1. 3
2. 4
3. 2
4. 6



ANS-4

Q.5

Which face is opposite to 3?

कौन सा सतह 3 के विपरीत है?

1. 2
2. 1
3. 4
4. 5



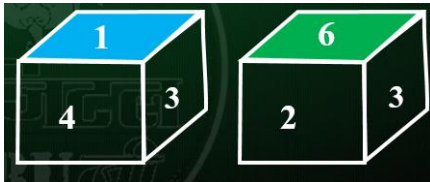
ANS-4

Q.6

Which face is opposite to 4 ?

कौन सा सतह 4 के विपरीत है?

1. 1
2. 3
3. 2
4. 6




ANS-3

Q.7

Which face is opposite to 3 ?

कौन सा सतह 3 के विपरीत है?

1. 2 2. 4 3. 6 4. 5



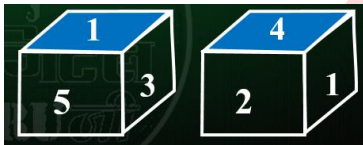
ANS-1

Q.8

Which face is opposite to 3 ?

कौन सा सतह 3 के विपरीत है?

1. 2 2. 1 3. 4 4. 3



ANS-1

Q.9

Which face is opposite to 3 ?

कौन सा सतह 3 के विपरीत है?

1. 6 2. 4 3. 5 4. 2

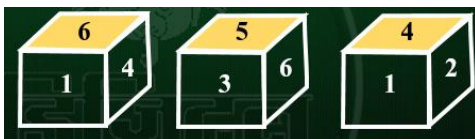


ANS-3

Q.10

Three positions of a dice are given, find out which digit would be in front of 6 on that basis ?

एक पासे की तीन स्थितियां दी गयी है उसके आधार पर यह पता कीजिए की अंक 6 के सामने कौन सा अंक आएगा ?



(A) 3

(B) 5

(C) 2

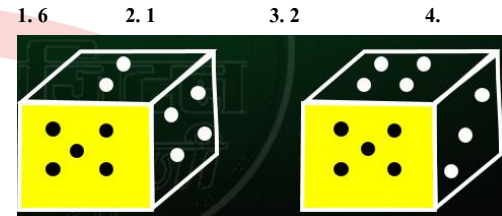
(D) 1

ANS-3

Q.11

Which digit will appear on the face opposite to the face with number 3?

नंबर 3 के साथ सतह के विपरीत सतह पर कौन सा अंक दिखाई देगा?



ANS-3

Q.12

From the four positions of a dice given below, find the color which is opposite to Purple ?

नीचे दिए गए पासा के चार पदों में से, बैंगनी रंग के विपरीत रंग का पता लगाएं?

1. Blue 2. Orange 3. Red 4. Green



ANS-2

Q.13

Here 4 positions of a cube are shown. Which sign will be opposite to 'O'?

यहाँ एक घन के 4 पदों को दिखाया गया है। कौन सा चिन्ह 'O' के विपरीत होगा?

1. \times 2. $+$ 3. Δ 4. \div



ANS-3

Q.14

How many points will be on the face opposite to the face which contains 2 points?

2 अंक वाले सतह के विपरीत सतह पर कितने अंक होंगे?

1. 1 2. 5 3. 4 4. 6



ANS-4

Q.15

Which part opposite to Fruit?

फल के विपरीत कौन सा भाग?

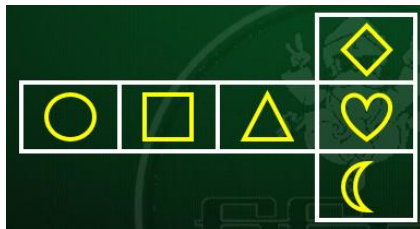
1. Flower 2. Leaf

3. Stem

4. ÷ Seed

ANS-1

Q.16 Choose the correct closed dice which shows the given figure?



1 2 3 4

ANS-2

Q.17 Choose the correct closed dice which shows the given figure?




1 2 3 4

ANS-2

Q.18 How many cubes are there?

कितने घन हैं?



1. 20 2. 16 3. 18 4. 14

ANS-1