



Mahendra's



SSC CHSL EXAM

REASONING

2:30 PM

**CGL के बाद
CHSL**

में यही प्रश्न पूछे जायेंगे

DAY 45



Mahendra's

ENSURE YOUR SUCCESS WITH- VIDEO GURU



A COMPLETE VIDEO CLASS
FOR YOUR PREPARATION

**Subscribe
BUTTON**




BOOST YOUR PREPARATIONS WITH MAHENDRAS: **STUDY MATERIAL, E-MICA, E-NEWS, BAGS & MUCH MORE.** VISIT NOW: myshop.mahendras.com



मिल सके आसानी से
उसकी ख्वाहिश किसे है
जिद्द तो उसकी है जो
मुकदर में लिखा ही नहीं है



 Mahendra's

ENSURE YOUR SUCCESS WITH- **VIDEO GURU**



A COMPLETE VIDEO CLASS
FOR YOUR PREPARATION

Subscribe
BUTTON



BOOST YOUR PREPARATIONS WITH MAHENDRAS: STUDY MATERIAL, E-MICA, E-NEWS, BAGS & MUCH MORE. VISIT NOW: myshop.mahendras.com

In a row position of P is 14th from left end and position of S is 18th from right end if $\frac{1}{5}$ of total members are sitting between them , then find the minimum number of this line ?

पंक्ति में स्थिति बाएं छोर से 14 वें और S की स्थिति दाएं छोर से 18 वें है यदि कुल सदस्यों का $\frac{1}{5}$ उनके बीच बैठे हैं, तो पता करें कि इस पंक्ति की न्यूनतम संख्या क्या होगी?



(1) 22

(2) 37

(3) 40

(4) 53

(5) Can not Determine

(CND) VIDEO GURU

Mahendra's

ENSURE YOUR SUCCESS WITH-




A COMPLETE VIDEO CLASS
FOR YOUR PREPARATION

Subscribe
BUTTON



BOOST YOUR PREPARATIONS WITH MAHENDRAS: STUDY MATERIAL, E-MICA, E-NEWS, BAGS & MUCH MORE. VISIT NOW: myshop.mahendras.com



nand kumar 18 hours ago
समुच्चय वाला करवा दीजिये sir जी (25,41,66)

1 REPLY




Sahil katoch 15 hours ago
Homework:-
CND hoga

REPLY



abhijit meena 14 hours ago
Sir homework answar is cnd

REPLY



arunima sakshi 19 hours ago
Home work ans--- CND

1 REPLY

[View 2 replies](#)



Ram anuj yadav 18 hours ago
Thanks sir

REPLY



Mr. Vivek Bhatt 16 hours ago
maximume 40 hoga minimum CND

REPLY



Gireesh prajapati Hardoi 17 hours ago
22

REPLY



MOHIT SARDHANA 15 hours ago
Sir Aap Aman sir ko jante Ho faridabad Haryana branch me h


REPLY



parbati suna 19 hours ago
Sir aap bahut achhe padha rehe hoo.thank you sir

1 REPLY

[View reply](#)



Saurav lahiri 19 hours ago
Sir homework answer cnd

REPLY

[View reply](#)



Vikas Raaj 13 hours ago
Sir aap ki trick se answer to dekh ke hi samajh aa jata hai
thanks Sir itna achha padhane ke liye

REPLY



deva sharma 20 hours ago
Dd cnd sir maja a gaya u r great sir

1 REPLY

[View reply](#)



mukesh kumar 20 hours ago
Good morning sir

1 REPLY

[View reply](#)



Ramakant sharma 19 hours ago
Sir cnd ho ga

1 REPLY

[View reply](#)



sonu pal 1 hour ago
4

Mahendra's

ENSURE YOUR SUCCESS WITH- **VIDEO GURU**



A COMPLETE VIDEO CLASS
FOR YOUR PREPARATION

Subscribe
BUTTON



BOOST YOUR PREPARATIONS WITH MAHENDRAS: **STUDY MATERIAL, E-MICA, E-NEWS, BAGS & MUCH MORE.** VISIT NOW: myshop.mahendras.com



Kapil Patidar 16 hours ago
40

👍 🗨️ REPLY



Official LovisH 17 hours ago
40

👍 🗨️ REPLY



Vikas Chaurasiya 16 hours ago
Jhakash sir gjb aap kamal h

👍 🗨️ REPLY



Ajay Kumar Yadav 18 hours ago
CND HAI

👍 🗨️ REPLY



Subhasmita Pradhan 20 hours ago
Cnd-5

👍 1 🗨️ REPLY

▼ View reply



Deepak panchal BJP 18 hours ago
Can not b detrmn



Dharm vir kumar fulrai 12 hours ago
CND

👍 🗨️ REPLY




Sweta Kumari 14 hours ago
CND

👍 🗨️ REPLY



Rishu Raj 14 hours ago
CND

👍 🗨️ REPLY



RAJESHA KUMAR 15 hours ago
CND

👍 🗨️ REPLY



Hariom Kumar 20 hours ago
Sir ji he ka ans to 40

Sar main aapki rojana class leta Hun aur ab to question ko touch karne a car ka tarika vah Badal gaya hi hi kyunki aapke padhaane ka Tarika sabse alag hai CHSL ke liya aapke experience ke hisab se jo chapter kash ham jaldi karaen kyunki ki hamari e Naya aapke hathon main hi

👍 1 🗨️ REPLY

▼ View 2 replies



Prachi Meshram 18 hours ago
CND

👍 1 🗨️ REPLY

▼ View reply



sonu pal 1 hour ago
d

👍 🗨️ REPLY



sonu pal 1 hour ago
c

👍 🗨️ REPLY



sonu pal 1 hour ago
a

👍 🗨️ REPLY



Hamraj Ruhel 19 hours ago
Cnd

👍 1 🗨️ REPLY

▼ View reply

In the following question, select the related Letter/ Word/ Number from the given alternatives. / निम्नलिखित प्रश्न में, दिए गए विकल्पों में से सम्बंधित अक्षर/शब्द/संख्या का चयन करें।
Taka/टका : Bangladesh/बांग्लादेश ::



A.

Cambodia/कम्बोडिया

B. Italy/इटली

C. India/भारत

Mahendra's

ENSURE YOUR SUCCESS WITH- VIDEO GURU



COMPLETE VIDEO CLASS FOR YOUR PREPARATION

Subscribe BUTTON

BOOST YOUR PREPARATIONS WITH MAHENDRAS: STUDY MATERIAL, E-NEWS, BAGS & MUCH MORE. VISIT NOW: myshop.mahendras.c

In the question, select the related word/ number/ letter from the given alternatives.

प्रश्न में दिए गए विकल्पों में से संबंधित शब्द/ संख्या/ अक्षर का चयन करें।

TRIANGLE : 25 :: ARRANGEMENT :

A.

23

B.

34

C.

44



 **Mahendra's**

ENSURE YOUR SUCCESS WITH- **VIDEO GURU**



A COMPLETE VIDEO CLASS
FOR YOUR PREPARATION

Subscribe
BUTTON 

BOOST YOUR PREPARATIONS WITH MAHENDRAS: STUDY MATERIAL, E-MICA, E-NEWS, BAGS & MUCH MORE. VISIT NOW: myshop.mahendras.com

Find out the set of number amongst the four sets of numbers given in the alternatives which are similar to the set given in the question.

उत्तर विकल्पों में चार संख्या-समुच्चय दिये गये हैं, इनमें से उस संख्या-समुच्चय को पहचानें जो प्रश्न में दिये गये समुच्चय से अधिकतम मेल खाता हो।

Given set / दिया गया समुच्चय (18 , 36 , 54)

A.

(06,42,20)

B.

(24,15,32)



Mahendra's

ENSURE YOUR SUCCESS WITH- **VIDEO GURU**



A COMPLETE VIDEO CLASS
FOR YOUR PREPARATION


Subscribe
BUTTON



BOOST YOUR PREPARATIONS WITH MAHENDRAS: STUDY MATERIAL, E-MICA, E-NEWS, BAGS & MUCH MORE. VISIT NOW: myshop.mahendras.com

How many triangles are there in the following figure?

निम्नलिखित आकृति में त्रिभुजों की संख्या क्या है?



A. 26

B. 20

C. 22

D. 28

 Mahendra's

ENSURE YOUR SUCCESS WITH- **VIDEO GURU**



A COMPLETE VIDEO CLASS
FOR YOUR PREPARATION

Subscribe
BUTTON 

BOOST YOUR PREPARATIONS WITH MAHENDRAS: **STUDY MATERIAL, E-MICA, E-NEWS, BAGS & MUCH MORE.** VISIT NOW: myshop.mahendras.com

Select the related letters/word/number from the given alternatives.
दिए गए विकल्पों में से सम्बन्धित अक्षरों/शब्द/संख्या को चुनिए

PHF : 4 ::

RLO : ?



A. 2

B. 7

C. 5

D. 6


Find out the missing number.

लुप्त संख्या ज्ञात कीजिये।



- A. 3
B. 4
C. 5
D. 7



 Mahendra's

ENSURE YOUR SUCCESS WITH- **VIDEO GURU**



A COMPLETE VIDEO CLASS
FOR YOUR PREPARATION

Subscribe
BUTTON 

BOOST YOUR PREPARATIONS WITH MAHENDRAS: STUDY MATERIAL, E-MICA, E-NEWS, BAGS & MUCH MORE. VISIT NOW: myshop.mahendras.com

If/यदि

36,

36

Then/तो

?

$$22 + 36 =$$

$$33 + 24 =$$

$$12 + 42 =$$



A. 18

B. 24

C. 36

D. 42

Choose the odd combination from the given alternatives.

दिए गए विकल्पों में से विषम संयोजन चुनें।



A. Kiwi-02

B. Eagle-03

C. Emu-02

D. Penguin-04



Mahendra's

ENSURE YOUR SUCCESS WITH- VIDEO GURU



**A COMPLETE VIDEO CLASS
FOR YOUR PREPARATION**

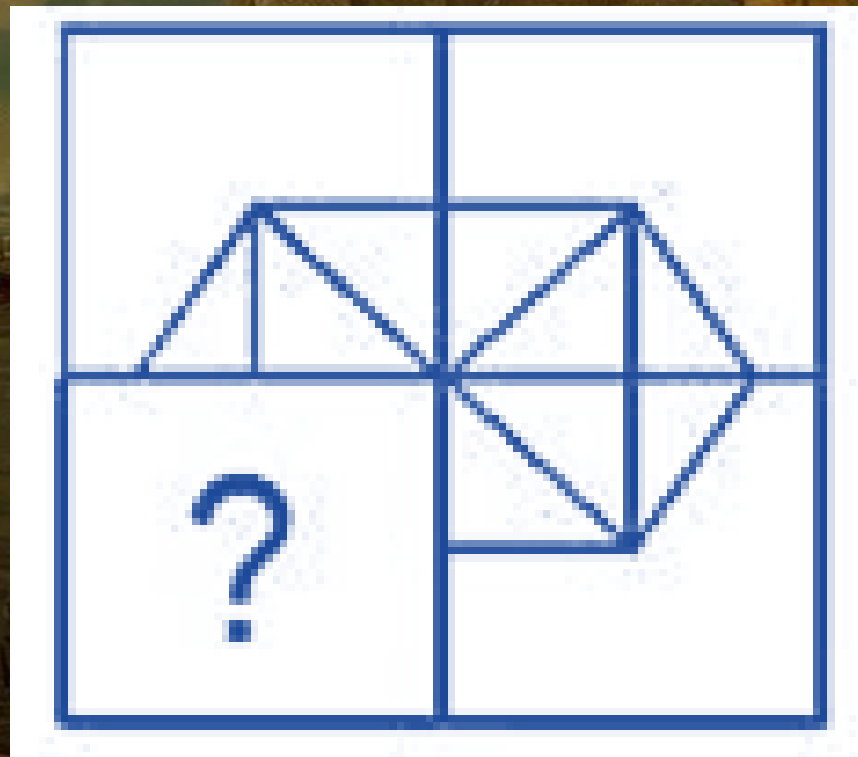
**Subscribe
BUTTON**

BOOST YOUR PREPARATIONS WITH MAHENDRAS: STUDY MATERIAL, E-MICA, E-NEWS, BAGS & MUCH MORE. VISIT NOW: myshop.mahendras.com


Complete the given pattern by choosing the correct alternative.

विकल्पों में से उस विकल्प को चुनिए जो दी गई आकृति को पूरा करे।


Question figure / प्रश्न आकृति



A.




B.



C.



D.



Mahendra's

ENSURE YOUR SUCCESS WITH- VIDEO GURU



A COMPLETE VIDEO CLASS FOR YOUR PREPARATION

Subscribe BUTTON

BOOST YOUR PREPARATIONS WITH MAHENDRAS: STUDY MATERIAL, E-MICA, E-NEWS, BAGS & MUCH MORE. VISIT NOW: myshop.mahendras.com

Find the missing number from the given alternatives.

दिए गए विकल्पों में से लुप्त संख्या ज्ञात करें।



A.

45

B.

71

C.

36

D.

51



 Mahendra's

ENSURE YOUR SUCCESS WITH- **VIDEO GURU**



A COMPLETE VIDEO CLASS
FOR YOUR PREPARATION

 Subscribe
BUTTON

BOOST YOUR PREPARATIONS WITH MAHENDRAS: STUDY MATERIAL, E-MICA, E-NEWS, BAGS & MUCH MORE. VISIT NOW myshop.mahendras.com

'Mother' has the same relation to 'child' as a 'tree' has -----

'माँ' का 'संतान' के साथ वैसा ही संबंध है जैसा
एक 'पेड़' का --



(A) पौधा / Plant

(B) फल / Fruit

(C) जड़ / Root

(D) तना / Stem

(E) इनमें से कोई नहीं /

NOT

 Mahendra's

ENSURE YOUR SUCCESS WITH- VIDEO GURU



A COMPLETE VIDEO CLASS
FOR YOUR PREPARATION

Subscribe
BUTTON



BOOST YOUR PREPARATIONS WITH MAHENDRAS: STUDY MATERIAL, E-MICA, E-NEWS, BAGS & MUCH MORE. VISIT NOW: myshop.mahendras.com

How many triangles are there in the following figure?

निम्नलिखित आकृति में कितने त्रिभुज हैं?




A .


82

B .

80

C .



 Mahendra's

ENSURE YOUR SUCCESS WITH- **VIDEO GURU**



A COMPLETE VIDEO CLASS
FOR YOUR PREPARATION

 **Subscribe**
BUTTON

BOOST YOUR PREPARATIONS WITH MAHENDRAS: **STUDY MATERIAL, E-MICA, E-NEWS, BAGS & MUCH MORE.** VISIT NOW: myshop.mahendras.com

If $20 + 15 = 24$ and $64 + 13 = 42$ then
 $12 + 18 = ?$

यदि $20 + 15 = 24$ और $64 + 13 = 42$ तो

12

$$20 + 15 \Rightarrow (2+0+1+5) \times 3 = 8 \times 3 = 24$$

$$64 + 13 \Rightarrow (6+4+1+3) \times 3 = 14 \times 3 = 42$$

$$12 + 18 \Rightarrow (1+2+1+8) \times 3 = 12 \times 3 = 36$$

A. 31

B. 34

C. 33

D. 36

If $563 + 862 = PN$ and $63 + 42 = FI$ then $117 + 008$ is equal to which of the following?
यदि $563 + 862 = PN$ और $63 + 42 = FI$ तो $117 + 008$ निम्न में से किसके बराबर है?



A.
HI
B.
HS

 Mahendra's

ENSURE YOUR SUCCESS WITH- **VIDEO GURU**



A COMPLETE VIDEO CLASS
FOR YOUR PREPARATION
C.

Subscribe
BUTTON



BOOST YOUR PREPARATIONS WITH MAHENDRAS: STUDY MATERIAL, E-MICA, E-NEWS, BAGS & MUCH MORE. VISIT NOW: myshop.mahendras.com

Find out how many squares are there in the given figure.

ज्ञात करे दी गयी आकृति में कितने वर्ग है।



- A. 15
- B. 16
- C. 14
- D. 13

 Mahendra's

ENSURE YOUR SUCCESS WITH- **VIDEO GURU**



A COMPLETE VIDEO CLASS
FOR YOUR PREPARATION

Subscribe
BUTTON 

BOOST YOUR PREPARATIONS WITH MAHENDRAS: STUDY MATERIAL, E-MICA, E-NEWS, BAGS & MUCH MORE. VISIT NOW: myshop.mahendras.com

In the questions below, there is a definite relation between words.
Your task is to find the option that has the same relation in words.
निचे दिए हुए प्रश्नों में , शब्दों में एक निश्चित सम्बन्ध है | आप कार्य उस विकल्प को
ज्ञात करना है जिसको शब्दों में वही सम्बन्ध है |


176 : 14936 :: 549

: ?



- a) 3546
- b) 4571
- c) 25784
- d) 251681



 Mahendra's

ENSURE YOUR SUCCESS WITH- VIDEO GURU



A COMPLETE VIDEO CLASS
FOR YOUR PREPARATION


Subscribe
BUTTON 

BOOST YOUR PREPARATIONS WITH MAHENDRAS: STUDY MATERIAL, E-MICA, E-NEWS, BAGS & MUCH MORE. VISIT NOW: myshop.mahendras.com

Find the odd word/letters/number from the given alternatives
दिए गए विकल्पों में से विषम शब्द / अक्षर / संख्या ज्ञात कीजिए।



- (A) Bud / कली
- (B) Branch / शाखा
- (C) Leaf / पत्ता
- (D) Plant / पौधा

 **Mahendra's**

ENSURE YOUR SUCCESS WITH- VIDEO GURU



A COMPLETE VIDEO CLASS
FOR YOUR PREPARATION

Subscribe
BUTTON 

BOOST YOUR PREPARATIONS WITH MAHENDRAS: STUDY MATERIAL, E-MICA, E-NEWS, BAGS & MUCH MORE. VISIT NOW: myshop.mahendras.com

In a certain code PRINTS is written as 69,
then how can HIGHLY be written in that
code?


यदि एक निश्चित कोड में PRINTS को 69 लिखा
जाता है, तो HIGHLY को क्या लिखा जा सकता है?

$$\begin{aligned}\text{PRINTS} &= 16 + 18 + 9 + 14 + 20 + 19 = 96 = 69 \\ \text{HIGHLY} &= 8 + 9 + 7 + 8 + 12 + 25 = 69 = 96\end{aligned}$$

- A. 96
- B. 85
- C. 74
- D. 53

How many triangles are there in the following figure?

निम्नलिखित आकृति में कितने त्रिभुज हैं?




(a)

16

(b)



(c)

 Mahendra's

ENSURE YOUR SUCCESS WITH- VIDEO GURU



A COMPLETE VIDEO CLASS
FOR YOUR PREPARATION

Subscribe
BUTTON 

BOOST YOUR PREPARATIONS WITH MAHENDRAS: STUDY MATERIAL, E-MICA, E-NEWS, BAGS & MUCH MORE. VISIT NOW: myshop.mahendras.com

If the clock is 10 hours 80 minutes and it is running 2:40, what time will it show if it is seen in the mirror?

यदि घड़ी 10 घंटे 80 मिनट की है और 2:40 का समय हो रहा है यदि इसे दर्पण में देखा जाए तो कौन सा समय दर्शाएगी




A . 7 : 40

B . 7 : 45

C . 3 : 42

D . 9 : 41

 Mahendra's

ENSURE YOUR SUCCESS WITH- VIDEO GURU




A COMPLETE VIDEO CLASS
FOR YOUR PREPARATION

Subscribe
BUTTON 

BOOST YOUR PREPARATIONS WITH MAHENDRAS: STUDY MATERIAL, E-MICA, E-NEWS, BAGS & MUCH MORE. VISIT NOW: myshop.mahendras.com

How many cubes are there in the diagram?

आरेख में कितने घन हैं?



10

(b) 12

(c) 08

(d) 06

 **Mahendra's**

ENSURE YOUR SUCCESS WITH- **VIDEO GURU**



A COMPLETE VIDEO CLASS
FOR YOUR PREPARATION

Subscribe
BUTTON 

BOOST YOUR PREPARATIONS WITH MAHENDRAS: **STUDY MATERIAL, E-MICA, E-NEWS, BAGS & MUCH MORE.** VISIT NOW: myshop.mahendras.com

वर्ष 1982 का कैलेण्डर निम्नलिखित वर्ष में से किस वर्ष के समान है?


(a) 1991

(b) 1992

(c) 1993

(d) 1988



 Mahendra's

ENSURE YOUR SUCCESS WITH- **VIDEO GURU**



A COMPLETE VIDEO CLASS
FOR YOUR PREPARATION

Subscribe
BUTTON 

BOOST YOUR PREPARATIONS WITH MAHENDRAS: **STUDY MATERIAL, E-MICA, E-NEWS, BAGS & MUCH MORE.** VISIT NOW: myshop.mahendras.com

What is the difference between the place value of '9' and '5' of the given number ?

दी गई संख्या के '9' और 5 के स्थान मूल्य में क्या अंतर है?

4 2 8 6 9 3

~~30405~~ - 5 =

89995

(a) 99999

(b) 89000

(c) 80005

(d) 89995



 Mahendra's

ENSURE YOUR SUCCESS WITH- VIDEO GURU



A COMPLETE VIDEO CLASS
FOR YOUR PREPARATION

Subscribe
BUTTON 


BOOST YOUR PREPARATIONS WITH MAHENDRAS: STUDY MATERIAL, E-MICA, E-NEWS, BAGS & MUCH MORE. VISIT NOW: myshop.mahendras.com

If in the English Alphabet, B becomes A and P becomes O then what will 'RAVI' become?

यदि अंग्रेजी वर्णमाला में B, A हो जाता है P, O हो जाता है तो 'RAVI' क्या होगा?



- A. QZVI
- B. SBQJ
- C. QZUI
- D. QZUH

 Mahendra's

ENSURE YOUR SUCCESS WITH- **VIDEO GURU**



A COMPLETE VIDEO CLASS
FOR YOUR PREPARATION

Subscribe
BUTTON 

BOOST YOUR PREPARATIONS WITH MAHENDRAS: STUDY MATERIAL, E-MICA, E-NEWS, BAGS & MUCH MORE. VISIT NOW: myshop.mahendras.com

In the following question, select the related word from the given alternatives.

निम्नलिखित प्रश्न में, दिए गये विकल्पों में से सम्बन्धित शब्द चुन कीजिये.

Mason : Plumb line :: ?

?



साहल रेखा :: ?
a) Surgeon / शल्य चिकित्सक : Scalpel / कलपेल

(b) Sculptor / मूर्तिकार : Spade / कुदाल

(c) Blacksmith / लोहार : Forcep / पुलिक

(d) Gardener / माली : Saw / आरा

Mahendra's

ENSURE YOUR SUCCESS WITH- VIDEO GURU



A COMPLETE VIDEO CLASS
FOR YOUR PREPARATION

Subscribe
BUTTON

BOOST YOUR PREPARATIONS WITH MAHENDRAS: STUDY MATERIAL, E-MICA, E-NEWS, BAGS & MUCH MORE. VISIT NOW: myshop.mahendras.com

Choose the word which is least like the others word in a group?

वह शब्द चुनें जो किसी समूह के अन्य शब्द की तरह कम से कम हो?



Calendar /

कैलेंडर

B. Date / तारीख

C. Day / दिन

D. Month / महीना

E. Year / वर्ष

 **Mahendra's**

ENSURE YOUR SUCCESS WITH-

VIDEO GURU



A COMPLETE VIDEO CLASS
FOR YOUR PREPARATION

Subscribe
BUTTON



BOOST YOUR PREPARATIONS WITH MAHENDRAS: STUDY MATERIAL, E-MICA, E-NEWS, BAGS & MUCH MORE. VISIT NOW: myshop.mahendras.com

What was the day on 19th Feburay

19 फरवरी 1995 को कौन सा दिन था?



February 1995						
Su	Mo	Tu	We	Th	Fr	Sa
29	30	31	1	2	3	4
5	6	7	8	9	10	11
12	13	14	15	16	17	18
19	20	21	22	23	24	25
26	27	28	1	2	3	4
5	6	7	8	9	10	11

A. Monday /

सोमवार

B. Wednesday /

बुधवार

C. Sunday /

रविवार

 **Mahendra's**

ENSURE YOUR SUCCESS WITH- VIDEO GURU



A COMPLETE VIDEO CLASS
FOR YOUR PREPARATION

Subscribe
BUTTON

BOOST YOUR PREPARATIONS WITH MAHENDRAS: STUDY MATERIAL, E-BOOKS, E-NEWS, PRACTICE & MUCH MORE. VISIT NOW: myshop.mahendras.com

Find the number of cube ?
घनों की संख्या ज्ञात करे ?



A .

24

B .

15

C .

22

D .



 Mahendra's

ENSURE YOUR SUCCESS WITH VIDEO GURU



A COMPLETE VIDEO CLASS
FOR YOUR PREPARATION

Subscribe
BUTTON 

BOOST YOUR PREPARATIONS WITH MAHENDRAS: STUDY MATERIAL, E-MICA, E-NEWS, BAGS & MUCH MORE. VISIT NOW: myshop.mahendras.com

Find the minimum number of straight lines required to make the given figure

दी गई आकृति बनाने के लिए आवश्यक न्यूनतम पंक्तियों की संख्या ज्ञात कीजिए



HOMework

A . 14
B . 12

B

C . 16

D

 Mahendra's

ENSURE YOUR SUCCESS WITH- VIDEO CURU



A COMPLETE VIDEO CLASS
FOR YOUR PREPARATION

Subscribe
BUTTON

BOOST YOUR PREPARATIONS WITH MAHENDRAS: STUDY MATERIAL, E-MICA, E-NEWS, BAGS & MUCH MORE. VISIT NOW: myshop.mahendras.com




Mahendra'sTM



ATUL MAHENDRAS

[https://t.me/joinchat/AA
AAAEqDxL8VHQy...](https://t.me/joinchat/AAAAEqDxL8VHQy...)

FOLLOW ME!

 Mahendra's


ENSURE YOUR SUCCESS WITH- **VIDEO GURU**



A COMPLETE VIDEO CLASS
FOR YOUR PREPARATION

Subscribe
BUTTON 

BOOST YOUR PREPARATIONS WITH MAHENDRAS: STUDY MATERIAL, E-MICA, E-NEWS, BAGS & MUCH MORE. VISIT NOW: myshop.mahendras.com

 Mahendra's

ENSURE YOUR SUCCESS WITH- **VIDEO GURU**



A COMPLETE VIDEO CLASS
FOR YOUR PREPARATION

Subscribe
BUTTON



BOOST YOUR PREPARATIONS WITH MAHENDRAS: **STUDY MATERIAL, E-MICA, E-NEWS, BAGS & MUCH MORE.** VISIT NOW: myshop.mahendras.com