



Mahendra's



RAILWAY NTPC/GROUP D

6:15 PM

REASONING

NTPC - CBT - 01

अतिमहत्वपूर्ण
25 प्रश्न



Mahendra's

ENSURE YOUR SUCCESS WITH- VIDEO GURU



A COMPLETE VIDEO CLASS
FOR YOUR PREPARATION

Subscribe
BUTTON



BOOST YOUR PREPARATIONS WITH MAHENDRAS: STUDY MATERIAL, E-MICA, E-NEWS, BAGS & MUCH MORE. VISIT NOW: myshop.mahendras.com



Happy Holi



 **Mahendras**

ENSURE YOUR SUCCESS WITH- VIDEO GURU



A COMPLETE VIDEO CLASS
FOR YOUR PREPARATION

Subscribe
BUTTON



BOOST YOUR PREPARATIONS WITH MAHENDRAS: STUDY MATERIAL, E-MICA, E-NEWS, BAGS & MUCH MORE. VISIT NOW: myshop.mahendras.com

RITIKA MAHENDRAS

<https://t.me/joinchat/AAAAAFIFrmfglJslepg3yg>



Mahendra's

ENSURE YOUR SUCCESS WITH- VIDEO GURU



A COMPLETE VIDEO CLASS
FOR YOUR PREPARATION

Subscribe
BUTTON



BOOST YOUR PREPARATIONS WITH MAHENDRAS: **STUDY MATERIAL, E-MICA, E-NEWS, BAGS & MUCH MORE.** VISIT NOW: [myshop.mahendras.c](https://myshop.mahendras.com)

1

‘Fly’ is related to ‘bird’ in the same way as ‘Gallop’ is related to

‘_____’,

‘फ्लाई’ उसी प्रकार ‘पक्षी’ से संबंधित है जिस प्रकार ‘गैलोप’ ‘_____’ से संबंधित है



- A. Tiger/बाघ
- B. Lion/शेर
- C. Horse/घोड़ा
- D. Elephant/हाथी

DAILY CLASS TIME
6:15 PM

 **Mahendra's**

ENSURE YOUR SUCCESS WITH- VIDEO GURU



A COMPLETE VIDEO CLASS
FOR YOUR PREPARATION

Subscribe
BUTTON



BOOST YOUR PREPARATIONS WITH MAHENDRAS: **STUDY MATERIAL, E-MICA, E-NEWS, BAGS & MUCH MORE.** VISIT NOW: myshop.mahendras.c

2 Select the option is related to the third term in the same way as the second term is related to the first term.

विकल्प का चयन तीसरे पद से उसी तरह से संबंधित है जैसे दूसरा पद पहले पद से संबंधित है।


WOLF : FLOW :: DRAW : ?

A. WRAD

B. WARD

C. RWAD

D. DARW



DAILY CLASS TIME
6:15 PM

Mahendra's

ENSURE YOUR SUCCESS WITH- VIDEO GURU



A COMPLETE VIDEO CLASS
FOR YOUR PREPARATION

Subscribe
BUTTON

BOOST YOUR PREPARATIONS WITH MAHENDRAS: STUDY MATERIAL, E-MICA, E-NEWS, BAGS & MUCH MORE. VISIT NOW: myshop.mahendras.com


3

Select the figure in which the given figure is embedded.

उस आकृति का चयन करें जिसमें दी गई आकृति अंतर्निहित है।



A



B



C




D



4

Select the correct image of the given figure when the mirror is placed on the right of the figure.

दर्पण के दाईं ओर रखे जाने पर दिए गए चित्र की सही छवि का चयन करें।



5

Select the option that is related to the third number in the same way as the second number is related to the first number.

उस विकल्प का चयन करें जो तीसरे नंबर से उसी तरह से संबंधित है जैसे दूसरी संख्या पहले नंबर से संबंधित है।

17 : 102 :: 23 : _____



A. 196

B. 256



C. 138

D. 152

DAILY CLASS TIME
6:15 PM

 **Mahendra's**

ENSURE YOUR SUCCESS WITH- VIDEO GURU



A COMPLETE VIDEO CLASS
FOR YOUR PREPARATION

Subscribe
BUTTON




BOOST YOUR PREPARATIONS WITH MAHENDRAS: STUDY MATERIAL, E-MICA, E-NEWS, BAGS & MUCH MORE. VISIT NOW: myshop.mahendras.com

6

Bharat and Sapna are husband and wife. Rohit and Bharat are brothers.

Suresh is the father of Rohit . Sapna's son is krish. How is krish related to Suresh?

भरत और सपना पति-पत्नी हैं। रोहित और भरत भाई हैं। सुरेश रोहित का पिता है। सपना का बेटा क्रिश है। क्रिश ,सुरेश से कैसे संबंधित है?



- A. Son/बेटा
- B. Father/पिता जी
- C. Uncle/चाचा
- D. Grandson/पोता

DAILY CLASS TIME
6:15 PM

Mahendra's

ENSURE YOUR SUCCESS WITH- VIDEO GURU



A COMPLETE VIDEO CLASS
FOR YOUR PREPARATION

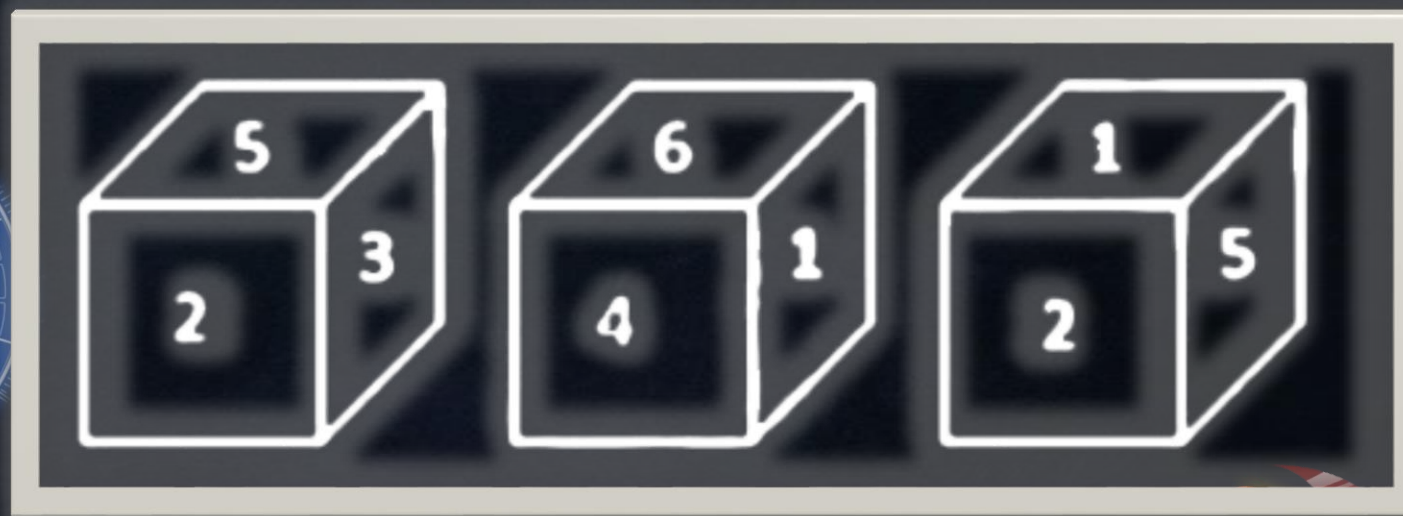
Subscribe
BUTTON

BOOST YOUR PREPARATIONS WITH MAHENDRAS: STUDY MATERIAL, E-MICA, E-NEWS, BAGS & MUCH MORE. VISIT NOW: myshop.mahendras.c

7

Three different positions of a dice are shown below. Which number appears on the face opposite the number 4?

एक पासा के तीन अलग-अलग पदों को नीचे दिखाया गया है। नंबर 4 के विपरीत चेहरे पर कौन सी संख्या दिखाई देती है?



A. 3

B. 2

C. 6

D. 5

DAILY CLASS TIME
6:15 PM

Mahendra's

ENSURE YOUR SUCCESS WITH- **VIDEO GURU**



A COMPLETE VIDEO CLASS
FOR YOUR PREPARATION

Subscribe
BUTTON



BOOST YOUR PREPARATIONS WITH MAHENDRAS: STUDY MATERIAL, E-MICA, E-NEWS, BAGS & MUCH MORE. VISIT NOW: myshop.mahendras.com

8

How many triangles are there in the following figure?

निम्नलिखित आकृति में कितने त्रिभुज हैं?



DAILY CLASS TIME
6:15 PM




A. 33

B. 18

C. 31

D. 29



 Mahendra's

ENSURE YOUR SUCCESS WITH- **VIDEO GURU**



A COMPLETE VIDEO CLASS
FOR YOUR PREPARATION

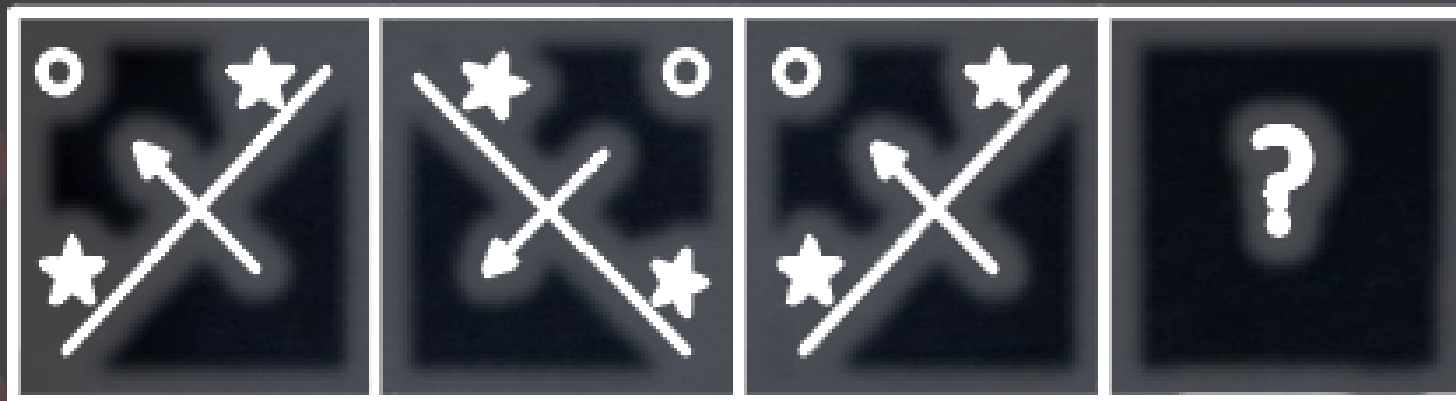
Subscribe
BUTTON

BOOST YOUR PREPARATIONS WITH MAHENDRAS: STUDY MATERIAL, E-MICA, E-NEWS, BAGS & MUCH MORE. VISIT NOW: myshop.mahendras.com

9

Select the figure that will come next in the following figure series.

उस आकृति का चयन करें जो अगले आकृति श्रृंखला में आएगी।



A



B



C



E




10

Choose the venn diagram from the given options which best represents the relationship amongst the following classes:

दिए गए विकल्पों में से वेन आरेख चुनें, जो निम्नलिखित वर्गों के बीच संबंधों का सबसे अच्छा प्रतिनिधित्व करता है:

Players, Singers, Students/खिलाड़ी, गायक, छात्र



A



B



C



E



11

Three of the following four word-pair are alike in a certain way and one is different. Pick the odd one out.


निम्नलिखित चार में से तीन शब्द-युग्म एक निश्चित तरीके से एक जैसे हैं और एक अलग है। विषम को बाहर उठाओ।



A. Scalpel : Surgeon/स्केलपेल: सर्जन

B. Chisel : Sculptor/छेनी: मूर्तिकार

C. Anvil : Blacksmith/निहाई: लोहार



D. Paper: Book/कागज : किताब

12

If SUN is coded as NUS and TOP is coded as POT, then which is the last letter in the code for the word FUR?

यदि SUN को NUS के रूप में कोडित किया गया है और TOP को POT के रूप में कोडित किया गया है, तो FUR शब्द के लिए कोड में अंतिम अक्षर कौन सा है?



- A. F
- B. U
- C. R
- D. E

DAILY CLASS TIME
6:15 PM

 **Mahendra's**

ENSURE YOUR SUCCESS WITH- VIDEO GURU



A COMPLETE VIDEO CLASS
FOR YOUR PREPARATION

Subscribe
BUTTON



BOOST YOUR PREPARATIONS WITH MAHENDRAS: **STUDY MATERIAL, E-MICA, E-NEWS, BAGS & MUCH MORE.** VISIT NOW: myshop.mahendras.c

13

If January 7th 2007 was Monday then what day of the week lies on January 7th 2008 ?

यदि 7 जनवरी 2007 सोमवार था तो सप्ताह का कौन सा दिन 7 जनवरी 2008 को निहित है?



1. Monday
2. Tuesday
3. Wednesday
4. Sunday



14

If DON is coded as 345 and ROAM is coded as 6412, then how will RANDOM be coded?

यदि DON को 345 और ROAM को 6412 के रूप में कोडित किया जाता है, तो RANDOM को कैसे कोडित किया जाएगा?



A. 615342

B. 615324

C. 613542

D. 651342



DAILY CLASS TIME
6:15 PM

 **Mahendra's**

ENSURE YOUR SUCCESS WITH- **VIDEO GURU**



A COMPLETE VIDEO CLASS
FOR YOUR PREPARATION

Subscribe
BUTTON 

BOOST YOUR PREPARATIONS WITH MAHENDRAS: **STUDY MATERIAL, E-MICA, E-NEWS, BAGS & MUCH MORE.** VISIT NOW: myshop.mahendras.com

15

Find the missing number from the below options.

नीचे दिए गए विकल्पों में से लुप्त संख्या ज्ञात कीजिए।




9	28	85
12	37	?
16	49	148

A. 134

B. 112

C. 96

D. 140



DAILY CLASS TIME

6:15 PM

 Mahendra's

ENSURE YOUR SUCCESS WITH- **VIDEO GURU**



A COMPLETE VIDEO CLASS
FOR YOUR PREPARATION


Subscribe
BUTTON

BOOST YOUR PREPARATIONS WITH MAHENDRAS: STUDY MATERIAL, E-MICA, E-NEWS, BAGS & MUCH MORE. VISIT NOW: myshop.mahendras.com

16

Three of the following four word pairs are alike in a certain way and one is different. Pick the odd one out.

निम्नलिखित चार में से तीन शब्द जोड़े एक निश्चित तरीके से एक जैसे हैं और एक अलग है। विषम को बाहर उठाओ।



- A. Dogri: Jammu and Kashmir/डोगरी: जम्मू और कश्मीर
- B. Tamil : Kerala/तमिल: केरल
- C. Bori: Arunachal Pradesh/बोरी: अरुणाचल प्रदेश
- D. Konkani: Goa/कोंकणी: गोवा



DAILY CLASS TIME
6:15 PM

 **Mahendra's**

ENSURE YOUR SUCCESS WITH- VIDEO GURU



A COMPLETE VIDEO CLASS
FOR YOUR PREPARATION

Subscribe
BUTTON 

BOOST YOUR PREPARATIONS WITH MAHENDRAS: **STUDY MATERIAL, E-MICA, E-NEWS, BAGS & MUCH MORE.** VISIT NOW: myshop.mahendras.c

17

A square paper is folded and cut as shown below. How will it appear when unfolded?

एक चौकोर कागज को मोड़कर नीचे दिखाया गया है। सामने आने पर कैसे प्रकट होगा?



A

B

C

D




18

Three of the following four letter –clusters are alike in a certain way and one is different. Pick the out one out.

निम्नलिखित चार अक्षरों में से तीन - एक निश्चित तरीके से एक जैसे हैं और एक अलग है। एक को बाहर उठाओ।



A. KMT



B. OQV

C. FHO

D. QSZ

DAILY CLASS TIME
6:15 PM

 **Mahendra's**

ENSURE YOUR SUCCESS WITH- VIDEO GURU



A COMPLETE VIDEO CLASS
FOR YOUR PREPARATION

Subscribe
BUTTON 

BOOST YOUR PREPARATIONS WITH MAHENDRAS: **STUDY MATERIAL, E-MICA, E-NEWS, BAGS & MUCH MORE.** VISIT NOW: myshop.mahendras.com


19

Select the word pair in which the two words are related in the same way as the word pair given below.

निम्नलिखित चार अक्षरों में से तीन - एक निश्चित तरीके से एक जैसे हैं और एक अलग है। एक को बाहर उठाओ।

FEET : SOCKS/पैर: मोज़े

- A. Finger: Nail/उंगली: नाखून
- B. Head : Turban/सिर: पगड़ी
- C. Legs: Vest/पैर: बनियान
- D. Abdomen : Pants/उदर: पैंट



DAILY CLASS TIME
6:15 PM

Mahendra's

ENSURE YOUR SUCCESS WITH- VIDEO GURU



A COMPLETE VIDEO CLASS
FOR YOUR PREPARATION

Subscribe
BUTTON

BOOST YOUR PREPARATIONS WITH MAHENDRAS: STUDY MATERIAL, E-MICA, E-NEWS, BAGS & MUCH MORE. VISIT NOW: myshop.mahendras.com

20

Find the next term in the series

श्रृंखला में अगला शब्द खोजें

CBA, FGE, ILI, LQM, ?

DAILY CLASS TIME

6:15 PM




A. OVP

B. NVQ

C. OUP

D. OVQ



 Mahendra's

ENSURE YOUR SUCCESS WITH- **VIDEO GURU**



A COMPLETE VIDEO CLASS
FOR YOUR PREPARATION

Subscribe
BUTTON 

BOOST YOUR PREPARATIONS WITH MAHENDRAS: STUDY MATERIAL, E-MICA, E-NEWS, BAGS & MUCH MORE. VISIT NOW: myshop.mahendras.com

21

Which two signs should be interchanged to make the given equation correct?/दिए गए समीकरण को सही बनाने के लिए किन दो संकेतों का परस्पर संबंध होना चाहिए?

$$16+3-5\times 2\div 4=9$$



- A. \div and $+$
- B. \times and $-$
- C. \div and \times
- D. \times and $+$

DAILY CLASS TIME
6:15 PM

Mahendra's

ENSURE YOUR SUCCESS WITH- **VIDEO GURU**



A COMPLETE VIDEO CLASS
FOR YOUR PREPARATION


Subscribe
BUTTON 

BOOST YOUR PREPARATIONS WITH MAHENDRAS: STUDY MATERIAL, E-MICA, E-NEWS, BAGS & MUCH MORE. VISIT NOW: myshop.mahendras.com

22

Three of the following four letter- clusters are alike in a certain way and one is different. Pick the odd one out.

निम्नलिखित चार पत्र समूहों में से तीन एक निश्चित तरीके से एक जैसे हैं और एक अलग है। विषम को बाहर उठाओ।



- A. UTTAR PRADESH
- B. KERALA
- C. MAHARASHTRA
- D. TAMILNADU

DAILY CLASS TIME
6:15 PM

 **Mahendra's**

ENSURE YOUR SUCCESS WITH- VIDEO GURU



A COMPLETE VIDEO CLASS
FOR YOUR PREPARATION


Subscribe
BUTTON 

BOOST YOUR PREPARATIONS WITH MAHENDRAS: **STUDY MATERIAL, E-MICA, E-NEWS, BAGS & MUCH MORE.** VISIT NOW: myshop.mahendras.c

23

Three of the following four number-pair are alike in a certain way and one is different. Pick the odd one out.

निम्नलिखित चार-जोड़ी में से तीन एक निश्चित तरीके से एक जैसे हैं और एक अलग है।
विषम को बाहर उठाओ।



- A. 8: 69
- B. 13: 179
- C. 12: 149
- D. 14: 201

DAILY CLASS TIME
6:15 PM

 **Mahendra's**

ENSURE YOUR SUCCESS WITH- VIDEO GURU



A COMPLETE VIDEO CLASS
FOR YOUR PREPARATION

Subscribe
BUTTON

BOOST YOUR PREPARATIONS WITH MAHENDRAS: STUDY MATERIAL, E-MICA, E-NEWS, BAGS & MUCH MORE. VISIT NOW: myshop.mahendras.com

24

If/अगर

+ denotes/ अर्थ है -

- denotes/ अर्थ है *

* denotes/ अर्थ है /

/ denotes/ अर्थ है +

Then what will the value of/ तब क्या मूल्य होगा $25-2/10*5+2=?$

DAILY CLASS TIME

6:15 PM




(a) 10

(b) 26

(c) 58

(d) 50



 Mahendra's

ENSURE YOUR SUCCESS WITH- VIDEO GURU



A COMPLETE VIDEO CLASS
FOR YOUR PREPARATION

Subscribe
BUTTON 

BOOST YOUR PREPARATIONS WITH MAHENDRAS: STUDY MATERIAL, E-MICA, E-NEWS, BAGS & MUCH MORE. VISIT NOW: myshop.mahendras.com

25

Select the term that will come next in the following series.

श्रृंखला में आने वाले अगले शब्द का चयन करें।

5, 9, ?, 29, 45



(a) 25



(b) 17

(c) 15

(d) 19

DAILY CLASS TIME

6:15 PM

 Mahendra's

ENSURE YOUR SUCCESS WITH- VIDEO GURU



A COMPLETE VIDEO CLASS
FOR YOUR PREPARATION

Subscribe
BUTTON

BOOST YOUR PREPARATIONS WITH MAHENDRAS: STUDY MATERIAL, E-MICA, E-NEWS, BAGS & MUCH MORE. VISIT NOW: myshop.mahendras.c

26

Statement:

During a fight between two groups of a class last night, many vehicles were damaged by throwing stones on each other.

Courses of Action: I. The local police should arrest the ones found guilty of doing these acts.
II. The local police should call the school authority to bring the situation under control.

कथन:

कल रात एक वर्ग के दो समूहों के बीच लड़ाई के दौरान एक-दूसरे पर पत्थर फेंकने से कई वाहन क्षतिग्रस्त हो गए।

कार्यवाहियां:

I. स्थानीय पुलिस को इन कृत्यों को करने के लिए दोषी पाए गए लोगों को गिरफ्तार करना चाहिए।
II. स्थिति को नियंत्रण में लाने के लिए स्थानीय पुलिस को स्कूल प्राधिकरण को फोन करना चाहिए।




- (a) If only I follows.
- (b) If only II follows.
- (c) If neither I nor II follows
- (d) If both I and II follow.

Two positions of dice are shown below. How many points will appear on the opposite to the face containing 5 points?



1. 3

2. 1

3. 2



4. 4




28

Find the odd one out from the given alternatives.

दिए गए विकल्पों में से विषम को ज्ञात कीजिए।



1. (1, 0)



2. (2 ,3)

3. (3 , 8)

4. (4 , 27)

29

If the 25th of August in a year is Thursday, the number of Mondays in that month is

यदि एक वर्ष में 25 अगस्त गुरुवार है, तो उस महीने में सोमवार की संख्या है




1. 2

2. 3

3. 4

4. 5



 Mahendra's

ENSURE YOUR SUCCESS WITH- **VIDEO GURU**



A COMPLETE VIDEO CLASS
FOR YOUR PREPARATION

Subscribe
BUTTON 

BOOST YOUR PREPARATIONS WITH MAHENDRAS: STUDY MATERIAL, E-MICA, E-NEWS, BAGS & MUCH MORE. VISIT NOW: myshop.mahendras.c

30


Which of the following combination is not correct.

निम्नलिखित में से कौन सा संयोजन सही नहीं है।



A. KABADDI = 7

B. POLO = 4



C. BASEBALL = 8

D. BASKET BALL = 5

WAS THIS SESSION HELPFUL

?????

 **Mahendra's**

ENSURE YOUR SUCCESS WITH- **VIDEO GURU**



A COMPLETE VIDEO CLASS
FOR YOUR PREPARATION

Subscribe
BUTTON 

BOOST YOUR PREPARATIONS WITH MAHENDRAS: **STUDY MATERIAL, E-MICA, E-NEWS, BAGS & MUCH MORE.** VISIT NOW: [myshop.mahendras.c](http://myshop.mahendras.com)



Happy Holi



 **Mahendra's**

ENSURE YOUR SUCCESS WITH- VIDEO GURU



A COMPLETE VIDEO CLASS
FOR YOUR PREPARATION

Subscribe
BUTTON



BOOST YOUR PREPARATIONS WITH MAHENDRAS: STUDY MATERIAL, E-MICA, E-NEWS, BAGS & MUCH MORE. VISIT NOW: myshop.mahendras.com



Mahendra's



RAILWAY NTPC/GROUP D

6:15 PM REASONING

NTPC 2020

 **LIVE TEST**

2020

WITH TRICKS



Mahendra's

ENSURE YOUR SUCCESS WITH- **VIDEO GURU**



A COMPLETE VIDEO CLASS
FOR YOUR PREPARATION

Subscribe
BUTTON



BOOST YOUR PREPARATIONS WITH MAHENDRAS: STUDY MATERIAL, E-MICA, E-NEWS, BAGS & MUCH MORE. VISIT NOW: myshop.mahendras.com

 Mahendra's

ENSURE YOUR SUCCESS WITH- **VIDEO GURU**



A COMPLETE VIDEO CLASS
FOR YOUR PREPARATION

Subscribe
BUTTON



BOOST YOUR PREPARATIONS WITH MAHENDRAS: **STUDY MATERIAL, E-MICA, E-NEWS, BAGS & MUCH MORE.** VISIT NOW: [myshop.mahendras.c](http://myshop.mahendras.com)