



# Don't Let Your Studies Get Impacted By COVID-19 Pandemic

Stay Home & Study Online With Mahendras Hybrid Model

## Features



Offline Classes



Live Interactive Online Classes



Same Faculty



Same Batch



Same Batch Timing



Online Library Facility



Recorded Video



PDFs



Classes In Both Model

CONTACT US:

1800-103-5225

[www.mahendras.org](http://www.mahendras.org)



# UPCOMING ONLINE BATCHES



## JUNE 2021

02 June 2021

10:30 AM to 12:30 PM  
**LIVE PREMIUM  
SILVER CARD**  
(CGL & CHSL)

05:30 PM to 07:30 PM  
**LIVE PREMIUM  
GREEN CARD**  
(BANK-PO & CLERK)

10:30 AM to 12:30 PM  
**UPSSSC PET  
2021**  
(ONLINE LIVE CLASS)

03:00 PM to 06:30 PM  
**SBI CLERK  
PRELIMS 2021**  
(ONLINE LIVE CLASS)

01:00 PM to 03:00 PM  
**MATHS  
COMPLETE COURSE**

**BILINGUAL**

09 June 2021

05:30 PM to 07:30 PM  
**GS COMPLETE  
COURSE**  
(ONLINE LIVE CLASS)

08:00 AM to 10:00 AM  
**ENGLISH  
FOUNDATION  
COURSE**

03:00 PM to 05:00 PM  
**REASONING  
FOUNDATION  
COURSE**

**BILINGUAL**

09 June 2021

01:00 PM to 03:00 PM  
**LIVE PREMIUM  
SILVER CARD**  
(CGL & CHSL)

08:00 AM to 10:00 AM  
**LIVE PREMIUM  
GREEN CARD**  
(BANK-PO & CLERK)

10:30 AM to 12:30 PM  
**UP POLICE  
SI 2021**  
(ONLINE LIVE CLASS)

03:00 PM to 05:00 PM  
**UPSSSC  
PET 2021**  
(ONLINE LIVE CLASS)

**BILINGUAL**

07:30 PM to 09:30 PM  
**LIVE PREMIUM GREEN CARD**  
(IBPS PO & CLERK)

**ENGLISH MEDIUM**

16 June 2021

05:30 PM to 07:30 PM  
**LIVE PREMIUM  
SILVER CARD**  
(CGL & CHSL)

03:00 PM to 05:00 PM  
**LIVE PREMIUM  
GREEN CARD**  
(BANK-PO & CLERK)

05:30 PM to 07:30 PM  
**MAC SSC  
2021**  
(ONLINE LIVE CLASS)

01:00 PM to 03:00 PM  
**UPSSSC PET  
2021**  
(ONLINE LIVE CLASS)

**BILINGUAL**

23 June 2021

08:00 AM to 10:00 AM  
**LIVE PREMIUM  
SILVER CARD**  
(CGL & CHSL)

01:00 PM to 03:00 PM  
**LIVE PREMIUM  
GREEN CARD**  
(BANK-PO & CLERK)

05:30 PM to 07:30 PM  
**UPSSSC PET  
2021**  
(ONLINE LIVE CLASS)

**BILINGUAL**

07:30 PM to 09:30 PM  
**LIVE PREMIUM SILVER CARD**  
(CGL & CHSL)

**ENGLISH MEDIUM**

30 June 2021

03:00 PM to 05:00 PM  
**LIVE PREMIUM  
SILVER CARD**  
(CGL & CHSL)

10:30 AM to 12:30 PM  
**LIVE PREMIUM  
GREEN CARD**  
(BANK-PO & CLERK)

07:30 PM to 09:30 PM  
**LIVE PREMIUM  
GREEN CARD**  
(BANK-PO & CLERK)

08:00 AM to 10:00 AM  
**UPSSSC PET  
2021**  
(ONLINE LIVE CLASS)

**BILINGUAL**



1800-103-5225



www.mahendras.org

टेस्ट सीरीज  
हिन्दी + अंग्रेजी



# यूपीएसएसएससी पीईटी मॉक टेस्ट 2021



टेस्ट + ई-बुक





*Mahendra's*

**LIVE CLASS**

# यूपीएसएसएससी पीईटी 2021


## कम्पलीट बैच

बैच आरंभ तिथि : 2 जून, 2021


सुबह 10:30 बजे से दोपहर 12:30 बजे तक




हिन्दी + अंग्रेजी  
(मिश्रित भाषा)

- 


**Juthika Das** 21 hours ago  
10+9=19  
19 square =361  
Thank you sir 😊

👍 1 🗨️ REPLY
- 


**Anand Kumar** 14 hours ago (edited)  
Option A(361) is the right ✅ answer,  
Thanks sir 🙏  
Very nice session sir 👍👍👍

👍 🗨️ REPLY
- 


**MISTY MISTY** 📱👉 21 hours ago  
10+9=19  
19ka square =361option (a) is right  
Nice session tha sir 🙏

👍 🗨️ REPLY
- 


**Mannveer Singh** 18 hours ago  
19^2 =361

👍 🗨️ REPLY
- 


**Sania S** 21 hours ago  
Option (A) 361.  
10+9= 19^2= 361👍👍👍  
nice session sir 🙏

👍 🗨️ REPLY
- 


**Sukhchand Paradkar** 8 hours ago  
361.👍👍👍

👍 🗨️ REPLY
- 


**Manidipa Mandal** 21 hours ago  
Option (A) 361.  
10+9= 19^2= 361.  
Thank you sir.....Nice session sir.....🙏🙏🙏🙏🙏

👍 🗨️ REPLY
- 


**Khushboo Meena** 20 hours ago  
361

👍 🗨️ REPLY
- 


**Himani gupta** 20 hours ago  
361

👍 🗨️ REPLY
- 


**SPG** 52 minutes ago  
361

👍 🗨️ REPLY
- 


**Chandan Yadav** 56 minutes ago  
361

👍 🗨️ REPLY
- 

**Simran Rahi** 2 hours ago  
361

👍 🗨️ REPLY
- 

**Malika Varshney** 3 hours ago  
361

👍 🗨️ REPLY
- 

**Muskan Jaiswal** 19 hours ago  
361

👍 🗨️ REPLY

- 

**Muskan Jaiswal** 19 hours ago  
361

👍 🗨️ REPLY
- 

**Ankush Malik** 20 hours ago  
361

👍 🗨️ REPLY
- 

**Roshni Khandelwal** 21 hours ago  
361

👍 🗨️ REPLY
- 

**Gudiya Kumari** 21 hours ago  
361

👍 🗨️ REPLY
- 

**Abhishek Pandey** 21 hours ago  
361

👍 🗨️ REPLY
- 

**Babli Kumari** 21 hours ago  
361

👍 🗨️ REPLY
- 

**Ankita Goyal** 21 hours ago  
361

👍 🗨️ REPLY
- 

**Rajendra Rawat** 21 hours ago  
361

👍 🗨️ REPLY



**Rajendra Rawat** 21 hours ago  
361

👍 👎 REPLY



**Priya yadav** 21 hours ago  
361 👍👍

👍 👎 REPLY



**Ashutosh gautam** Ashutosh gautam 20 hours ago  
275

👍 👎 REPLY



**nikita Chauhan** 21 hours ago  
Homework ans is  
Option AAA  
361 ✅✅✅👍👍👍  
👍👍👍 --  
Read more

👍 1 👎 REPLY



**Ray Nidhi** 21 hours ago  
Very nice session sir

👍 👎 REPLY



**Santosh Pradhan** 14 hours ago  
Ssc chsl exme held on which date?

👍 👎 REPLY



**QUARANTINED NOOB** 3 hours ago  
 $10+9 = 19$  /  $19 \text{ square} = 361$  Ans

👍 👎 REPLY



**Neha Vishwakarma** 21 hours ago  
361 will be the correct answer



**mohit sonkar** 21 hours ago  
 $10+2=19$   
 $19\text{square}=361$

👍 👎 REPLY



**Ray Nidhi** 21 hours ago  
361 sir home work ka ans hoga

👍 👎 REPLY



**UPENDRA SINGH SHIVANSHU** 21 hours ago  
361 right answer

👍 1 👎 REPLY



**Nonigopal Mistry** 20 hours ago  
Ans. (A) 361.

👍 👎 REPLY



**saloni bhargav** 21 hours ago  
Answer- option A

👍 👎 REPLY



**HE-MAN** 18 hours ago  
361 homework answer

👍 👎 REPLY



**Radha Garima** 21 hours ago  
Ans : 361

👍 👎 REPLY



**vaibhav sahu** 20 hours ago  
361 is answer

👍 👎 REPLY



**SAPANA WAKODE** 19 hours ago  
A. 361

👍 👎 REPLY



**Vardhman Daga** 20 hours ago  
A 361

👍 👎 REPLY



**Ashwini Kumar** 19 hours ago  
A

👍 👎 REPLY




For Your Any Type of Reasoning Related Queries Join  
Telegram Channel : **Reasoning Mahendras Live**

Get Additional **10%** Discount On All Products & Services  
of Mahendras

Use Code : **E09419**

Which number will replace the question mark ?



- (A) 361  
(C) 65

- (B) 296  
(D) 19



Find the Missing one (?)

**22 : 10 :: 32 : ?**

- (A) 12**
- (B) 15**
- (C) 14**
- (D) 13**



Find the option which should replace (?)

**127, 63 , 31 , 15 , 7, ?**

- (A) 2
- (B) 3
- (C) 5
- (D) 4



# Find the missing one (?)

**12 : 72 :: 14 : ?**

- (A) 96
- (B) 93
- (C) 98
- (D) 140

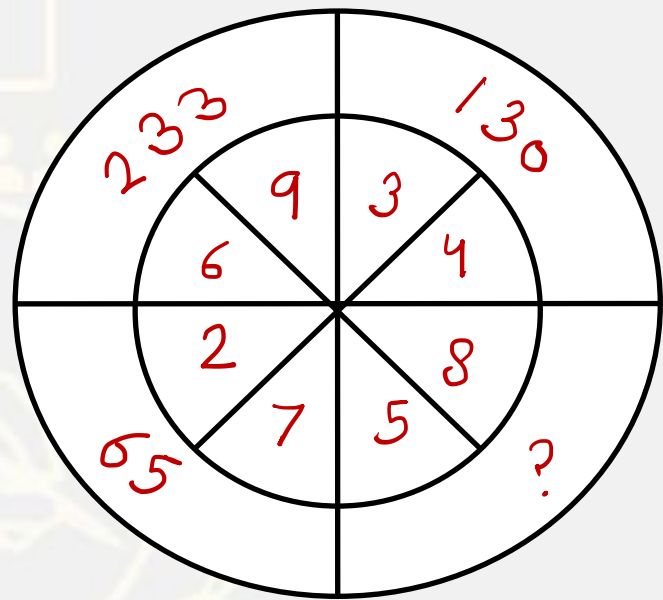


Find the missing term(?)

$$832 : 48 :: 962 : ?$$

- (A) 50
- (B) 96
- (C) 120
- (D) 108





- (A) 300
- (B) 343
- (C) 306
- (D) 204



Find the missing term(?)

**1137 : 441 :: 4312 : ?**

- (A) 576**
- (B) 676**
- (C) 625**
- (D) 729**



If Febuary 29<sup>th</sup> falls on a Monday , What would be the 11<sup>th</sup> day of the month ?

यदि 29 फरवरी सोमवार को पड़ता है, तो महीने का 11 वां दिन क्या होगा?

- (A) Monday
- (B) Tuesday
- (C) Wednesday
- (D) Thursday



Find the missing one (?)

**4 , 196 , 16 , 169 , ? , 144 , 256**

A. 64

B. 81

C. 36

D. 32



**Find the Missing one (?)**

$$14 \$ 8 = 91$$

$$18 \$ 4 = 51$$

$$21 \$ 9 = ?$$

**(A) 160**

**(B) 155**

**(C) 151**

**(D) 168**



Find the option which should replace (?)

$$442 : 21 :: ? : ?$$

- A. 223 : 13
- B. 238 : 14
- C. 323 : 19
- D. 257 : 16





Find the option which should replace (?)

**JK : 1716 :: RS : ?**

- A. 98**
- B. 109**
- C. 910**
- D. 89**



Find the option which should replace (?)

$$20 + 15 = 20$$

$$64 + 13 = 204$$

$$59 + 28 = ?$$



- A. 158
- B. 165
- C. 164
- D. 124

**Find the Wrong term(?)**

**144 , 441, 100 , 225 , 400, 2000**

**(A) 2000**

**(B) 225**

**(C) 400**

**(D) 441**



Find the missing :-

**( 10 , 98 , 8 )**

1. ( 6 , 55 , 7 )

2. ( 5 , 40 , 7 )

3. ( 1 , 15 , 2 )

4. ( 5 , 25 , 4 )



Find the missing :-

**1 , 7 , ? , 37 , 61 , 91**

1. 20
2. 18
3. 19
4. 26





Find the missing :-

$$37 * 14 = 17$$

$$91 * 125 = 72$$

$$28 * 125 = ?$$

1. 26
2. 42
3. 34
4. 51



Find the odd one (?)

- (A) 6450
- (B) 2124
- (C) 3540
- (D) 7080



Find the option which should replace (?)

**0 , 6 , 24 , 60 , 120 , 210 ,**

- (A) 334**
- (B) 335**
- (C) 336**
- (D) 337**



Find the missing term(?)

$$9 : 162 :: 8 : ?$$

(A) 162

(B) 128

(C) 96

(D) 112



Find the missing term(?)

$$30 : 16 :: 102 : ?$$

- (A) 49
- (B) 52
- (C) 61
- (D) 98





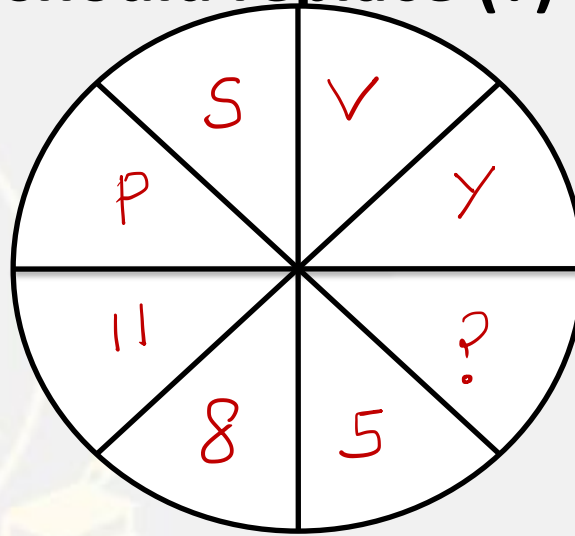
If there is 6:30am in a clock . Minute hand is on 6 number  
.....Where is minute hand show after 720 Degree .

अगर घड़ी में 6:30 बजे हैं। मिनट हाथ 6 नंबर पर है ..... 720  
डिग्री के बाद मिनट हैंड कहां शो है।

1. 12
2. 7
3. 6
4. 5



Find the option which should replace (?)



- (A) 3
- (B) 2
- (C) 7
- (D) 6