



SSC CGL 2019



LAST

मास्टर स्ट्रोक

लगातार 4 घंटे

 Mahendra's

ENSURE YOUR SUCCESS WITH- VIDEO GURU



A COMPLETE VIDEO CLASS
FOR YOUR PREPARATION

Subscribe
BUTTON 

BOOST YOUR PREPARATIONS WITH MAHENDRAS: STUDY MATERIAL, E-MICA, E-NEWS, BAGS & MUCH MORE. VISIT NOW: myshop.mahendras.com

RITIKA MAHENDRAS

<https://t.me/joinchat/AAAAAFIFrmfglJslepg3yg>



Mahendra's

ENSURE YOUR SUCCESS WITH- VIDEO GURU



A COMPLETE VIDEO CLASS
FOR YOUR PREPARATION

Subscribe
BUTTON

BOOST YOUR PREPARATIONS WITH MAHENDRAS: **STUDY MATERIAL, E-MICA, E-NEWS, BAGS & MUCH MORE.** VISIT NOW: myshop.mahendras.com

VIDEO COURSE

CODING DECODING AND MACHINE INPUT SBI & RBI



₹99



LIVE CLASS

BIHAR POLICE SI MAIN EXAM 2019

25 DAYS COURSE



GENERAL STUDIES



Mahendra's

ENSURE YOUR SUCCESS WITH- VIDEO GURU



A COMPLETE VIDEO CLASS
FOR YOUR PREPARATION

Subscribe
BUTTON



BOOST YOUR PREPARATIONS WITH MAHENDRAS: STUDY MATERIAL, E-MICA, E-NEWS, BAGS & MUCH MORE. VISIT NOW: myshop.mahendras.com


1

Three of the following four words are alike in a certain way and one is different. Pick the odd one out

निम्नलिखित चार शब्दों में से तीन एक समान हैं विषम को ज्ञात कीजिए।

DAILY CLASS TIME

9:45 AM




- A. Big/बड़ा
- B. Expensive/महंगा
- C. Costly/महंगा
- D. Valuable/मूल्यवान


2

Select the figure that will come next in the following series


निम्नलिखित श्रृंखला में आने वाले आंकड़े का चयन करें



B



C



D



DAILY CLASS TIME

9:45 AM

Mahendra's

ENSURE YOUR SUCCESS WITH- **VIDEO GURU**



A COMPLETE VIDEO CLASS
FOR YOUR PREPARATION

Subscribe
BUTTON




BOOST YOUR PREPARATIONS WITH MAHENDRAS: STUDY MATERIAL, E-MICA, E-NEWS, BAGS & MUCH MORE. VISIT NOW: myshop.mahendras.com

3 If 1st march is Saturday then 1st april will be
अगर 1 मार्च शनिवार है तो 1 अप्रैल होगा



- A. Sunday/रविवार
- B. Monday/सोमवार
- C. Tuesday/मंगलवार
- D. Wednesday/बुधवार



DAILY CLASS TIME
6:15 PM

Mahendra's

ENSURE YOUR SUCCESS WITH- VIDEO GURU



A COMPLETE VIDEO CLASS
FOR YOUR PREPARATION

Subscribe
BUTTON



BOOST YOUR PREPARATIONS WITH MAHENDRAS: STUDY MATERIAL, E-MICA, E-NEWS, BAGS & MUCH MORE. VISIT NOW: myshop.mahendras.c

4

Nisha and Deepak are a married couple and have a daughter named Tanya. Currently, Deepak is 5 years older than Nisha and Nisha is thrice the age of Tanya. If Tanya is 10 years old what was her father's age at the time of his daughter's birth?

निशा और दीपक एक विवाहित जोड़े हैं और तान्या नाम की एक बेटी है। वर्तमान में, दीपक निशा से 5 साल बड़ा है और निशा तान्या की उम्र से तीन गुना अधिक है। अगर तान्या 10 साल की है तो उसकी बेटी के जन्म के समय उसके पिता की उम्र क्या थी?

A. 35 years

 B. 25 years

C. 30 years

D. 20 years



DAILY CLASS TIME
9:45 AM

 **Mahendra's**

ENSURE YOUR SUCCESS WITH- VIDEO GURU



A COMPLETE VIDEO CLASS
FOR YOUR PREPARATION

Subscribe
BUTTON 

BOOST YOUR PREPARATIONS WITH MAHENDRAS: **STUDY MATERIAL, E-MICA, E-NEWS, BAGS & MUCH MORE.** VISIT NOW: myshop.mahendras.c

5

Find the missing number from the given options

दिए गए विकल्पों में से लुप्त संख्या ज्ञात कीजिए

19	78	20
25	144	47
16	?	13



- A. 96
- B. 76
- C. 58
- D. 29



6

Which two signs should be interchanged in the following equation to make it correct?

इसे सही बनाने के लिए निम्नलिखित समीकरण में किन दो संकेतों का परस्पर संबंध होना चाहिए?

$$8 \times 2 + 5 - 16 \div 4 = 14$$



- A. \times and -
- B. \times and +
- C. \div and \times
- D. \div and +

DAILY CLASS TIME
9:45 AM

Mahendra's

ENSURE YOUR SUCCESS WITH- **VIDEO GURU**



A COMPLETE VIDEO CLASS
FOR YOUR PREPARATION

Subscribe
BUTTON



BOOST YOUR PREPARATIONS WITH MAHENDRAS: STUDY MATERIAL, E-MICA, E-NEWS, BAGS & MUCH MORE. VISIT NOW: myshop.mahendras.com

7

Select the word pair in which the two words are related in the same way as the two words in the following word-pair.

शब्द जोड़ी का चयन करें जिसमें दो शब्द उसी तरह से संबंधित हैं जैसे कि निम्नलिखित शब्द-जोड़ी में दो शब्द।

Season: Winter/सीज़न: सर्दी



A. Week: calendar/सप्ताह: कैलेंडर

B. Summer :Autumn/ग्रीष्म: शरद ऋतु

C. Year : Century/वर्ष: सेंचुरी

D. Month : April/महीना: अप्रैल

DAILY CLASS TIME

9:45 AM

 Mahendra's

ENSURE YOUR SUCCESS WITH- **VIDEO GURU**



A COMPLETE VIDEO CLASS
FOR YOUR PREPARATION

Subscribe
BUTTON 


BOOST YOUR PREPARATIONS WITH MAHENDRAS: STUDY MATERIAL, E-MICA, E-NEWS, BAGS & MUCH MORE. VISIT NOW: myshop.mahendras.com

9

Find the missing number from the below options.

नीचे दिए गए विकल्पों में से लुप्त संख्या ज्ञात कीजिए।

12	7	95
14	8	132
16	9	?




- A. 175
- B. 164
- C. 185
- D. 154

In the code language, COMPUTER is written as IVGFKNLX

how will TELEPHONE be written in that language?

कोड भाषा में, COMPUTER को IVGFKNLX के रूप में लिखा गया है,
उस भाषा में TELEPHONE कैसे लिखा जाएगा?



- A. VMNSKVOVG
- B. GVOVKSLMV
- C. VMLSKUOVG
- D. VMLSKVOVG

11


Select the term that will come next in the following series.

अगले श्रृंखला में आने वाले शब्द का चयन करें।

3,4,5,6,9,10,11,12,15,?

DAILY CLASS TIME

9:45 AM



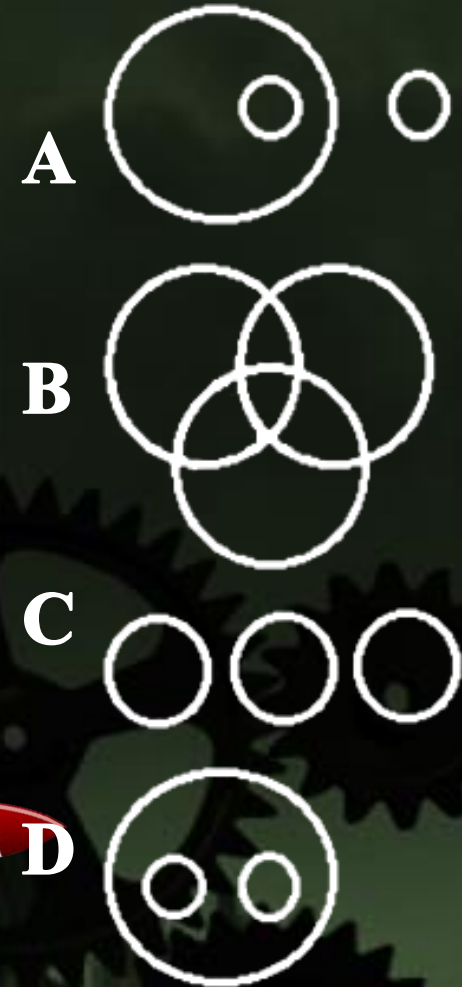
- A. 16
- B. 17
- C. 14
- D. 18

12

Select the venn diagram that best represents the relationship among the given set of classes.

वेन आरेख का चयन करें जो वर्गों के दिए गए सेट के बीच संबंधों का सबसे अच्छा प्रतिनिधित्व करता है।

Students, Teachers, School



A square paper is folded and cuts as shown below. How will it appear when unfolded?

एक चौकोर कागज मुड़ा हुआ है और नीचे दिखाया गया है। सामने आने पर यह कैसे दिखाई देगा?



A



B



C



D



14

Which letter will replace the question mark (?) in the following series?

निम्नलिखित श्रृंखला में कौन सा अक्षर प्रश्न चिह्न (?) को प्रतिस्थापित करेगा?

A, B, E, J, Q, ?



A. A

B. Y

C. X

D. Z



DAILY CLASS TIME

9:45 AM

 Mahendra's

ENSURE YOUR SUCCESS WITH- **VIDEO GURU**



A COMPLETE VIDEO CLASS
FOR YOUR PREPARATION

Subscribe
BUTTON 

BOOST YOUR PREPARATIONS WITH MAHENDRAS: STUDY MATERIAL, E-MICA, E-NEWS, BAGS & MUCH MORE. VISIT NOW: myshop.mahendras.com

16

Saksham introduced Nidhi to his friend, "She is the daughter of the only son of my father's wife". How is saksham related to Nidhi?
सक्षम ने निधि को अपने दोस्त से मिलवाया, "वह मेरे पिता की पत्नी के इकलौते बेटे की बेटी है"। निधि से कैसे जुड़ा है सक्षम?

- A. Son
- B. Cousin
- C. Father
- D. Brother



DAILY CLASS TIME
9:45 AM

Mahendra's

ENSURE YOUR SUCCESS WITH- VIDEO GURU



A COMPLETE VIDEO CLASS
FOR YOUR PREPARATION

Subscribe
BUTTON

BOOST YOUR PREPARATIONS WITH MAHENDRAS: **STUDY MATERIAL, E-MICA, E-NEWS, BAGS & MUCH MORE.** VISIT NOW: myshop.mahendras.com

17

Select the option that will come in the following series.

निम्नलिखित श्रृंखला में आने वाले विकल्प का चयन करें।

BOP, DPN, FQL, HRJ, ?



A. JSH

B. JSI

C. ISH

D. ITI

DAILY CLASS TIME

9:45 AM

Mahendra's

ENSURE YOUR SUCCESS WITH- VIDEO GURU



A COMPLETE VIDEO CLASS
FOR YOUR PREPARATION

Subscribe
BUTTON

BOOST YOUR PREPARATIONS WITH MAHENDRAS: STUDY MATERIAL, E-MICA, E-NEWS, BAGS & MUCH MORE. VISIT NOW: myshop.mahendras.c

18

Three different positions of a dice are shown below. Which number appears on the face opposite number 3?

एक पासा के तीन अलग-अलग पदों को नीचे दिखाया गया है। नंबर 3 के विपरीत चेहरे पर कौन सी संख्या दिखाई देती है?



- A. 5
- B. 6
- C. 2
- D. 4

DAILY CLASS TIME
9:45 AM

Mahendra's

ENSURE YOUR SUCCESS WITH- **VIDEO GURU**



A COMPLETE VIDEO CLASS
FOR YOUR PREPARATION

Subscribe
BUTTON

BOOST YOUR PREPARATIONS WITH MAHENDRAS: STUDY MATERIAL, E-MICA, E-NEWS, BAGS & MUCH MORE. VISIT NOW: myshop.mahendras.com

19

Three of the following four letter clusters are alike in a certain way and one is different. Pick the odd one out

निम्नलिखित चार पत्र समूहों में से तीन एक निश्चित तरीके से एक जैसे हैं और एक अलग है। विषम का चयन करें।



- A. POWZ
- B. KNQT
- C. FILO
- D. QTWZ



DAILY CLASS TIME
9:45 AM

Mahendra's

ENSURE YOUR SUCCESS WITH- **VIDEO GURU**



A COMPLETE VIDEO CLASS
FOR YOUR PREPARATION

Subscribe
BUTTON

BOOST YOUR PREPARATIONS WITH MAHENDRAS: STUDY MATERIAL, E-MICA, E-NEWS, BAGS & MUCH MORE. VISIT NOW: myshop.mahendras.com

Statements: Some teachers are Philosophers./कुछ शिक्षक दार्शनिक हैं।
Some Philosophers are writers./कुछ दार्शनिक लेखक हैं

Conclusion: I. Some Writers are Teachers/कुछ लेखक शिक्षक हैं।
II. All writer is a teacher/सब लेखक शिक्षक नहीं होता है।

- A. Only conclusions II follows
- B. Either conclusion I and II follows
- C. Neither conclusion I or II follows
- D. Only conclusion I follows



DAILY CLASS TIME
9:45 AM

21

If EAGER is coded as 95715 then how will CADEY be coded?

यदि EAGER को 95715 के रूप में कोडित किया जाता है तो CADEY को कैसे कोडित किया जाएगा?



A. 75413

B. 34157

C. 31547

D. 31450

DAILY CLASS TIME

9:45 AM

 Mahendra's

ENSURE YOUR SUCCESS WITH- **VIDEO GURU**



A COMPLETE VIDEO CLASS
FOR YOUR PREPARATION

Subscribe
BUTTON 

BOOST YOUR PREPARATIONS WITH MAHENDRAS: STUDY MATERIAL, E-MICA, E-NEWS, BAGS & MUCH MORE. VISIT NOW: myshop.mahendras.com

22

Arrange the following number in a logical and meaningful order.

निम्नलिखित संख्या को एक तार्किक और सार्थक क्रम में व्यवस्थित करें।

1) Egypt/मिस्र

2) Africa/अफ्रीका

3) Great Pyramid/महान पिरामिड

4) World/विश्व

5) Giza/गिज़ा



A. 3,5,2,1,4



B. 3,5,1,2,4

C. 5,3,1,2,4

D. 5,3,1,4,2

DAILY CLASS TIME

9:45 AM

 Mahendra's

ENSURE YOUR SUCCESS WITH- **VIDEO GURU**



A COMPLETE VIDEO CLASS
FOR YOUR PREPARATION

Subscribe
BUTTON 

BOOST YOUR PREPARATIONS WITH MAHENDRAS: STUDY MATERIAL, E-MICA, E-NEWS, BAGS & MUCH MORE. VISIT NOW: myshop.mahendras.c

Statement: During a fight between two groups of a class last night, many vehicles were damaged by throwing stones on each other.

Courses of Action: I. The local police should arrest the ones found guilty of doing these acts.
II. The local police should call the school authority to bring the situation under control.

कथन: कल रात एक वर्ग के दो समूहों के बीच लड़ाई के दौरान एक-दूसरे पर पत्थर फेंकने से कई वाहन क्षतिग्रस्त हो गए।

कार्यवाहियां: I. स्थानीय पुलिस को इन कृत्यों को करने के लिए दोषी पाए गए लोगों को गिरफ्तार करना चाहिए।
II. स्थिति को नियंत्रण में लाने के लिए स्थानीय पुलिस को स्कूल प्राधिकरण को फोन करना चाहिए।




- (a) If only I follows.
- (b) If only II follows.
- (c) If neither I nor II follows
- (d) If both I and II follow.

24

Select the correct mirror image of the given figure when the mirror is placed to the right of the figure

दिए गए चित्र की सही दर्पण छवि का चयन करें जब दर्पण को आकृति के दाईं ओर रखा जाता है



B



C



D



DAILY CLASS TIME

9:45 AM

Mahendra's

ENSURE YOUR SUCCESS WITH- **VIDEO GURU**



A COMPLETE VIDEO CLASS
FOR YOUR PREPARATION

Subscribe
BUTTON


BOOST YOUR PREPARATIONS WITH MAHENDRAS: STUDY MATERIAL, E-MICA, E-NEWS, BAGS & MUCH MORE. VISIT NOW: myshop.mahendras.com

25


Select the figure in which the given figure is embedded
 उस आकृति का चयन करें जिसमें दी गई आकृति अंतर्निहित है




A



B



C



D



26

‘China’ is related to ‘Yuan’ in the same way as ‘Japan’ is related to

‘_____’,

‘चीन’ ’युआन से उसी तरह संबंधित है जैसे जापान’ का _____ ’से संबंध है



A. Rand

B. Sushi

C. Lira

D. Yen



DAILY CLASS TIME

9:45 AM

 Mahendra's

ENSURE YOUR SUCCESS WITH- **VIDEO GURU**



A COMPLETE VIDEO CLASS
FOR YOUR PREPARATION

Subscribe
BUTTON 

BOOST YOUR PREPARATIONS WITH MAHENDRAS: STUDY MATERIAL, E-MICA, E-NEWS, BAGS & MUCH MORE. VISIT NOW: myshop.mahendras.c

27

Corbett national park :Uttarakhand :: kaziranga nationalpark : ?
कॉर्बेट राष्ट्रीय उद्यान: उत्तराखंड :: काजीरंगा राष्ट्रीय उद्यान:?



A. ODISHA

B. ASSAM

C. TAMILNADU

D. KARNATAKA

 Mahendra's

ENSURE YOUR SUCCESS WITH- **VIDEO GURU**



A COMPLETE VIDEO CLASS
FOR YOUR PREPARATION

Subscribe
BUTTON




BOOST YOUR PREPARATIONS WITH MAHENDRAS: STUDY MATERIAL, E-MICA, E-NEWS, BAGS & MUCH MORE. VISIT NOW: myshop.mahendras.com

28

Find the missing number.

लुप्त संख्या का पता लगाएं।



A. 8

B. 12

C. 1

D. 6

WTO : Geneva :: International Cricket Council : ?

WTO: जिनेवा :: अंतर्राष्ट्रीय क्रिकेट परिषद:?



*International
Cricket Council*



A. Washington DC

B. England

C. Dubai

D. India

30

What will be the water image when the clock shows the time 8 'O' Clock?

जब घड़ी 8 का समय होता है। तो जल प्रतिबिम्ब क्या होगा।



A. 10:30

B. 10:38

C. 15:28

D. 10:26

DAILY CLASS TIME
6:15 PM

Mahendra's

ENSURE YOUR SUCCESS WITH- **VIDEO GURU**



A COMPLETE VIDEO CLASS
FOR YOUR PREPARATION


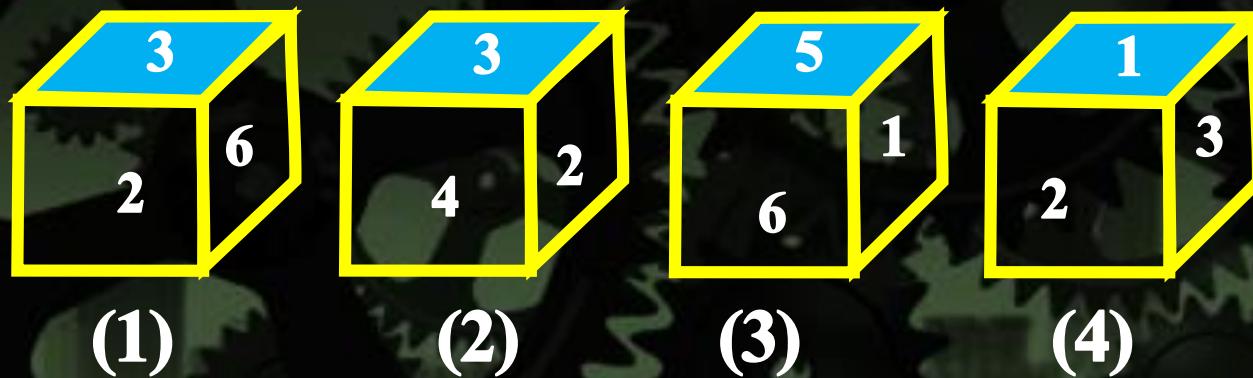
Subscribe
BUTTON



BOOST YOUR PREPARATIONS WITH MAHENDRAS: STUDY MATERIAL, E-MICA, E-NEWS, BAGS & MUCH MORE. VISIT NOW: myshop.mahendras.c

Choose the box that is similar to the box formed from the given sheet of paper (X).

उस बॉक्स को चुनें जो दी गई शीट (X) की शीट से बने बॉक्स के समान है।



A. 1 only

B. 2 only

C. 1 and 4 only

D. 1, 2, 3 and 4 only

Kathak : North India : : Bharatnatyam : ?

कथक: उत्तर भारत :: भरतनाट्यम:?



- A. Kerala/केरल
- B. Andhra Pradesh/आंध्र प्रदेश
- C. Tamilnadu/तमिलनाडु
- D. Assam/असम

33

A clock is so placed that at 12 : 00 noon, its minute hand points Towards north. In which direction does the hour hand point at 1 : 30 pm?
एक घड़ी को इस तरह रखा गया है कि दोपहर 12 बजे, इसके मिनट की सुई उत्तर की ओर इंगित करती है। तो 1: 30 बजे घंटे की सुई किस दिशा में इंगित करेगी?

20

A. Northwest

B. Northeast

C. Southwest

D. south

Daily class time : 9 : 45 am

 Mahendra's

ENSURE YOUR SUCCESS WITH- VIDEO GURU



A COMPLETE VIDEO CLASS
FOR YOUR PREPARATION

Subscribe
BUTTON 

BOOST YOUR PREPARATIONS WITH MAHENDRAS: STUDY MATERIAL, E-MICA, E-NEWS, BAGS & MUCH MORE. VISIT NOW: myshop.mahendras.com

34

An accurate clock shows 8 '0' clock in the morning. Through how many degrees will the hour hand rotates when he clock shows 2 '0' clock in the afternoon?

एक सही घड़ी सुबह 8 बजे का समय दिखाती है। जब वह दोपहर में 2 बजे का समय दिखाती है तो घंटे की सुई कितने डिग्री घूम चुकी होगी।

A. 144 degree

B. 168 degree

C. 180 degree

D. 90 Degree

20

Daily class time : 9 : 45 am

 Mahendra's

ENSURE YOUR SUCCESS WITH- VIDEO GURU



A COMPLETE VIDEO CLASS
FOR YOUR PREPARATION

Subscribe
BUTTON



BOOST YOUR PREPARATIONS WITH MAHENDRAS: STUDY MATERIAL, E-MICA, E-NEWS, BAGS & MUCH MORE. VISIT NOW: myshop.mahendras.com

35


Select the related word from the given alternatives.

दिए गए विकल्पों में से संबंधित शब्द का चयन करें।

EF : UV :: IJ : ?



- A. RQ
- B. QR
- C. PQ
- D. NO



36

Arrange the following word in the logical and meaningful order.

निम्नलिखित शब्द को तार्किक और सार्थक क्रम में व्यवस्थित करें।

1. Probation/परख
2. Promotion/पदोन्नति
3. Job/काम
4. Interview/साक्षात्कार
5. Confirmation/पुष्टीकरण



A. 4,5,2,1,3

B. 4,1,2,5,3

C. 5,1,4,2,3

D. 4,3,1,5,2



DAILY CLASS TIME

9:45 AM

 Mahendra's

ENSURE YOUR SUCCESS WITH- **VIDEO GURU**



A COMPLETE VIDEO CLASS
FOR YOUR PREPARATION


Subscribe
BUTTON 

BOOST YOUR PREPARATIONS WITH MAHENDRAS: STUDY MATERIAL, E-MICA, E-NEWS, BAGS & MUCH MORE. VISIT NOW: myshop.mahendras.com

37

Which among the following is a leap year?

निम्नलिखित में से कौन एक लीप वर्ष है?



- A. 1600
- B. 1900
- C. 1800
- D. All of the above

DAILY CLASS TIME
6:15 PM

Mahendra's

ENSURE YOUR SUCCESS WITH- VIDEO GURU



A COMPLETE VIDEO CLASS
FOR YOUR PREPARATION

Subscribe
BUTTON



BOOST YOUR PREPARATIONS WITH MAHENDRAS: **STUDY MATERIAL, E-MICA, E-NEWS, BAGS & MUCH MORE.** VISIT NOW: myshop.mahendras.com



Mahendra's



RAILWAY NTPC/GROUP D

6:15 PM

REASONING

रेलवे हमारा है।

**30
/
30**

▶ LIVE

ऐसे सवाल भी देख लेना



Mahendra's

ENSURE YOUR SUCCESS WITH- **VIDEO GURU**



A COMPLETE VIDEO CLASS
FOR YOUR PREPARATION

Subscribe
BUTTON



BOOST YOUR PREPARATIONS WITH MAHENDRAS: STUDY MATERIAL, E-MICA, E-NEWS, BAGS & MUCH MORE. VISIT NOW: myshop.mahendras.com

 Mahendra's

ENSURE YOUR SUCCESS WITH- **VIDEO GURU**



A COMPLETE VIDEO CLASS
FOR YOUR PREPARATION

Subscribe
BUTTON



BOOST YOUR PREPARATIONS WITH MAHENDRAS: **STUDY MATERIAL, E-MICA, E-NEWS, BAGS & MUCH MORE.** VISIT NOW: [myshop.mahendras.c](http://myshop.mahendras.com)